

Chapter 12, Solution 1.

(a) If $V_{ab} = 400$, then

$$V_{an} = \frac{400}{\sqrt{3}} \angle -30^\circ = \underline{231 \angle -30^\circ \text{ V}}$$

$$V_{bn} = \underline{231 \angle -150^\circ \text{ V}}$$

$$V_{cn} = \underline{231 \angle -270^\circ \text{ V}}$$

(b) For the acb sequence,

$$V_{ab} = V_{an} - V_{bn} = V_p \angle 0^\circ - V_p \angle 120^\circ$$

$$V_{ab} = V_p \left(1 + \frac{1}{2} - j \frac{\sqrt{3}}{2} \right) = V_p \sqrt{3} \angle -30^\circ$$

i.e. in the acb sequence, V_{ab} lags V_{an} by 30° .

Hence, if $V_{ab} = 400$, then

$$V_{an} = \frac{400}{\sqrt{3}} \angle 30^\circ = \underline{231 \angle 30^\circ \text{ V}}$$

$$V_{bn} = \underline{231 \angle 150^\circ \text{ V}}$$

$$V_{cn} = \underline{231 \angle -90^\circ \text{ V}}$$

Chapter 12, Solution 2.

Since phase c lags phase a by 120° , this is an acb sequence.

$$V_{bn} = 160 \angle (30^\circ + 120^\circ) = \underline{160 \angle 150^\circ \text{ V}}$$

Chapter 12, Solution 3.

Since V_{bn} leads V_{cn} by 120° , this is an abc sequence.

$$V_{an} = 208 \angle (130^\circ + 120^\circ) = \underline{208 \angle 250^\circ \text{ V}}$$

Chapter 12, Solution 4.

$$V_{bc} = V_{ca} \angle 120^\circ = \underline{208 \angle 140^\circ \text{ V}}$$

$$V_{ab} = V_{bc} \angle 120^\circ = \underline{208 \angle 260^\circ \text{ V}}$$

$$V_{an} = \frac{V_{ab}}{\sqrt{3} \angle 30^\circ} = \frac{208 \angle 260^\circ}{\sqrt{3} \angle 30^\circ} = \underline{120 \angle 230^\circ \text{ V}}$$

$$V_{bn} = V_{an} \angle -120^\circ = \underline{120 \angle 110^\circ \text{ V}}$$

Chapter 12, Solution 5.

This is an abc phase sequence.

$$V_{ab} = V_{an} \sqrt{3} \angle 30^\circ$$

$$\text{or } V_{an} = \frac{V_{ab}}{\sqrt{3} \angle 30^\circ} = \frac{420 \angle 0^\circ}{\sqrt{3} \angle 30^\circ} = \underline{242.5 \angle -30^\circ \text{ V}}$$

$$V_{bn} = V_{an} \angle -120^\circ = \underline{242.5 \angle -150^\circ \text{ V}}$$

$$V_{cn} = V_{an} \angle 120^\circ = \underline{242.5 \angle 90^\circ \text{ V}}$$

Chapter 12, Solution 6.

$$Z_Y = 10 + j5 = 11.18 \angle 26.56^\circ$$

The line currents are

$$I_a = \frac{V_{an}}{Z_Y} = \frac{220 \angle 0^\circ}{11.18 \angle 26.56^\circ} = \underline{19.68 \angle -26.56^\circ \text{ A}}$$

$$I_b = I_a \angle -120^\circ = \underline{19.68 \angle -146.56^\circ \text{ A}}$$

$$I_c = I_a \angle 120^\circ = \underline{19.68 \angle 93.44^\circ \text{ A}}$$

The line voltages are

$$V_{ab} = 200\sqrt{3} \angle 30^\circ = \underline{\underline{381 \angle 30^\circ \text{ V}}}$$

$$V_{bc} = \underline{\underline{381 \angle -90^\circ \text{ V}}}$$

$$V_{ca} = \underline{\underline{381 \angle -210^\circ \text{ V}}}$$

The load voltages are

$$V_{AN} = I_a Z_Y = V_{an} = \underline{\underline{220 \angle 0^\circ \text{ V}}}$$

$$V_{BN} = V_{bn} = \underline{\underline{220 \angle -120^\circ \text{ V}}}$$

$$V_{CN} = V_{cn} = \underline{\underline{220 \angle 120^\circ \text{ V}}}$$

Chapter 12, Solution 7.

This is a balanced Y-Y system.



Using the per-phase circuit shown above,

$$I_a = \frac{440 \angle 0^\circ}{6 - j8} = \underline{\underline{44 \angle 53.13^\circ \text{ A}}}$$

$$I_b = I_a \angle -120^\circ = \underline{\underline{44 \angle -66.87^\circ \text{ A}}}$$

$$I_c = I_a \angle 120^\circ = \underline{\underline{44 \angle 173.13^\circ \text{ A}}}$$

Chapter 12, Solution 8.

$$V_L = 220 \text{ V}, \quad Z_Y = 16 + j9 \Omega$$

$$I_{an} = \frac{V_p}{Z_Y} = \frac{V_L}{\sqrt{3} Z_Y} = \frac{220}{\sqrt{3} (16 + j9)} = 6.918 \angle -29.36^\circ$$

$$I_L = \underline{\underline{6.918 \text{ A}}}$$

Chapter 12, Solution 9.

$$\mathbf{I}_a = \frac{\mathbf{V}_{an}}{\mathbf{Z}_L + \mathbf{Z}_Y} = \frac{120 \angle 0^\circ}{20 + j15} = \underline{\underline{4.8 \angle -36.87^\circ \text{ A}}}$$

$$\mathbf{I}_b = \mathbf{I}_a \angle -120^\circ = \underline{\underline{4.8 \angle -156.87^\circ \text{ A}}}$$

$$\mathbf{I}_c = \mathbf{I}_a \angle 120^\circ = \underline{\underline{4.8 \angle 83.13^\circ \text{ A}}}$$

$$\text{As a balanced system, } \mathbf{I}_n = \underline{\underline{0 \text{ A}}}$$

Chapter 12, Solution 10.

Since the neutral line is present, we can solve this problem on a per-phase basis.

For phase a,

$$\mathbf{I}_a = \frac{\mathbf{V}_{an}}{\mathbf{Z}_A + 2} = \frac{220 \angle 0^\circ}{27 - j20} = 6.55 \angle 36.53^\circ$$

For phase b,

$$\mathbf{I}_b = \frac{\mathbf{V}_{bn}}{\mathbf{Z}_B + 2} = \frac{220 \angle -120^\circ}{22} = 10 \angle -120^\circ$$

For phase c,

$$\mathbf{I}_c = \frac{\mathbf{V}_{cn}}{\mathbf{Z}_C + 2} = \frac{220 \angle 120^\circ}{12 + j5} = 16.92 \angle 97.38^\circ$$

The current in the neutral line is

$$\mathbf{I}_n = -(\mathbf{I}_a + \mathbf{I}_b + \mathbf{I}_c)$$

$$\text{or } -\mathbf{I}_n = \mathbf{I}_a + \mathbf{I}_b + \mathbf{I}_c$$

$$-\mathbf{I}_n = (5.263 + j3.9) + (-5 - j8.66) + (-2.173 + j16.78)$$

$$\mathbf{I}_n = 1.91 - j2.02 = \underline{\underline{12.17 \angle -81^\circ \text{ A}}}$$

Chapter 12, Solution 11.

$$\mathbf{V}_{an} = \frac{\mathbf{V}_{bc}}{\sqrt{3} \angle -90^\circ} = \frac{\mathbf{V}_{BC}}{\sqrt{3} \angle -90^\circ} = \frac{220 \angle 10^\circ}{\sqrt{3} \angle -90^\circ}$$

$$\mathbf{V}_{an} = \underline{\underline{\mathbf{127} \angle 100^\circ \text{ V}}}$$

$$\mathbf{V}_{AB} = \mathbf{V}_{BC} \angle 120^\circ = \underline{\underline{\mathbf{220} \angle 130^\circ \text{ V}}}$$

$$\mathbf{V}_{AC} = \mathbf{V}_{BC} \angle -120^\circ = 220 \angle -110^\circ \text{ V}$$

If $\mathbf{I}_{bB} = 30 \angle 60^\circ$, then

$$\mathbf{I}_{aA} = 30 \angle 180^\circ, \quad \mathbf{I}_{cC} = 30 \angle -60^\circ$$

$$\mathbf{I}_{AB} = \frac{\mathbf{I}_{aA}}{\sqrt{3} \angle -30^\circ} = \frac{30 \angle 180^\circ}{\sqrt{3} \angle -30^\circ} = 17.32 \angle 210^\circ$$

$$\mathbf{I}_{BC} = 17.32 \angle 90^\circ, \quad \mathbf{I}_{CA} = 17.32 \angle -30^\circ$$

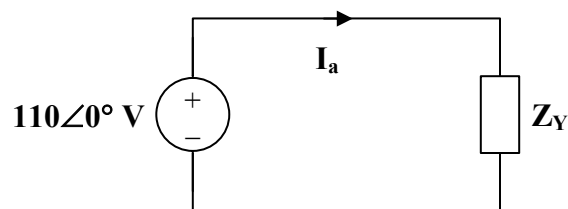
$$\mathbf{I}_{AC} = -\mathbf{I}_{CA} = \underline{\underline{\mathbf{17.32} \angle 150^\circ \text{ A}}}$$

$$\mathbf{I}_{BC} \mathbf{Z} = \mathbf{V}_{BC}$$

$$\mathbf{Z} = \frac{\mathbf{V}_{BC}}{\mathbf{I}_{BC}} = \frac{220 \angle 0^\circ}{17.32 \angle 90^\circ} = \underline{\underline{\mathbf{12.7} \angle -80^\circ \Omega}}$$

Chapter 12, Solution 12.

Convert the delta-load to a wye-load and apply per-phase analysis.



$$\mathbf{Z}_Y = \frac{\mathbf{Z}_\Delta}{3} = 20 \angle 45^\circ \Omega$$

$$\begin{aligned} \mathbf{I}_a &= \frac{110\angle 0^\circ}{20\angle 45^\circ} = \underline{\underline{5.5\angle -45^\circ \text{ A}}} \\ \mathbf{I}_b &= \mathbf{I}_a \angle -120^\circ = \underline{\underline{5.5\angle -165^\circ \text{ A}}} \\ \mathbf{I}_c &= \mathbf{I}_a \angle 120^\circ = \underline{\underline{5.5\angle 75^\circ \text{ A}}} \end{aligned}$$

Chapter 12, Solution 13.

First we calculate the wye equivalent of the balanced load.

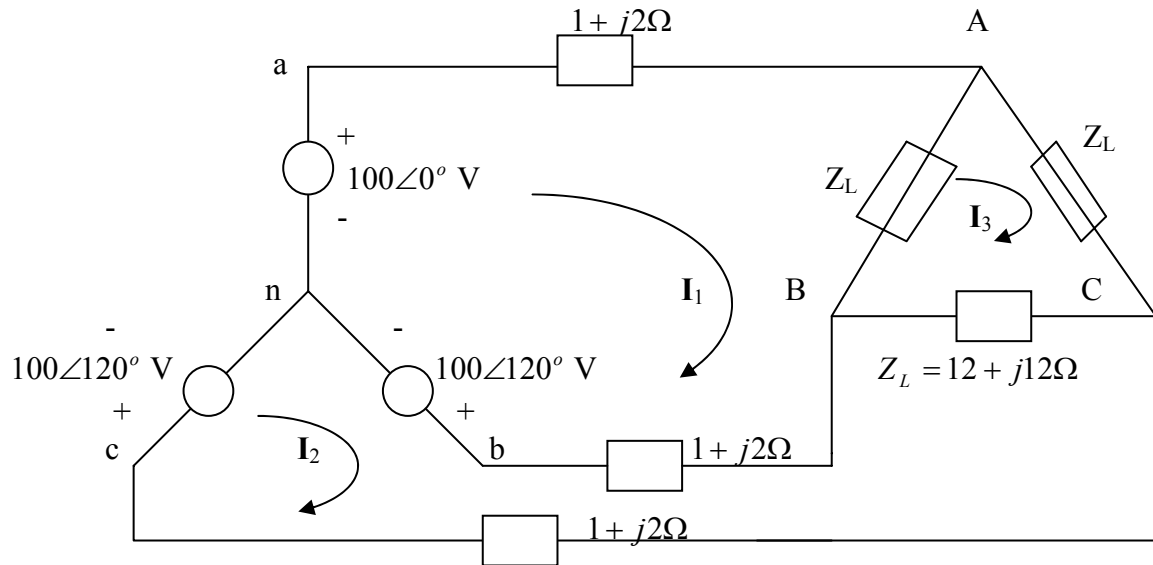
$$\mathbf{Z}_Y = (1/3)\mathbf{Z}_\Delta = 6 + j5$$

Now we only need to calculate the line currents using the wye-wye circuits.

$$\begin{aligned} \mathbf{I}_a &= \frac{110}{2 + j10 + 6 + j5} = \underline{\underline{6.471\angle -61.93^\circ \text{ A}}} \\ \mathbf{I}_b &= \frac{110\angle -120^\circ}{8 + j15} = \underline{\underline{6.471\angle 178.07^\circ \text{ A}}} \\ \mathbf{I}_c &= \frac{110\angle 120^\circ}{8 + j15} = \underline{\underline{6.471\angle 58.07^\circ \text{ A}}} \end{aligned}$$

Chapter 12, Solution 14.

We apply mesh analysis.



For mesh 1,

$$-100 + 100\angle 120^\circ + I_1(14 + j16) - (1 + j2)I_2 - (12 + j12)I_3 = 0$$

or

$$(14 + j16)I_1 - (1 + j2)I_2 - (12 + j12)I_3 = 100 + 50 - j86.6 = 150 - j86.6 \quad (1)$$

For mesh 2,

$$100\angle 120^\circ - 100\angle -120^\circ - I_1(1 + j2) - (12 + j12)I_3 + (14 + j16)I_2 = 0$$

or

$$-(1 + j2)I_1 + (14 + j16)I_2 - (12 + j12)I_3 = -50 - j86.6 + 50 - j86.6 = -j173.2 \quad (2)$$

For mesh 3,

$$-(12 + j12)I_1 - (12 + j12)I_2 + (36 + j36)I_3 = 0 \quad (3)$$

Solving (1) to (3) gives

$$I_1 = -3.161 - j19.3, \quad I_2 = -10.098 - j16.749, \quad I_3 = -4.4197 - j12.016$$

$$I_{aA} = I_1 = \underline{19.58\angle -99.3^\circ \text{ A}}$$

$$I_{bB} = I_2 - I_1 = \underline{7.392\angle 159.8^\circ \text{ A}}$$

$$I_{cC} = -I_2 = \underline{19.56\angle 58.91^\circ \text{ A}}$$

Chapter 12, Solution 15.

Convert the delta load, \mathbf{Z}_Δ , to its equivalent wye load.

$$\mathbf{Z}_{Ye} = \frac{\mathbf{Z}_\Delta}{3} = 8 - j10$$

$$\mathbf{Z}_p = \mathbf{Z}_Y \parallel \mathbf{Z}_{Ye} = \frac{(12 + j5)(8 - j10)}{20 - j5} = 8.076 \angle -14.68^\circ$$

$$\mathbf{Z}_p = 7.812 - j2.047$$

$$\mathbf{Z}_T = \mathbf{Z}_p + \mathbf{Z}_L = 8.812 - j1.047$$

$$\mathbf{Z}_T = 8.874 \angle -6.78^\circ$$

We now use the per-phase equivalent circuit.

$$\mathbf{I}_a = \frac{\mathbf{V}_p}{\mathbf{Z}_p + \mathbf{Z}_L}, \quad \text{where } \mathbf{V}_p = \frac{210}{\sqrt{3}}$$

$$\mathbf{I}_a = \frac{210}{\sqrt{3}(8.874 \angle -6.78^\circ)} = 13.66 \angle 6.78^\circ$$

$$\mathbf{I}_L = |\mathbf{I}_a| = \underline{\underline{13.66 \text{ A}}}$$

Chapter 12, Solution 16.

$$(a) \quad \mathbf{I}_{CA} = -\mathbf{I}_{AC} = 10 \angle (-30^\circ + 180^\circ) = 10 \angle 150^\circ$$

This implies that

$$\mathbf{I}_{AB} = 10 \angle 30^\circ$$

$$\mathbf{I}_{BC} = 10 \angle -90^\circ$$

$$\mathbf{I}_a = \mathbf{I}_{AB} \sqrt{3} \angle -30^\circ = \underline{\underline{17.32 \angle 0^\circ \text{ A}}}$$

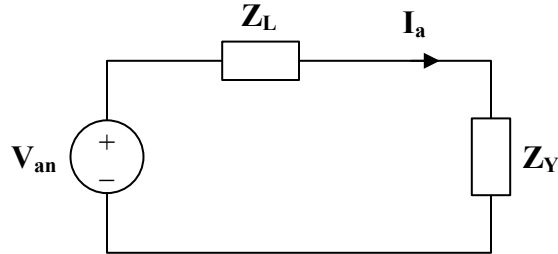
$$\mathbf{I}_b = \underline{\underline{17.32 \angle -120^\circ \text{ A}}}$$

$$\mathbf{I}_c = \underline{\underline{17.32 \angle 120^\circ \text{ A}}}$$

$$(b) \quad \mathbf{Z}_\Delta = \frac{\mathbf{V}_{AB}}{\mathbf{I}_{AB}} = \frac{110 \angle 0^\circ}{10 \angle 30^\circ} = \underline{\underline{11 \angle -30^\circ \Omega}}$$

Chapter 12, Solution 17.

Convert the Δ -connected load to a Y-connected load and use per-phase analysis.



$$\mathbf{Z}_Y = \frac{\mathbf{Z}_\Delta}{3} = 3 + j4$$

$$\mathbf{I}_a = \frac{\mathbf{V}_{an}}{\mathbf{Z}_Y + \mathbf{Z}_L} = \frac{120\angle 0^\circ}{(3 + j4) + (1 + j0.5)} = 19.931\angle -48.37^\circ$$

$$\text{But } \mathbf{I}_a = \mathbf{I}_{AB} \sqrt{3} \angle -30^\circ$$

$$\mathbf{I}_{AB} = \frac{19.931\angle -48.37^\circ}{\sqrt{3} \angle -30^\circ} = \underline{\underline{11.51\angle -18.37^\circ \text{ A}}}$$

$$\mathbf{I}_{BC} = \underline{\underline{11.51\angle -138.4^\circ \text{ A}}}$$

$$\mathbf{I}_{CA} = \underline{\underline{11.51\angle 101.6^\circ \text{ A}}}$$

$$\mathbf{V}_{AB} = \mathbf{I}_{AB} \mathbf{Z}_\Delta = (11.51\angle -18.37^\circ)(15\angle 53.13^\circ)$$

$$\mathbf{V}_{AB} = \underline{\underline{172.6\angle 34.76^\circ \text{ V}}}$$

$$\mathbf{V}_{BC} = \underline{\underline{172.6\angle -85.24^\circ \text{ V}}}$$

$$\mathbf{V}_{CA} = \underline{\underline{172.6\angle 154.8^\circ \text{ V}}}$$

Chapter 12, Solution 18.

$$\mathbf{V}_{AB} = \mathbf{V}_{an} \sqrt{3} \angle 30^\circ = (440\angle 60^\circ)(\sqrt{3} \angle 30^\circ) = 762.1\angle 90^\circ$$

$$\mathbf{Z}_\Delta = 12 + j9 = 15\angle 36.87^\circ$$

$$\mathbf{I}_{AB} = \frac{\mathbf{V}_{AB}}{\mathbf{Z}_{\Delta}} = \frac{762.1 \angle 90^{\circ}}{15 \angle 36.87^{\circ}} = \underline{\underline{50.81 \angle 53.13^{\circ} \text{ A}}}$$

$$\mathbf{I}_{BC} = \mathbf{I}_{AB} \angle -120^{\circ} = \underline{\underline{50.81 \angle -66.87^{\circ} \text{ A}}}$$

$$\mathbf{I}_{CA} = \mathbf{I}_{AB} \angle 120^{\circ} = \underline{\underline{50.81 \angle 173.13^{\circ} \text{ A}}}$$

Chapter 12, Solution 19.

$$\mathbf{Z}_{\Delta} = 30 + j10 = 31.62 \angle 18.43^{\circ}$$

The phase currents are

$$\mathbf{I}_{AB} = \frac{\mathbf{V}_{ab}}{\mathbf{Z}_{\Delta}} = \frac{173 \angle 0^{\circ}}{31.62 \angle 18.43^{\circ}} = \underline{\underline{5.47 \angle -18.43^{\circ} \text{ A}}}$$

$$\mathbf{I}_{BC} = \mathbf{I}_{AB} \angle -120^{\circ} = \underline{\underline{5.47 \angle -138.43^{\circ} \text{ A}}}$$

$$\mathbf{I}_{CA} = \mathbf{I}_{AB} \angle 120^{\circ} = \underline{\underline{5.47 \angle 101.57^{\circ} \text{ A}}}$$

The line currents are

$$\mathbf{I}_a = \mathbf{I}_{AB} - \mathbf{I}_{CA} = \mathbf{I}_{AB} \sqrt{3} \angle -30^{\circ}$$

$$\mathbf{I}_a = 5.47 \sqrt{3} \angle -48.43^{\circ} = \underline{\underline{9.474 \angle -48.43^{\circ} \text{ A}}}$$

$$\mathbf{I}_b = \mathbf{I}_a \angle -120^{\circ} = \underline{\underline{9.474 \angle -168.43^{\circ} \text{ A}}}$$

$$\mathbf{I}_c = \mathbf{I}_a \angle 120^{\circ} = \underline{\underline{9.474 \angle 71.57^{\circ} \text{ A}}}$$

Chapter 12, Solution 20.

$$\mathbf{Z}_{\Delta} = 12 + j9 = 15 \angle 36.87^{\circ}$$

The phase currents are

$$\mathbf{I}_{AB} = \frac{210 \angle 0^{\circ}}{15 \angle 36.87^{\circ}} = \underline{\underline{14 \angle -36.87^{\circ} \text{ A}}}$$

$$\mathbf{I}_{BC} = \mathbf{I}_{AB} \angle -120^{\circ} = \underline{\underline{14 \angle -156.87^{\circ} \text{ A}}}$$

$$\mathbf{I}_{CA} = \mathbf{I}_{AB} \angle 120^{\circ} = \underline{\underline{14 \angle 83.13^{\circ} \text{ A}}}$$

The line currents are

$$\mathbf{I}_a = \mathbf{I}_{AB} \sqrt{3} \angle -30^{\circ} = \underline{\underline{24.25 \angle -66.87^{\circ} \text{ A}}}$$

$$\mathbf{I}_b = \mathbf{I}_a \angle -120^{\circ} = \underline{\underline{24.25 \angle -186.87^{\circ} \text{ A}}}$$

$$\mathbf{I}_c = \mathbf{I}_a \angle 120^{\circ} = \underline{\underline{24.25 \angle 53.13^{\circ} \text{ A}}}$$

Chapter 12, Solution 21.

$$(a) \quad I_{AC} = \frac{-230 \angle 120^\circ}{10 + j8} = \frac{-230 \angle 120^\circ}{12.806 \angle 38.66^\circ} = \underline{17.96 \angle -98.66^\circ \text{ A (rms)}}$$

$$\begin{aligned} I_{bB} &= I_{BC} + I_{BA} = I_{BC} - I_{AB} = \frac{230 \angle -120^\circ}{10 + j8} - \frac{230 \angle 0^\circ}{10 + j8} \\ (b) \quad &= 17.96 \angle -158.66^\circ - 17.96 \angle -38.66^\circ \\ &= -16.729 - j6.536 - 14.024 + j11.220 = -30.75 + j4.684 \\ &= \underline{31.10 \angle 171.34^\circ \text{ A}} \end{aligned}$$

Chapter 12, Solution 22.

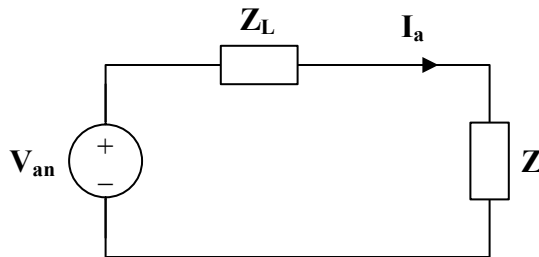
Convert the Δ -connected source to a Y-connected source.

$$V_{an} = \frac{V_p}{\sqrt{3}} \angle -30^\circ = \frac{208}{\sqrt{3}} \angle -30^\circ = 120 \angle -30^\circ$$

Convert the Δ -connected load to a Y-connected load.

$$\mathbf{Z} = \mathbf{Z}_Y \parallel \frac{\mathbf{Z}_\Delta}{3} = (4 + j6) \parallel (4 - j5) = \frac{(4 + j6)(4 - j5)}{8 + j}$$

$$\mathbf{Z} = 5.723 - j0.2153$$



$$I_a = \frac{V_{an}}{Z_L + \mathbf{Z}} = \frac{120 \angle 30^\circ}{7.723 - j0.2153} = \underline{15.53 \angle -28.4^\circ \text{ A}}$$

$$I_b = I_a \angle -120^\circ = \underline{15.53 \angle -148.4^\circ \text{ A}}$$

$$I_c = I_a \angle 120^\circ = \underline{15.53 \angle 91.6^\circ \text{ A}}$$

Chapter 12, Solution 23.

$$(a) \ I_{AB} = \frac{V_{AB}}{Z_{\Delta}} = \frac{208}{25 \angle 60^\circ}$$

$$I_a = I_{AB} \sqrt{3} \angle -30^\circ = \frac{208\sqrt{3} \angle -30^\circ}{25 \angle 60^\circ} = 14.411 \angle -90^\circ$$

$$I_L = |I_a| = \underline{14.41 \text{ A}}$$

$$(b) \ P = P_1 + P_2 = \sqrt{3} V_L I_L \cos \theta = \sqrt{3} (208) \left(\frac{208\sqrt{3}}{25} \right) \cos 60^\circ = \underline{2.596 \text{ kW}}$$

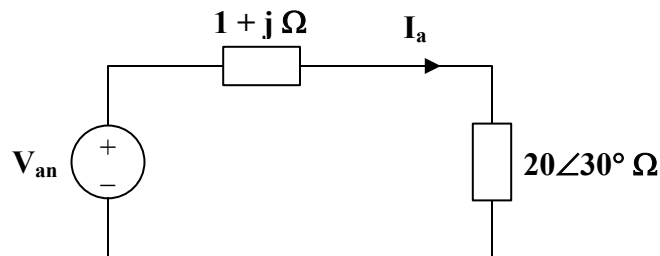
Chapter 12, Solution 24.

Convert both the source and the load to their wye equivalents.

$$Z_Y = \frac{Z_{\Delta}}{3} = 20 \angle 30^\circ = 17.32 + j10$$

$$V_{an} = \frac{V_{ab}}{\sqrt{3}} \angle -30^\circ = 240.2 \angle 0^\circ$$

We now use per-phase analysis.



$$I_a = \frac{V_{an}}{(1 + j) + (17.32 + j10)} = \frac{240.2}{21.37 \angle 31^\circ} = \underline{11.24 \angle -31^\circ \text{ A}}$$

$$I_b = I_a \angle -120^\circ = \underline{11.24 \angle -151^\circ \text{ A}}$$

$$I_c = I_a \angle 120^\circ = \underline{11.24 \angle 89^\circ \text{ A}}$$

But $\mathbf{I}_a = \mathbf{I}_{AB} \sqrt{3} \angle -30^\circ$

$$\mathbf{I}_{AB} = \frac{11.24 \angle -31^\circ}{\sqrt{3} \angle -30^\circ} = \underline{\underline{6.489 \angle -1^\circ \text{ A}}}$$

$$\mathbf{I}_{BC} = \mathbf{I}_{AB} \angle -120^\circ = \underline{\underline{6.489 \angle -121^\circ \text{ A}}}$$

$$\mathbf{I}_{CA} = \mathbf{I}_{AB} \angle 120^\circ = \underline{\underline{6.489 \angle 119^\circ \text{ A}}}$$

Chapter 12, Solution 25.

Convert the delta-connected source to an equivalent wye-connected source and consider the single-phase equivalent.

$$\mathbf{I}_a = \frac{440 \angle (10^\circ - 30^\circ)}{\sqrt{3} \mathbf{Z}_Y}$$

where $\mathbf{Z}_Y = 3 + j2 + 10 - j8 = 13 - j6 = 14.32 \angle -24.78^\circ$

$$\mathbf{I}_a = \frac{440 \angle -20^\circ}{\sqrt{3} (14.32 \angle -24.78^\circ)} = \underline{\underline{17.74 \angle 4.78^\circ \text{ A}}}$$

$$\mathbf{I}_b = \mathbf{I}_a \angle -120^\circ = \underline{\underline{17.74 \angle -115.22^\circ \text{ A}}}$$

$$\mathbf{I}_c = \mathbf{I}_a \angle 120^\circ = \underline{\underline{17.74 \angle 124.78^\circ \text{ A}}}$$

Chapter 12, Solution 26.

Transform the source to its wye equivalent.

$$\mathbf{V}_{an} = \frac{\mathbf{V}_p}{\sqrt{3}} \angle -30^\circ = 72.17 \angle -30^\circ$$

Now, use the per-phase equivalent circuit.

$$\mathbf{I}_{aA} = \frac{\mathbf{V}_{an}}{\mathbf{Z}}, \quad \mathbf{Z} = 24 - j15 = 28.3 \angle -32^\circ$$

$$\mathbf{I}_{aA} = \frac{72.17 \angle -30^\circ}{28.3 \angle -32^\circ} = \underline{\underline{2.55 \angle 2^\circ \text{ A}}}$$

$$\mathbf{I}_{bB} = \mathbf{I}_{aA} \angle -120^\circ = \underline{\underline{2.55 \angle -118^\circ \text{ A}}}$$

$$\mathbf{I}_{cC} = \mathbf{I}_{aA} \angle 120^\circ = \underline{\underline{2.55 \angle 122^\circ \text{ A}}}$$

Chapter 12, Solution 27.

$$\mathbf{I}_a = \frac{\mathbf{V}_{ab} \angle -30^\circ}{\sqrt{3} \mathbf{Z}_Y} = \frac{220 \angle -10^\circ}{\sqrt{3} (20 + j15)}$$

$$\mathbf{I}_a = \underline{\underline{5.081 \angle -46.87^\circ \text{ A}}}$$

$$\mathbf{I}_b = \mathbf{I}_a \angle -120^\circ = \underline{\underline{5.081 \angle -166.87^\circ \text{ A}}}$$

$$\mathbf{I}_c = \mathbf{I}_a \angle 120^\circ = \underline{\underline{5.081 \angle 73.13^\circ \text{ A}}}$$

Chapter 12, Solution 28.

$$\text{Let } \mathbf{V}_{ab} = 400 \angle 0^\circ$$

$$\mathbf{I}_a = \frac{\mathbf{V}_{an} \angle -30^\circ}{\sqrt{3} \mathbf{Z}_Y} = \frac{400 \angle -30^\circ}{\sqrt{3} (30 \angle -60^\circ)} = 7.7 \angle 30^\circ$$

$$I_L = |\mathbf{I}_a| = \underline{\underline{7.7 \text{ A}}}$$

$$\mathbf{V}_{AN} = \mathbf{I}_a \mathbf{Z}_Y = \frac{\mathbf{V}_{an}}{\sqrt{3}} \angle -30^\circ = 230.94 \angle -30^\circ$$

$$V_p = |\mathbf{V}_{AN}| = \underline{\underline{230.9 \text{ V}}}$$

Chapter 12, Solution 29.

$$P = 3V_p I_p \cos\theta, \quad V_p = \frac{V_L}{\sqrt{3}}, \quad I_L = I_p$$

$$P = \sqrt{3} V_L I_L \cos\theta$$

$$I_L = \frac{P}{\sqrt{3} V_L \cos\theta} = \frac{5000}{240\sqrt{3}(0.6)} = 20.05 = I_p$$

$$|Z_Y| = \frac{V_p}{I_p} = \frac{V_L}{\sqrt{3} I_L} = \frac{240}{\sqrt{3}(20.05)} = 6.911$$

$$\cos\theta = 0.6 \longrightarrow \theta = 53.13^\circ$$

$$Z_Y = 6.911 \angle -53.13^\circ \text{ (leading)}$$

$$Z_Y = \underline{\underline{4.15 - j5.53 \, \Omega}}$$

$$S = \frac{P}{\text{pf}} = \frac{5000}{0.6} = 8333$$

$$Q = S \sin\theta = 6667$$

$$S = \underline{\underline{5000 - j6667 \text{ VA}}}$$

Chapter 12, Solution 30.

Since this a balanced system, we can replace it by a per-phase equivalent, as shown below.



$$\bar{S} = 3\bar{S}_p = \frac{3V_p^2}{Z_p^*}, \quad V_p = \frac{V_L}{\sqrt{3}}$$

$$\bar{S} = \frac{V_L^2}{Z_p^*} = \frac{(208)^2}{30 \angle -45^\circ} = 1.4421 \angle 45^\circ \text{ kVA}$$

$$P = S \cos \theta = \underline{1.02 \text{ kW}}$$

Chapter 12, Solution 31.

$$(a) \quad P_p = 6,000, \quad \cos \theta = 0.8, \quad S_p = \frac{P_p}{\cos \theta} = 6 / 0.8 = 7.5 \text{ kVA}$$

$$Q_p = S_p \sin \theta = 4.5 \text{ kVAR}$$

$$\bar{S} = 3\bar{S}_p = 3(6 + j4.5) = 18 + j13.5 \text{ kVA}$$

For delta-connected load, $V_p = V_L = 240$ (rms). But

$$\bar{S} = \frac{3V_p^2}{Z_p^*} \longrightarrow Z_p^* = \frac{3V_p^2}{S} = \frac{3(240)^2}{(18 + j13.5) \times 10^3}, \quad \underline{Z_p = 6.144 + j4.608 \Omega}$$

$$(b) \quad P_p = \sqrt{3} V_L I_L \cos \theta \longrightarrow I_L = \frac{6000}{\sqrt{3} \times 240 \times 0.8} = \underline{18.04 \text{ A}}$$

(c) We find C to bring the power factor to unity

$$Q_c = Q_p = 4.5 \text{ kVA} \longrightarrow C = \frac{Q_c}{\omega V_{rms}^2} = \frac{4500}{2\pi \times 60 \times 240^2} = \underline{207.2 \mu\text{F}}$$

Chapter 12, Solution 32.

$$S = \sqrt{3} V_L I_L \angle \theta$$

$$S = |S| = \sqrt{3} V_L I_L = 50 \times 10^3$$

$$I_L = \frac{5000}{\sqrt{3}(440)} = \underline{65.61 \text{ A}}$$

For a Y-connected load,

$$I_p = I_L = 65.61, \quad V_p = \frac{V_L}{\sqrt{3}} = \frac{440}{\sqrt{3}} = 254.03$$

$$|Z| = \frac{V_p}{I_p} = \frac{254.03}{65.61} = 3.872$$

$$Z = |Z| \angle \theta, \quad \theta = \cos^{-1}(0.6) = 53.13^\circ$$

$$Z = (3.872)(\cos \theta + j \sin \theta)$$

$$Z = (3.872)(0.6 + j0.8)$$

$$Z = \underline{\underline{2.323 + j3.098 \, \Omega}}$$

Chapter 12, Solution 33.

$$S = \sqrt{3} V_L I_L \angle \theta$$

$$S = |S| = \sqrt{3} V_L I_L$$

For a Y-connected load,

$$I_L = I_p, \quad V_L = \sqrt{3} V_p$$

$$S = 3 V_p I_p$$

$$I_L = I_p = \frac{S}{3 V_p} = \frac{4800}{(3)(208)} = \underline{\underline{7.69 \, A}}$$

$$V_L = \sqrt{3} V_p = \sqrt{3} \times 208 = \underline{\underline{360.3 \, V}}$$

Chapter 12, Solution 34.

$$V_p = \frac{V_L}{\sqrt{3}} = \frac{220}{\sqrt{3}}$$

$$I_a = \frac{V_p}{Z_Y} = \frac{200}{\sqrt{3}(10 - j16)} = 6.73 \angle 58^\circ$$

$$I_L = I_p = \underline{\underline{6.73 \text{ A}}}$$

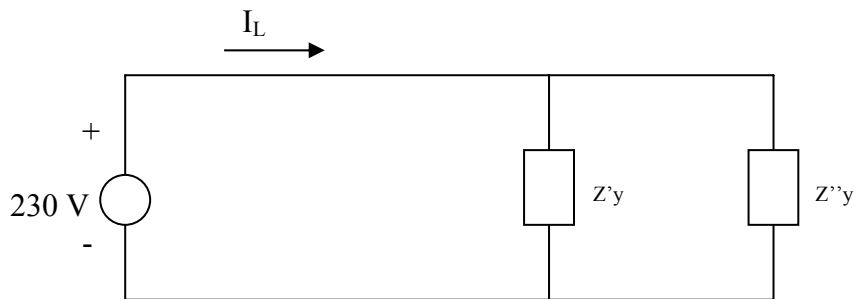
$$S = \sqrt{3} V_L I_L \angle \theta = \sqrt{3} \times 220 \times 6.73 \angle -58^\circ$$

$$S = \underline{\underline{1359 - j2174.8 \text{ VA}}}$$

Chapter 12, Solution 35.

- (a) This is a balanced three-phase system and we can use per phase equivalent circuit. The delta-connected load is converted to its wye-connected equivalent

$$Z''_y = \frac{1}{3} Z_\Delta = (60 + j30)/3 = 20 + j10$$



$$Z_y = Z'_y \parallel Z''_y = (40 + j10) \parallel (20 + j10) = 13.5 + j5.5$$

$$I_L = \frac{230}{13.5 + j5.5} = \underline{\underline{14.61 - j5.953 \text{ A}}}$$

(b) $\bar{S} = V_s I_L^* = \underline{\underline{3.361 + j1.368 \text{ kVA}}}$

(c) $\text{pf} = P/S = \underline{\underline{0.9261}}$

Chapter 12, Solution 36.

$$(a) \quad S = 1 [0.75 + \sin(\cos^{-1}0.75)] = \underline{0.75 + j0.6614 \text{ MVA}}$$

$$(b) \quad \bar{S} = 3V_p I_p^* \quad \longrightarrow \quad I_p^* = \frac{S}{3V_p} = \frac{(0.75 + j0.6614) \times 10^6}{3 \times 4200} = 59.52 + j52.49$$

$$P_L = |I_p|^2 R_L = (79.36)^2 (4) = \underline{25.19 \text{ kW}}$$

$$(c) \quad V_s = V_L + I_p (4 + j) = 4.4381 - j0.21 \text{ kV} = \underline{4.443 \angle -2.709^\circ \text{ kV}}$$

Chapter 12, Solution 37.

$$S = \frac{P}{\text{pf}} = \frac{12}{0.6} = 20$$

$$S = S \angle \theta = 20 \angle \theta = 12 - j16 \text{ kVA}$$

$$\text{But} \quad S = \sqrt{3} V_L I_L \angle \theta$$

$$I_L = \frac{20 \times 10^3}{\sqrt{3} \times 208} = \underline{\underline{55.51 \text{ A}}}$$

$$S = 3 |I_p|^2 Z_p$$

For a Y-connected load, $I_L = I_p$.

$$Z_p = \frac{S}{3 |I_L|^2} = \frac{(12 - j16) \times 10^3}{(3)(55.51)^2}$$

$$Z_p = \underline{\underline{1.298 - j1.731 \Omega}}$$

Chapter 12, Solution 38.

As a balanced three-phase system, we can use the per-phase equivalent shown below.

$$\mathbf{I}_a = \frac{110\angle 0^\circ}{(1+j2) + (9+j12)} = \frac{110\angle 0^\circ}{10+j14}$$

$$\mathbf{S}_p = \frac{1}{2} |\mathbf{I}_a|^2 \mathbf{Z}_Y = \frac{1}{2} \cdot \frac{(110)^2}{(10^2 + 14^2)} \cdot (9+j12)$$

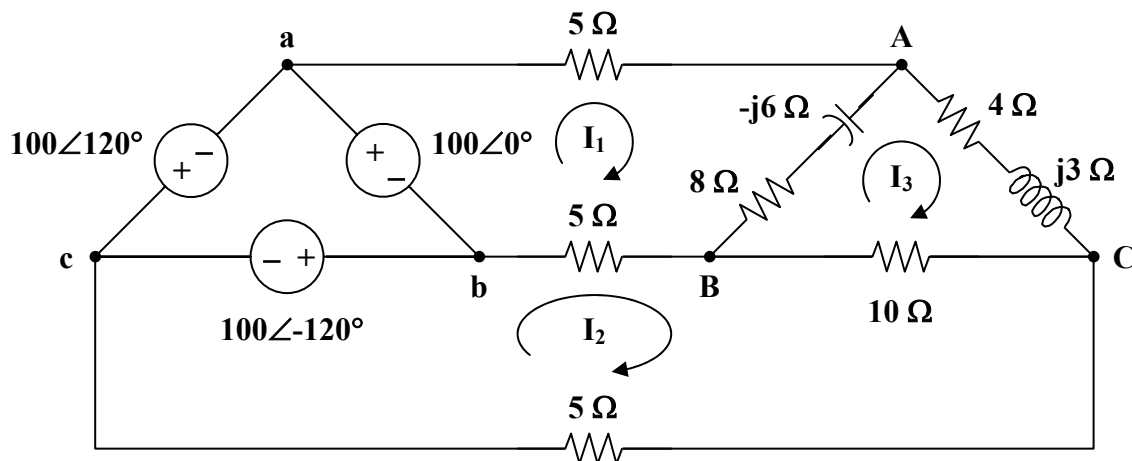
The complex power is

$$\mathbf{S} = 3\mathbf{S}_p = \frac{3}{2} \cdot \frac{(110)^2}{296} \cdot (9+j12)$$

$$\mathbf{S} = \underline{\underline{551.86 + j735.81 \text{ VA}}}$$

Chapter 12, Solution 39.

Consider the system shown below.



For mesh 1,

$$100 = (18 - j6)\mathbf{I}_1 - 5\mathbf{I}_2 - (8 - j6)\mathbf{I}_3 \quad (1)$$

For mesh 2,

$$\begin{aligned} 100\angle -120^\circ &= 20\mathbf{I}_2 - 5\mathbf{I}_1 - 10\mathbf{I}_3 \\ 20\angle -120^\circ &= -\mathbf{I}_1 + 4\mathbf{I}_2 - 2\mathbf{I}_3 \end{aligned} \quad (2)$$

For mesh 3,

$$0 = -(8 - j6)\mathbf{I}_1 - 10\mathbf{I}_2 + (22 - j3)\mathbf{I}_3 \quad (3)$$

To eliminate \mathbf{I}_2 , start by multiplying (1) by 2,

$$200 = (36 - j12)\mathbf{I}_1 - 10\mathbf{I}_2 - (16 - j12)\mathbf{I}_3 \quad (4)$$

Subtracting (3) from (4),

$$200 = (44 - j18)\mathbf{I}_1 - (38 - j15)\mathbf{I}_3 \quad (5)$$

Multiplying (2) by $5/4$,

$$25\angle -120^\circ = -1.25\mathbf{I}_1 + 5\mathbf{I}_2 - 2.5\mathbf{I}_3 \quad (6)$$

Adding (1) and (6),

$$87.5 - j21.65 = (16.75 - j6)\mathbf{I}_1 - (10.5 - j6)\mathbf{I}_3 \quad (7)$$

In matrix form, (5) and (7) become

$$\begin{bmatrix} 200 \\ 87.5 - j21.65 \end{bmatrix} = \begin{bmatrix} 44 - j18 & -38 + j15 \\ 16.75 - j6 & -10.5 + j6 \end{bmatrix} \begin{bmatrix} \mathbf{I}_1 \\ \mathbf{I}_3 \end{bmatrix}$$

$$\Delta = 192.5 - j26.25, \quad \Delta_1 = 900.25 - j935.2, \quad \Delta_3 = 110.3 - j1327.6$$

$$\mathbf{I}_1 = \frac{\Delta_1}{\Delta} = \frac{1298.1\angle -46.09^\circ}{194.28\angle -7.76^\circ} = 6.682\angle -38.33^\circ = 5.242 - j4.144$$

$$\mathbf{I}_3 = \frac{\Delta_3}{\Delta} = \frac{1332.2\angle -85.25^\circ}{194.28\angle -7.76^\circ} = 6.857\angle -77.49^\circ = 1.485 - j6.694$$

We obtain \mathbf{I}_2 from (6),

$$\mathbf{I}_2 = 5\angle -120^\circ + \frac{1}{4}\mathbf{I}_1 + \frac{1}{2}\mathbf{I}_3$$

$$\mathbf{I}_2 = (-2.5 - j4.33) + (1.3104 - j1.0359) + (0.7425 - j3.347)$$

$$\mathbf{I}_2 = -0.4471 - j8.713$$

The average power absorbed by the $8\text{-}\Omega$ resistor is

$$P_1 = |\mathbf{I}_1 - \mathbf{I}_3|^2 (8) = |3.756 + j2.551|^2 (8) = 164.89 \text{ W}$$

The average power absorbed by the $4\text{-}\Omega$ resistor is

$$P_2 = |\mathbf{I}_3|^2 (4) = (6.8571)^2 (4) = 188.1 \text{ W}$$

The average power absorbed by the 10-Ω resistor is

$$P_3 = |\mathbf{I}_2 - \mathbf{I}_3|^2 (10) = |-1.9321 - j2.019|^2 (10) = 78.12 \text{ W}$$

Thus, the total real power absorbed by the load is

$$P = P_1 + P_2 + P_3 = \underline{\underline{431.1 \text{ W}}}$$

Chapter 12, Solution 40.

Transform the delta-connected load to its wye equivalent.

$$\mathbf{Z}_Y = \frac{\mathbf{Z}_\Delta}{3} = 7 + j8$$

Using the per-phase equivalent circuit above,

$$\mathbf{I}_a = \frac{100 \angle 0^\circ}{(1 + j0.5) + (7 + j8)} = 8.567 \angle -46.75^\circ$$

For a wye-connected load,

$$I_p = I_a = |\mathbf{I}_a| = 8.567$$

$$\mathbf{S} = 3 |\mathbf{I}_p|^2 \mathbf{Z}_p = (3)(8.567)^2 (7 + j8)$$

$$P = \text{Re}(\mathbf{S}) = (3)(8.567)^2 (7) = \underline{\underline{1.541 \text{ kW}}}$$

Chapter 12, Solution 41.

$$S = \frac{P}{\text{pf}} = \frac{5 \text{ kW}}{0.8} = 6.25 \text{ kVA}$$

$$\text{But } S = \sqrt{3} V_L I_L$$

$$I_L = \frac{S}{\sqrt{3} V_L} = \frac{6.25 \times 10^3}{\sqrt{3} \times 400} = \underline{\underline{9.021 \text{ A}}}$$

Chapter 12, Solution 42.

The load determines the power factor.

$$\tan \theta = \frac{40}{30} = 1.333 \longrightarrow \theta = 53.13^\circ$$

$$\text{pf} = \cos \theta = 0.6 \quad (\text{leading})$$

$$\mathbf{S} = 7.2 - j\left(\frac{7.2}{0.6}\right)(0.8) = 7.2 - j9.6 \text{ kVA}$$

$$\text{But} \quad \mathbf{S} = 3 \left| \mathbf{I}_p \right|^2 \mathbf{Z}_p$$

$$\left| \mathbf{I}_p \right|^2 = \frac{\mathbf{S}}{3 \mathbf{Z}_p} = \frac{(7.2 - j9.6) \times 10^3}{(3)(30 - j40)} = 80$$

$$\mathbf{I}_p = 8.944 \text{ A}$$

$$\mathbf{I}_L = \mathbf{I}_p = \underline{\underline{8.944 \text{ A}}}$$

$$\mathbf{V}_L = \frac{\mathbf{S}}{\sqrt{3} \mathbf{I}_L} = \frac{12 \times 10^3}{\sqrt{3} (8.944)} = \underline{\underline{774.6 \text{ V}}}$$

Chapter 12, Solution 43.

$$\mathbf{S} = 3 \left| \mathbf{I}_p \right|^2 \mathbf{Z}_p, \quad \mathbf{I}_p = \mathbf{I}_L \text{ for Y-connected loads}$$

$$\mathbf{S} = (3)(13.66)^2 (7.812 - j2.047)$$

$$\mathbf{S} = \underline{\underline{4.373 - j1.145 \text{ kVA}}}$$

Chapter 12, Solution 44.

For a Δ -connected load,

$$V_p = V_L, \quad I_L = \sqrt{3} I_p$$

$$S = \sqrt{3} V_L I_L$$

$$I_L = \frac{S}{\sqrt{3} V_L} = \frac{\sqrt{(12^2 + 5^2)} \times 10^3}{\sqrt{3} (240)} = 31.273$$

At the source,

$$\mathbf{V}'_L = \mathbf{V}_L + \mathbf{I}_L \mathbf{Z}_L$$

$$\mathbf{V}'_L = 240 \angle 0^\circ + (31.273)(1 + j3)$$

$$\mathbf{V}'_L = 271.273 + j93.819$$

$$|\mathbf{V}'_L| = \underline{\underline{287.04 \text{ V}}}$$

Also, at the source,

$$\mathbf{S}' = \sqrt{3} \mathbf{V}'_L \mathbf{I}_L^*$$

$$\mathbf{S}' = \sqrt{3} (271.273 + j93.819)(31.273)$$

$$\theta = \tan^{-1} \left(\frac{93.819}{271.273} \right) = 19.078$$

$$\text{pf} = \cos \theta = \underline{\underline{0.9451}}$$

Chapter 12, Solution 45.

$$S = \sqrt{3} V_L I_L \angle \theta$$

$$I_L = \frac{|\mathbf{S}| \angle -\theta}{\sqrt{3} V_L}, \quad |\mathbf{S}| = \frac{P}{\text{pf}} = \frac{450 \times 10^3}{0.708} = 635.6 \text{ kVA}$$

$$\mathbf{I}_L = \frac{(635.6) \angle -\theta}{\sqrt{3} \times 440} = 834 \angle -45^\circ \text{ A}$$

At the source,

$$\mathbf{V}_L = 440 \angle 0^\circ + \mathbf{I}_L (0.5 + j2)$$

$$\mathbf{V}_L = 440 + (834 \angle -45^\circ)(2.062 \angle 76^\circ)$$

$$\mathbf{V}_L = 440 + 1719.7 \angle 31^\circ$$

$$\mathbf{V}_L = 1914.1 + j885.7$$

$$\mathbf{V}_L = \underline{\underline{2.109 \angle 24.83^\circ \text{ V}}}$$

Chapter 12, Solution 46.

For the wye-connected load,

$$\mathbf{I}_L = \mathbf{I}_p, \quad \mathbf{V}_L = \sqrt{3} \mathbf{V}_p \quad \mathbf{I}_p = \mathbf{V}_p / \mathbf{Z}$$

$$\mathbf{S} = 3 \mathbf{V}_p \mathbf{I}_p^* = \frac{3 |\mathbf{V}_p|^2}{\mathbf{Z}^*} = \frac{3 |\mathbf{V}_L / \sqrt{3}|^2}{\mathbf{Z}^*}$$

$$\mathbf{S} = \frac{|\mathbf{V}_L|^2}{\mathbf{Z}^*} = \frac{(110)^2}{100} = 121 \text{ W}$$

For the delta-connected load,

$$\mathbf{V}_p = \mathbf{V}_L, \quad \mathbf{I}_L = \sqrt{3} \mathbf{I}_p, \quad \mathbf{I}_p = \mathbf{V}_p / \mathbf{Z}$$

$$\mathbf{S} = 3 \mathbf{V}_p \mathbf{I}_p^* = \frac{3 |\mathbf{V}_p|^2}{\mathbf{Z}^*} = \frac{3 |\mathbf{V}_L|^2}{\mathbf{Z}^*}$$

$$\mathbf{S} = \frac{(3)(110)^2}{100} = 363 \text{ W}$$

This shows that the **delta-connected load** will deliver three times more average power than the wye-connected load. This is also evident from $\mathbf{Z}_Y = \frac{\mathbf{Z}_\Delta}{3}$.

Chapter 12, Solution 47.

$$\text{pf} = 0.8 \text{ (lagging)} \longrightarrow \theta = \cos^{-1}(0.8) = 36.87^\circ$$

$$\mathbf{S}_1 = 250 \angle 36.87^\circ = 200 + j150 \text{ kVA}$$

$$\text{pf} = 0.95 \text{ (leading)} \longrightarrow \theta = \cos^{-1}(0.95) = -18.19^\circ$$

$$\mathbf{S}_2 = 300 \angle -18.19^\circ = 285 - j93.65 \text{ kVA}$$

$$\text{pf} = 1.0 \longrightarrow \theta = \cos^{-1}(1) = 0^\circ$$

$$S_3 = 450 \text{ kVA}$$

$$S_T = S_1 + S_2 + S_3 = 935 + j56.35 = 936.7 \angle 3.45^\circ \text{ kVA}$$

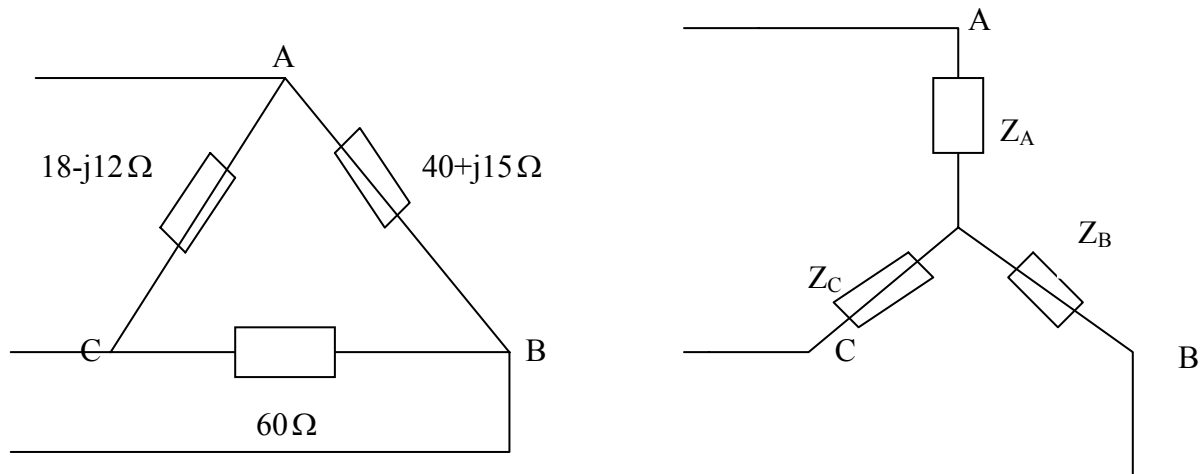
$$|S_T| = \sqrt{3} V_L I_L$$

$$I_L = \frac{936.7 \times 10^3}{\sqrt{3} (13.8 \times 10^3)} = \underline{\underline{39.19 \text{ A rms}}}$$

$$\text{pf} = \cos \theta = \cos(3.45^\circ) = \underline{\underline{0.9982 \text{ (lagging)}}}$$

Chapter 12, Solution 48.

(a) We first convert the delta load to its equivalent wye load, as shown below.

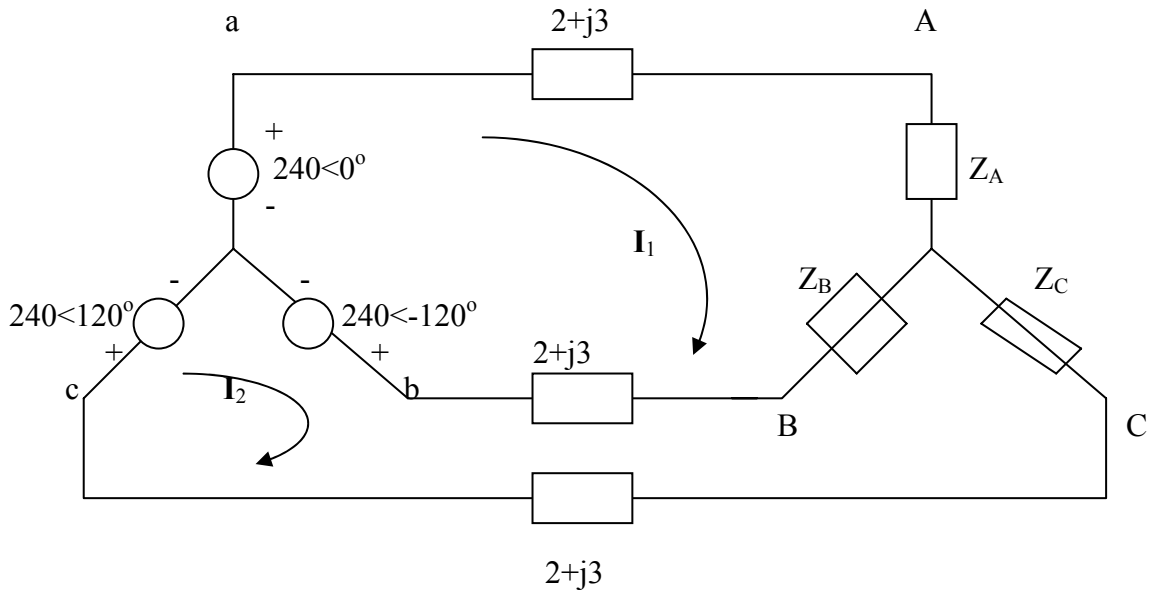


$$Z_A = \frac{(40 + j15)(18 - j12)}{118 + j3} = 7.577 - j1.923$$

$$Z_B = \frac{60(40 + j15)}{118 + j3} = 20.52 - j7.105$$

$$Z_C = \frac{60(18 - j12)}{118 + j3} = 8.992 - j6.3303$$

The system becomes that shown below.



We apply KVL to the loops. For mesh 1,
 $-240 + 240\angle -120^\circ + I_1(2Z_l + Z_A + Z_B) - I_2(Z_B + Z_l) = 0$
 or

$$(32.097 + j11.13)I_1 - (22.52 + j10.105)I_2 = 360 + j207.85 \quad (1)$$

For mesh 2,
 $240\angle 120^\circ - 240\angle -120^\circ - I_1(Z_B + Z_l) + I_2(2Z_l + Z_B + Z_C) = 0$
 or

$$-(22.52 + j10.105)I_1 + (33.51 + j6.775)I_2 = -j415.69 \quad (2)$$

Solving (1) and (2) gives

$$I_1 = 23.75 - j5.328, \quad I_2 = 15.165 - j11.89$$

$$I_{aA} = I_1 = \underline{24.34\angle -12.64^\circ \text{ A}}, \quad I_{bB} = I_2 - I_1 = \underline{10.81\angle -142.6^\circ \text{ A}}$$

$$I_{cC} = -I_2 = \underline{19.27\angle 141.9^\circ \text{ A}}$$

(b) $\bar{S}_a = (240\angle 0^\circ)(24.34\angle 12.64^\circ) = 5841.6\angle 12.64^\circ$
 $\bar{S}_b = (240\angle -120^\circ)(10.81\angle 142.6^\circ) = 2594.4\angle 22.6^\circ$
 $\bar{S}_c = (240\angle 120^\circ)(19.27\angle -141.9^\circ) = 4624.8\angle -21.9^\circ$
 $\bar{S} = \bar{S}_a + \bar{S}_b + \bar{S}_c = 12.386 + j0.55 \text{ kVA} = \underline{12.4\angle 2.54^\circ \text{ kVA}}$

Chapter 12, Solution 49.

(a) For the delta-connected load, $Z_p = 20 + j10\Omega$, $V_p = V_L = 220$ (rms),

$$S = \frac{3V_p^2}{Z_p^*} = \frac{3 \times 220^2}{(20 - j10)} = 5808 + j2904 = \underline{6.943 \angle 26.56^\circ \text{ kVA}}$$

(b) For the wye-connected load, $Z_p = 20 + j10\Omega$, $V_p = V_L / \sqrt{3}$,

$$S = \frac{3V_p^2}{Z_p^*} = \frac{3 \times 220^2}{3(20 - j10)} = \underline{2.164 \angle 26.56^\circ \text{ kVA}}$$

Chapter 12, Solution 50.

$$\bar{S} = \bar{S}_1 + \bar{S}_2 = 8(0.6 + j0.8) = 4.8 + j6.4 \text{ kVA}, \quad \bar{S}_1 = 3 \text{ kVA}$$

Hence,

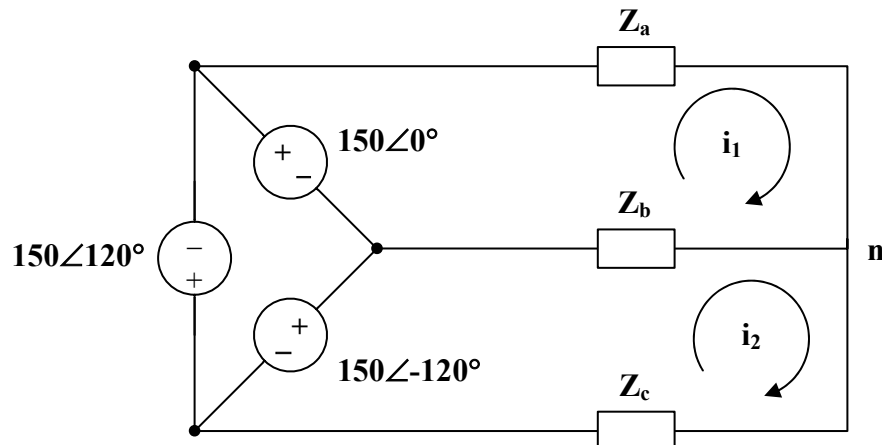
$$\bar{S}_2 = \bar{S} - \bar{S}_1 = 1.8 + j6.4 \text{ kVA}$$

$$\text{But } \bar{S}_2 = \frac{3V_p^2}{Z_p^*}, \quad V_p = \frac{V_L}{\sqrt{3}} \quad \longrightarrow \quad \bar{S}_2 = \frac{V_L^2}{Z_p^*}$$

$$Z_p^* = \frac{V_L^*}{\bar{S}_2} = \frac{240^2}{(1.8 + j6.4) \times 10^3} \quad \longrightarrow \quad \underline{Z_p = 2.346 + j8.34\Omega}$$

Chapter 12, Solution 51.

Apply mesh analysis to the circuit as shown below.



For mesh 1,

$$\begin{aligned} -150 + (\mathbf{Z}_a + \mathbf{Z}_b)\mathbf{I}_1 - \mathbf{Z}_b\mathbf{I}_2 &= 0 \\ 150 &= (18 + j)\mathbf{I}_1 - (12 + j9)\mathbf{I}_2 \end{aligned} \quad (1)$$

For mesh 2,

$$\begin{aligned} -150 \angle -120^\circ + (\mathbf{Z}_b + \mathbf{Z}_c)\mathbf{I}_2 - \mathbf{Z}_b\mathbf{I}_1 &= 0 \\ 150 \angle -120^\circ &= (27 + j9)\mathbf{I}_2 - (12 + j9)\mathbf{I}_1 \end{aligned} \quad (2)$$

From (1) and (2),

$$\begin{bmatrix} 150 \\ 150 \angle -120^\circ \end{bmatrix} = \begin{bmatrix} 18 + j & -12 - j9 \\ -12 - j9 & 27 + j9 \end{bmatrix} \begin{bmatrix} \mathbf{I}_1 \\ \mathbf{I}_2 \end{bmatrix}$$

$$\Delta = 414 - j27, \quad \Delta_1 = 3780.9 + j3583.8, \quad \Delta_2 = 579.9 - j1063.2$$

$$\mathbf{I}_1 = \frac{\Delta_1}{\Delta} = \frac{5209.5 \angle 43.47^\circ}{414.88 \angle -3.73^\circ} = 12.56 \angle 47.2^\circ$$

$$\mathbf{I}_2 = \frac{\Delta_2}{\Delta} = \frac{1211.1 \angle -61.39^\circ}{414.88 \angle -3.73^\circ} = 2.919 \angle -57.66^\circ$$

$$\mathbf{I}_a = \mathbf{I}_1 = \underline{\underline{12.56 \angle 47.2^\circ \text{ A}}}$$

$$\mathbf{I}_b = \mathbf{I}_2 - \mathbf{I}_1 = \frac{\Delta_2 - \Delta_1}{\Delta} = \frac{-3201 - j4647}{\Delta}$$

$$\mathbf{I}_b = \frac{5642.3 \angle 235.44^\circ}{414.88 \angle -3.73^\circ} = \underline{\underline{13.6 \angle 239.17^\circ \text{ A}}}$$

$$\mathbf{I}_c = -\mathbf{I}_2 = \underline{\underline{2.919 \angle 122.34^\circ \text{ A}}}$$

Chapter 12, Solution 52.

Since the neutral line is present, we can solve this problem on a per-phase basis.

$$\mathbf{I}_a = \frac{\mathbf{V}_{an}}{\mathbf{Z}_{AN}} = \frac{120 \angle 120^\circ}{20 \angle 60^\circ} = 6 \angle 60^\circ$$

$$\mathbf{I}_b = \frac{\mathbf{V}_{bn}}{\mathbf{Z}_{BN}} = \frac{120 \angle 0^\circ}{30 \angle 0^\circ} = 4 \angle 0^\circ$$

$$\mathbf{I}_c = \frac{\mathbf{V}_{cn}}{\mathbf{Z}_{CN}} = \frac{120\angle -120^\circ}{40\angle 30^\circ} = 3\angle -150^\circ$$

Thus,

$$-\mathbf{I}_n = \mathbf{I}_a + \mathbf{I}_b + \mathbf{I}_c$$

$$-\mathbf{I}_n = 6\angle 60^\circ + 4\angle 0^\circ + 3\angle -150^\circ$$

$$-\mathbf{I}_n = (3 + j5.196) + (4) + (-2.598 - j1.5)$$

$$-\mathbf{I}_n = 4.405 + j3.696 = 5.75\angle 40^\circ$$

$$\mathbf{I}_n = \underline{\underline{5.75\angle 220^\circ \text{ A}}}$$

Chapter 12, Solution 53.

$$V_p = \frac{250}{\sqrt{3}}$$

Since we have the neutral line, we can use per-phase equivalent circuit for each phase.

$$\mathbf{I}_a = \frac{250\angle 0^\circ}{\sqrt{3}} \cdot \frac{1}{40\angle 60^\circ} = \underline{\underline{3.608\angle -60^\circ \text{ A}}}$$

$$\mathbf{I}_b = \frac{250\angle -120^\circ}{\sqrt{3}} \cdot \frac{1}{60\angle -45^\circ} = \underline{\underline{2.406\angle -75^\circ \text{ A}}}$$

$$\mathbf{I}_c = \frac{250\angle 120^\circ}{\sqrt{3}} \cdot \frac{1}{20\angle 0^\circ} = \underline{\underline{7.217\angle 120^\circ \text{ A}}}$$

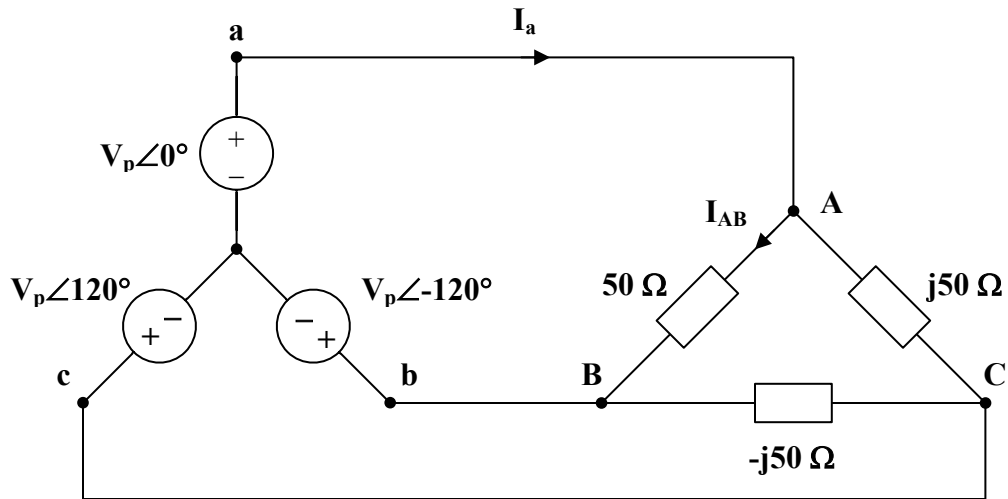
$$-\mathbf{I}_n = \mathbf{I}_a + \mathbf{I}_b + \mathbf{I}_c$$

$$-\mathbf{I}_n = (1.804 - j3.125) + (0.6227 - j2.324) + (-3.609 + j6.25)$$

$$\mathbf{I}_n = 1.1823 - j0.801 = \underline{\underline{1.428\angle -34.12^\circ \text{ A}}}$$

Chapter 12, Solution 54.

Consider the circuit shown below.



$$V_{AB} = V_{ab} = 100 \times \sqrt{3} \angle 30^\circ$$

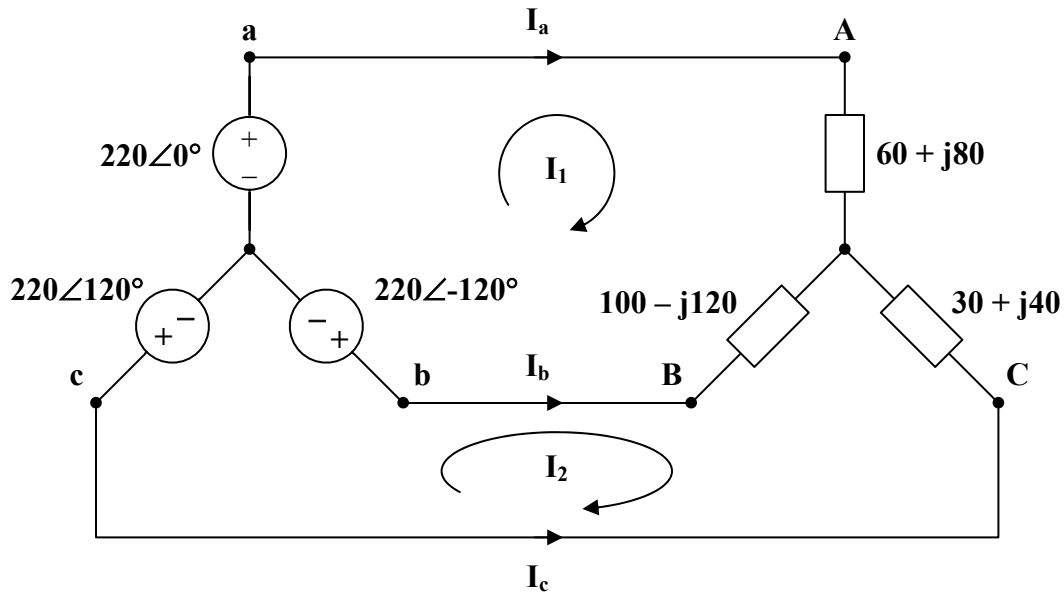
$$I_{AB} = \frac{V_{AB}}{Z_{AB}} = \frac{100\sqrt{3} \angle 30^\circ}{50} = \underline{\underline{3.464 \angle 30^\circ \text{ A}}}$$

$$I_{BC} = \frac{V_{BC}}{Z_{BC}} = \frac{100\sqrt{3} \angle -90^\circ}{50 \angle -90^\circ} = \underline{\underline{3.464 \angle 0^\circ \text{ A}}}$$

$$I_{CA} = \frac{V_{CA}}{Z_{CA}} = \frac{100\sqrt{3} \angle 150^\circ}{50 \angle 90^\circ} = \underline{\underline{3.464 \angle 60^\circ \text{ A}}}$$

Chapter 12, Solution 55.

Consider the circuit shown below.



For mesh 1,

$$\begin{aligned} 220\angle -120^\circ - 220\angle 0^\circ + (160 - j40)\mathbf{I}_1 - (100 - j120)\mathbf{I}_2 &= 0 \\ 11 - 11\angle -120^\circ &= (8 - j2)\mathbf{I}_1 - (5 - j6)\mathbf{I}_2 \end{aligned} \quad (1)$$

For mesh 2,

$$\begin{aligned} 220\angle 120^\circ - 220\angle -120^\circ + (130 - j80)\mathbf{I}_2 - (100 - j120)\mathbf{I}_1 &= 0 \\ 11\angle -120^\circ - 11\angle 120^\circ &= -(5 - j6)\mathbf{I}_1 + (6.5 - j4)\mathbf{I}_2 \end{aligned} \quad (2)$$

From (1) and (2),

$$\begin{bmatrix} 16.5 + j9.526 \\ -j19.053 \end{bmatrix} = \begin{bmatrix} 8 - j2 & -5 + j6 \\ -5 + j6 & 6.5 - j4 \end{bmatrix} \begin{bmatrix} \mathbf{I}_1 \\ \mathbf{I}_2 \end{bmatrix}$$

$$\Delta = 55 + j15, \quad \Delta_1 = 31.04 - j99.35, \quad \Delta_2 = 101.55 - j203.8$$

$$\mathbf{I}_1 = \frac{\Delta_1}{\Delta} = \frac{104.08\angle -72.65^\circ}{57.01\angle 15.26^\circ} = 1.8257\angle -87.91^\circ$$

$$\mathbf{I}_2 = \frac{\Delta_2}{\Delta} = \frac{227.7\angle -63.51^\circ}{57.01\angle 15.26^\circ} = 3.994\angle -78.77^\circ$$

$$\mathbf{I}_a = \mathbf{I}_1 = 1.8257\angle -87.91^\circ$$

$$\mathbf{I}_b = \mathbf{I}_2 - \mathbf{I}_1 = \frac{\Delta_2 - \Delta_1}{\Delta} = \frac{70.51 - j104.45}{55 + j15} = 2.211 \angle -71.23^\circ$$

$$\mathbf{I}_c = -\mathbf{I}_2 = 3.994 \angle 101.23^\circ$$

$$\mathbf{S}_A = |\mathbf{I}_a|^2 \mathbf{Z}_{AN} = (1.8257)^2 (60 + j80) = 199.99 + j266.7$$

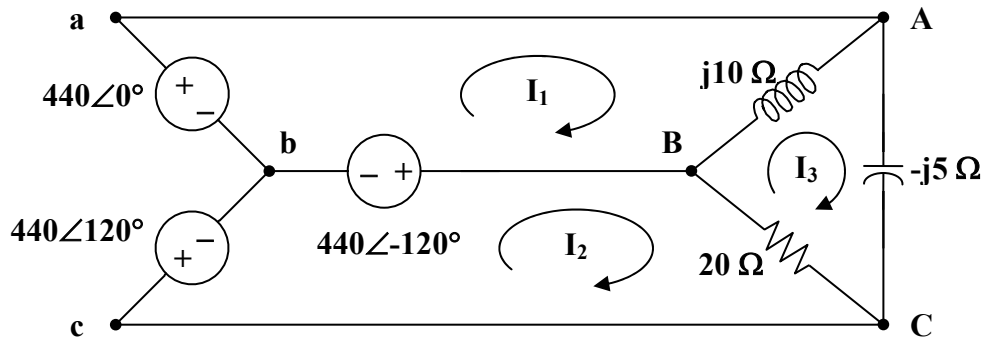
$$\mathbf{S}_B = |\mathbf{I}_b|^2 \mathbf{Z}_{BN} = (2.211)^2 (100 - j120) = 488.9 - j586.6$$

$$\mathbf{S}_C = |\mathbf{I}_c|^2 \mathbf{Z}_{CN} = (3.994)^2 (30 + j40) = 478.6 + j638.1$$

$$\mathbf{S} = \mathbf{S}_A + \mathbf{S}_B + \mathbf{S}_C = \underline{\underline{1167.5 + j318.2 \text{ VA}}}$$

Chapter 12, Solution 56.

(a) Consider the circuit below.



For mesh 1,

$$440 \angle -120^\circ - 440 \angle 0^\circ + j10(\mathbf{I}_1 - \mathbf{I}_3) = 0$$

$$\mathbf{I}_1 - \mathbf{I}_3 = \frac{(440)(1.5 + j0.866)}{j10} = 76.21 \angle -60^\circ \quad (1)$$

For mesh 2,

$$440 \angle 120^\circ - 440 \angle -120^\circ + 20(\mathbf{I}_2 - \mathbf{I}_3) = 0$$

$$\mathbf{I}_3 - \mathbf{I}_2 = \frac{(440)(j1.732)}{20} = j38.1 \quad (2)$$

For mesh 3,

$$j10(\mathbf{I}_3 - \mathbf{I}_1) + 20(\mathbf{I}_3 - \mathbf{I}_2) - j5\mathbf{I}_3 = 0$$

Substituting (1) and (2) into the equation for mesh 3 gives,

$$\mathbf{I}_3 = \frac{(440)(-1.5 + j0.866)}{j5} = 152.42 \angle 60^\circ \quad (3)$$

From (1),

$$\mathbf{I}_1 = \mathbf{I}_3 + 76.21 \angle -60^\circ = 114.315 + j66 = 132 \angle 30^\circ$$

From (2),

$$\mathbf{I}_2 = \mathbf{I}_3 - j38.1 = 76.21 + j93.9 = 120.93 \angle 50.94^\circ$$

$$\mathbf{I}_a = \mathbf{I}_1 = \underline{\mathbf{132 \angle 30^\circ A}}$$

$$\mathbf{I}_b = \mathbf{I}_2 - \mathbf{I}_1 = -38.105 + j27.9 = \underline{\mathbf{47.23 \angle 143.8^\circ A}}$$

$$\mathbf{I}_c = -\mathbf{I}_2 = \underline{\mathbf{120.9 \angle 230.9^\circ A}}$$

$$(b) \quad \mathbf{S}_{AB} = |\mathbf{I}_1 - \mathbf{I}_3|^2 (j10) = j58.08 \text{ kVA}$$

$$\mathbf{S}_{BC} = |\mathbf{I}_2 - \mathbf{I}_3|^2 (20) = 29.04 \text{ kVA}$$

$$\mathbf{S}_{CA} = |\mathbf{I}_3|^2 (-j5) = (152.42)^2 (-j5) = -j116.16 \text{ kVA}$$

$$\mathbf{S} = \mathbf{S}_{AB} + \mathbf{S}_{BC} + \mathbf{S}_{CA} = 29.04 - j58.08 \text{ kVA}$$

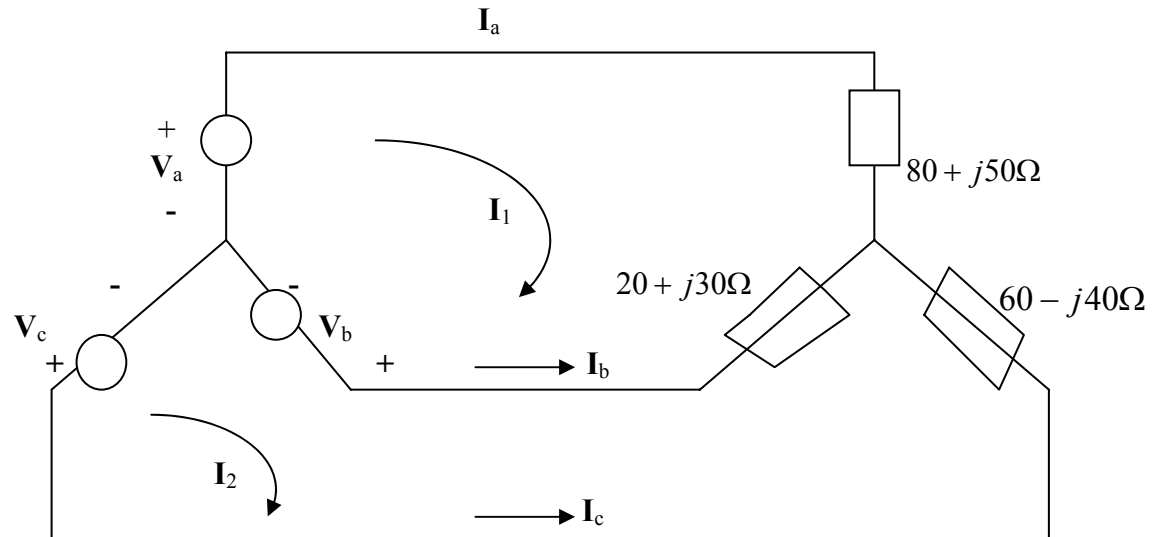
$$\text{Real power absorbed} = \underline{\mathbf{29.04 kW}}$$

(c) Total complex supplied by the source is

$$\mathbf{S} = \underline{\mathbf{29.04 - j58.08 kVA}}$$

Chapter 12, Solution 57.

We apply mesh analysis to the circuit shown below.



$$(100 + j80)I_1 - (20 + j30)I_2 = V_a - V_b = 165 + j95.263 \quad (1)$$

$$-(20 + j30)I_1 + (80 - j10)I_2 = V_b - V_c = -j190.53 \quad (2)$$

Solving (1) and (2) gives $I_1 = 1.8616 - j0.6084$, $I_2 = 0.9088 - j1.722$.

$$I_a = I_1 = \underline{1.9585 \angle -18.1^\circ \text{ A}}, \quad I_b = I_2 - I_1 = -0.528 - j1.1136 = \underline{1.4656 \angle -130.55^\circ \text{ A}}$$

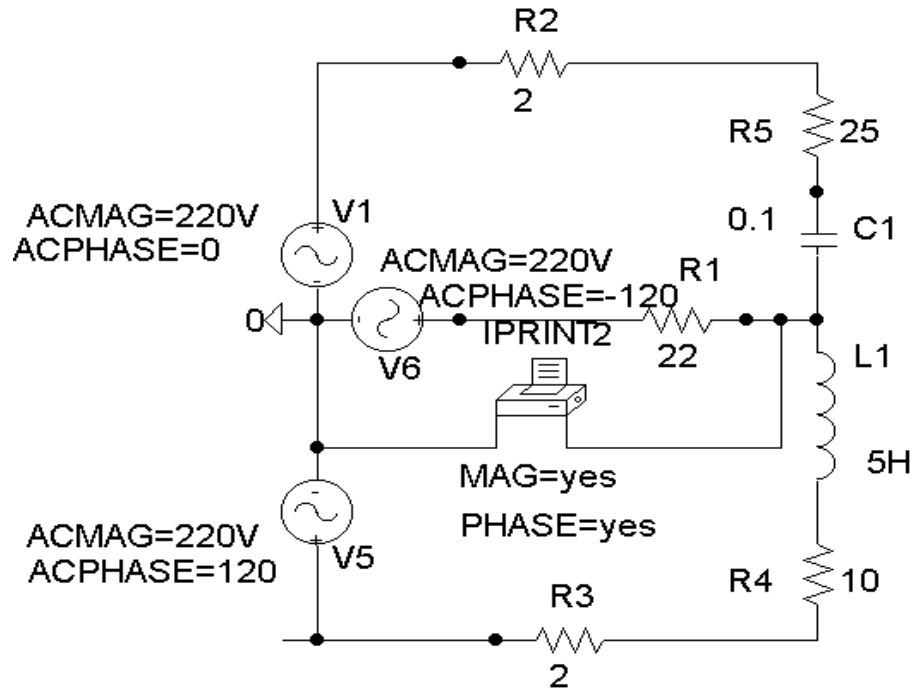
$$I_c = -I_2 = \underline{1.947 \angle 117.8^\circ \text{ A}}$$

Chapter 12, Solution 58.

The schematic is shown below. IPRINT is inserted in the neutral line to measure the current through the line. In the AC Sweep box, we select Total Ptss = 1, Start Freq. = 0.1592, and End Freq. = 0.1592. After simulation, the output file includes

| FREQ | IM(V_PRINT4) | IP(V_PRINT4) |
|------------|--------------|--------------|
| 1.592 E-01 | 1.078 E+01 | -8.997 E+01 |

i.e. $I_n = \underline{10.78\angle-89.97^\circ \text{ A}}$

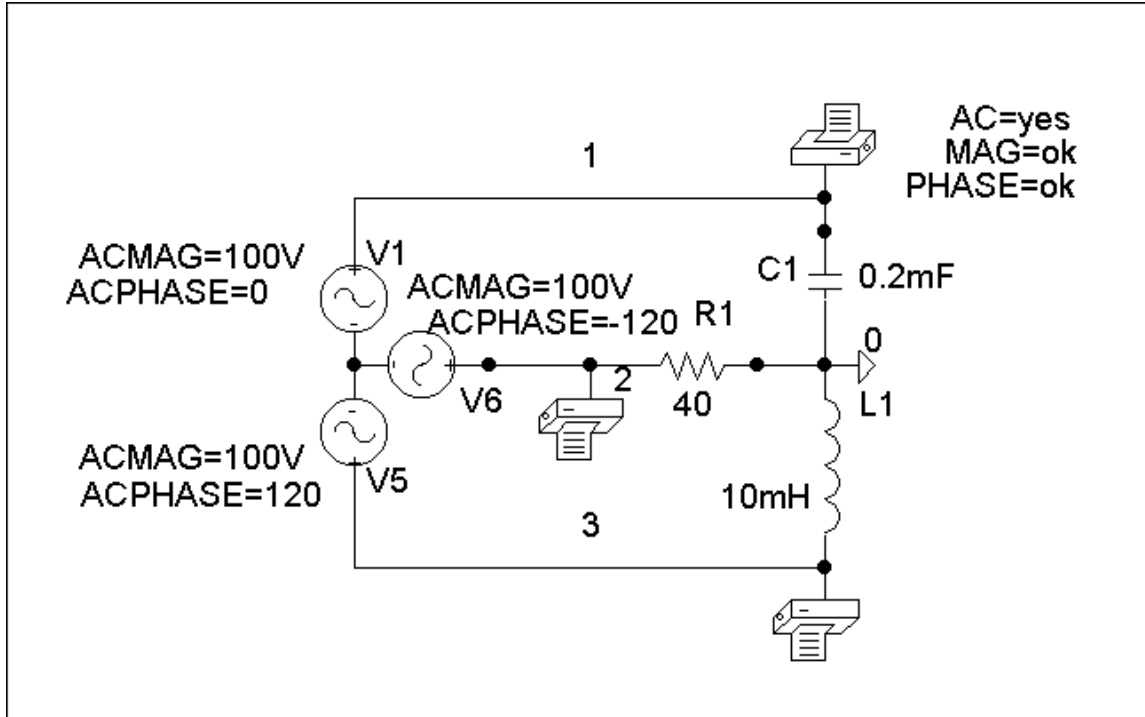


Chapter 12, Solution 59.

The schematic is shown below. In the AC Sweep box, we set Total Pts = 1, Start Freq = 60, and End Freq = 60. After simulation, we obtain an output file which includes

| FREQ | VM(1) | VP(1) |
|------------|------------|-------------|
| 6.000 E+01 | 2.206 E+02 | -3.456 E+01 |
| FREQ | VM(2) | VP(2) |
| 6.000 E+01 | 2.141 E+02 | -8.149 E+01 |
| FREQ | VM(3) | VP(3) |
| 6.000 E+01 | 4.991 E+01 | -5.059 E+01 |

i.e. $V_{AN} = \underline{220.6\angle-34.56^\circ}$, $V_{BN} = \underline{214.1\angle-81.49^\circ}$, $V_{CN} = \underline{49.91\angle-50.59^\circ \text{ V}}$

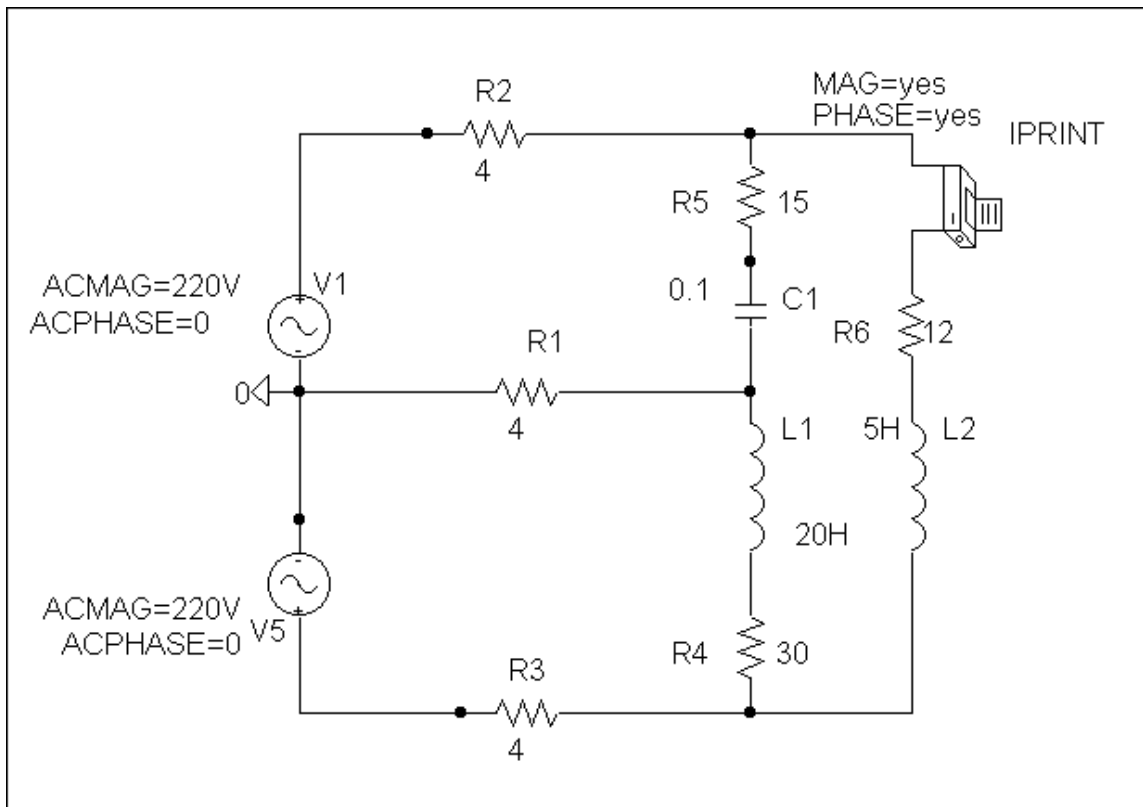


Chapter 12, Solution 60.

The schematic is shown below. IPRINT is inserted to give I_o . We select Total Pts = 1, Start Freq = 0.1592, and End Freq = 0.1592 in the AC Sweep box. Upon simulation, the output file includes

| FREQ | IM(V_PRINT4) | IP(V_PRINT4) |
|------------|--------------|--------------|
| 1.592 E-01 | 1.421 E+00 | -1.355 E+02 |

from which, $I_o = \underline{1.421 \angle -135.5^\circ \text{ A}}$



Chapter 12, Solution 61.

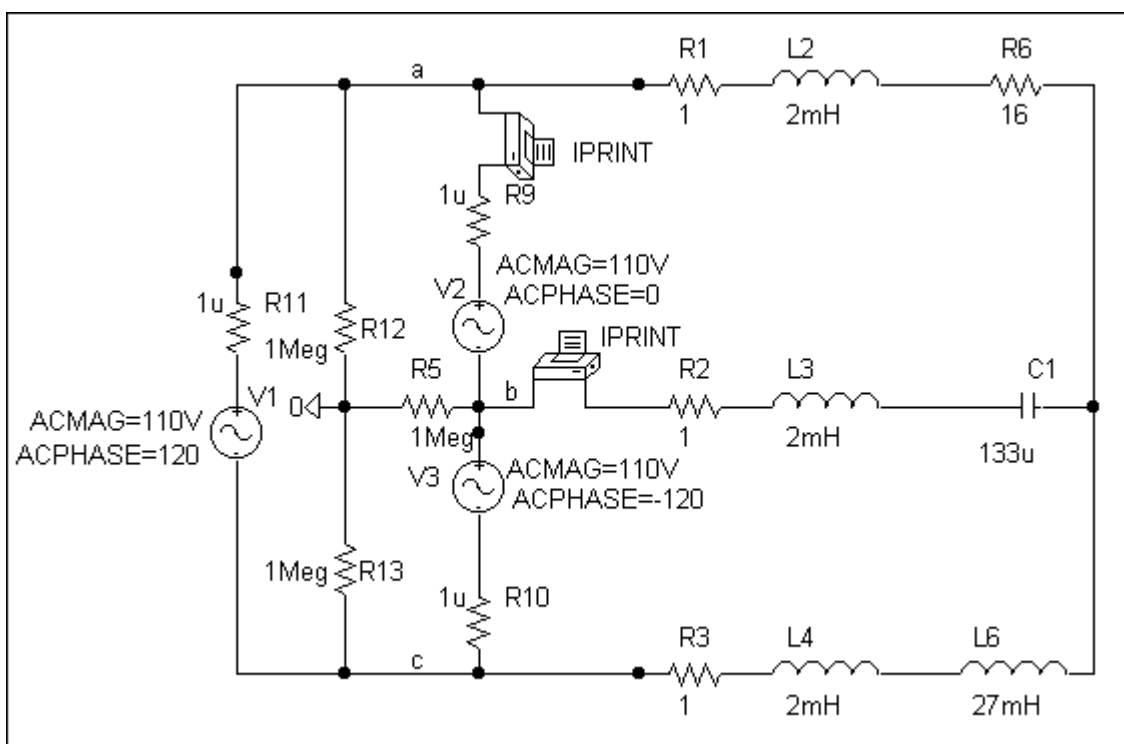
The schematic is shown below. Pseudocomponents IPRINT and PRINT are inserted to measure I_{aA} and V_{BN} . In the AC Sweep box, we set Total Pts = 1, Start Freq = 0.1592, and End Freq = 0.1592. Once the circuit is simulated, we get an output file which includes

| FREQ | VM(2) | VP(2) |
|------------|--------------|--------------|
| 1.592 E-01 | 2.308 E+02 | -1.334 E+02 |
| FREQ | IM(V_PRINT2) | IP(V_PRINT2) |
| 1.592 E-01 | 1.115 E+01 | 3.699 E+01 |

from which

$$I_{aA} = \underline{11.15 \angle 37^\circ \text{ A}}, \quad V_{BN} = \underline{230.8 \angle -133.4^\circ \text{ V}}$$

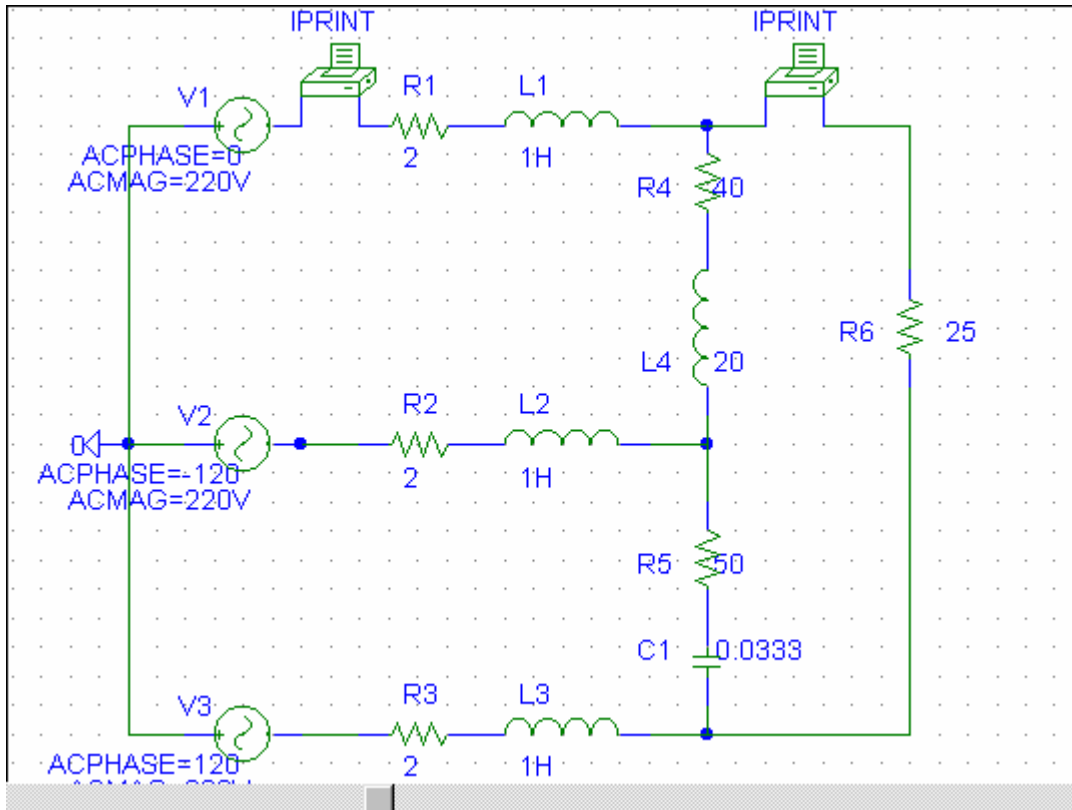
$$I_{ab} = \underline{7.333 \times 10^7 \angle 120^\circ \text{ A}}, \quad I_{bB} = \underline{5.96 \angle -91.41^\circ \text{ A}}$$



Chapter 12, Solution 63.

Let $\omega = 1$ so that $L = X/\omega = 20 \text{ H}$, and $C = \frac{1}{\omega X} = 0.0333 \text{ F}$

The schematic is shown below..



When the file is saved and run, we obtain an output file which includes the following:

```
FREQ      IM(V_PRINT1) IP(V_PRINT1)
1.592E-01  1.867E+01  1.589E+02

FREQ      IM(V_PRINT2) IP(V_PRINT2)
1.592E-01  1.238E+01  1.441E+02
```

From the output file, the required currents are:

$$\underline{I_{aA}} = 18.67 \angle 158.9^\circ \text{ A}, \quad \underline{I_{AC}} = 12.38 \angle 144.1^\circ \text{ A}$$

Chapter 12, Solution 64.

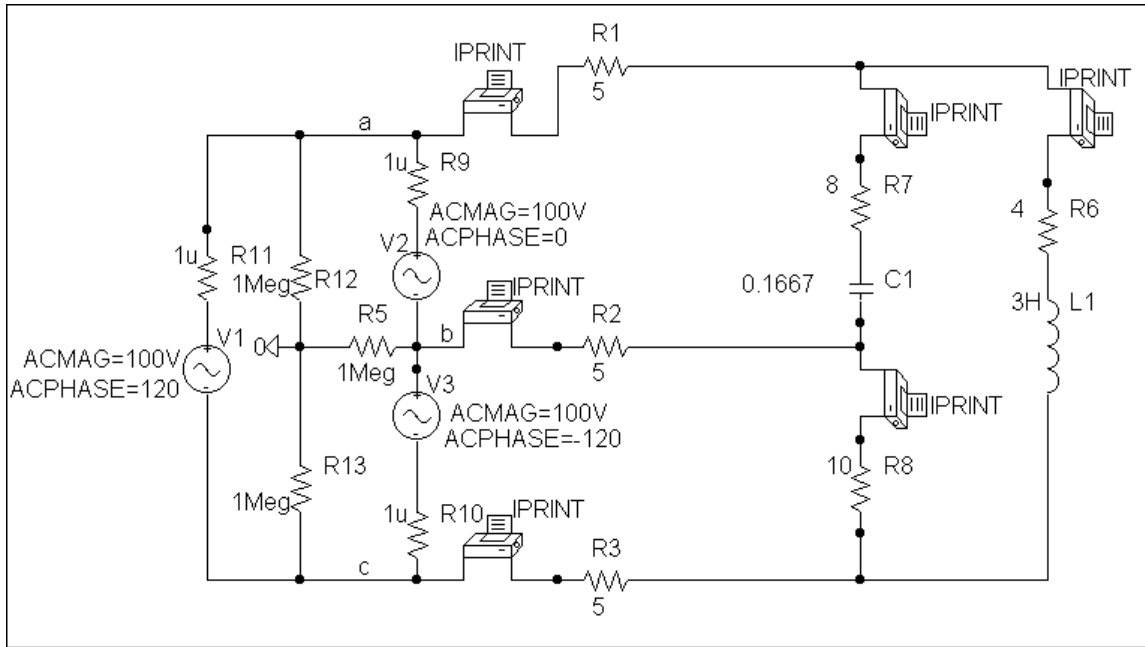
We follow Example 12.12. In the AC Sweep box we type Total Pts = 1, Start Freq = 0.1592, and End Freq = 0.1592. After simulation the output file includes

| | | |
|------------|--------------|--------------|
| FREQ | IM(V_PRINT1) | IP(V_PRINT1) |
| 1.592 E-01 | 4.710 E+00 | 7.138 E+01 |
| FREQ | IM(V_PRINT2) | IP(V_PRINT2) |
| 1.592 E-01 | 6.781 E+07 | -1.426 E+02 |
| FREQ | IM(V_PRINT3) | IP(V_PRINT3) |
| 1.592 E-01 | 3.898 E+00 | -5.076 E+00 |
| FREQ | IM(V_PRINT4) | IP(V_PRINT4) |
| 1.592 E-01 | 3.547 E+00 | 6.157 E+01 |
| FREQ | IM(V_PRINT5) | IP(V_PRINT5) |
| 1.592 E-01 | 1.357 E+00 | 9.781 E+01 |
| FREQ | IM(V_PRINT6) | IP(V_PRINT6) |
| 1.592 E-01 | 3.831 E+00 | -1.649 E+02 |

from this we obtain

$$I_{aA} = \underline{4.71\angle 71.38^\circ \text{ A}}, I_{bB} = \underline{6.781\angle -142.6^\circ \text{ A}}, I_{cC} = \underline{3.898\angle -5.08^\circ \text{ A}}$$

$$I_{AB} = \underline{3.547\angle 61.57^\circ \text{ A}}, I_{AC} = \underline{1.357\angle 97.81^\circ \text{ A}}, I_{BC} = \underline{3.831\angle -164.9^\circ \text{ A}}$$

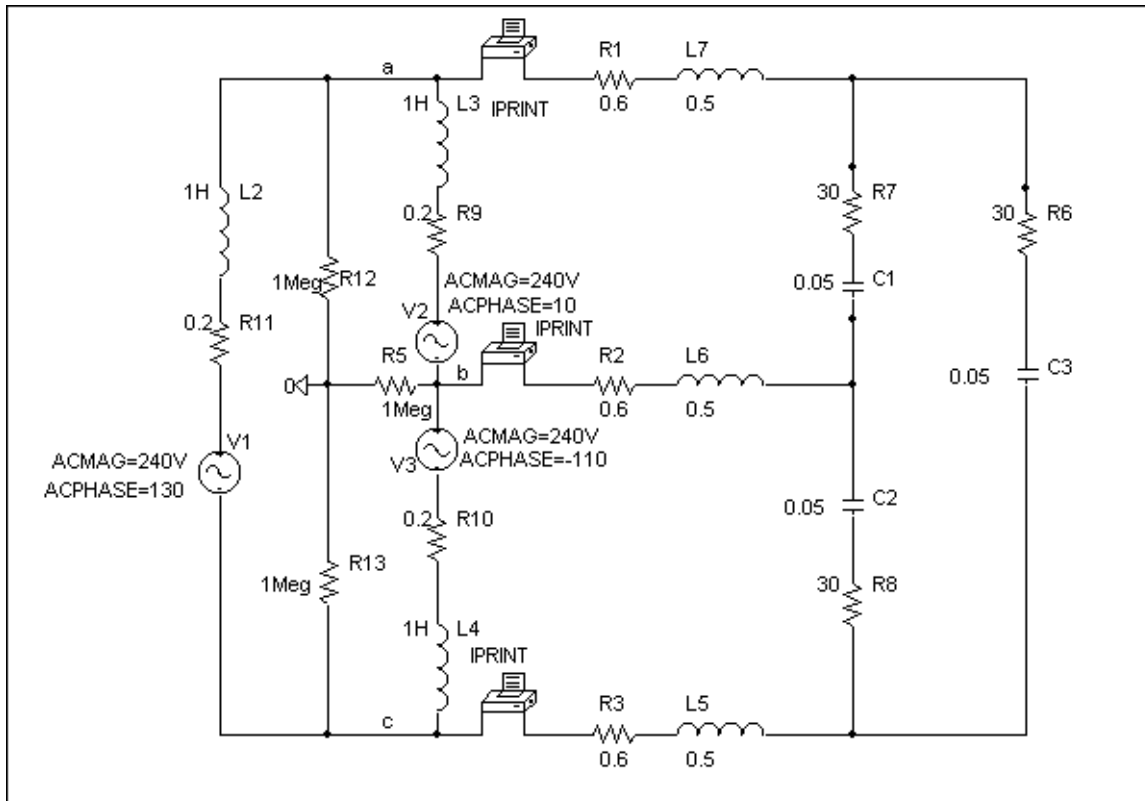


Chapter 12, Solution 65.

Due to the delta-connected source, we follow Example 12.12. We type Total Pts = 1, Start Freq = 0.1592, and End Freq = 0.1592. The schematic is shown below. After it is saved and simulated, we obtain an output file which includes

| FREQ | IM(V_PRINT1) | IP(V_PRINT1) |
|------------|--------------|--------------|
| 1.592 E-01 | 6.581 E+00 | 9.866 E+01 |
| FREQ | IM(V_PRINT2) | IP(V_PRINT2) |
| 1.592 E-01 | 1.140 E+01 | -1.113 E+02 |
| FREQ | IM(V_PRINT3) | IP(V_PRINT3) |
| 1.592 E-01 | 6.581 E+00 | 3.866 E+01 |

Thus, $I_{aA} = \underline{6.581 \angle 98.66^\circ \text{ A}}$, $I_{bB} = \underline{11.4 \angle -111.3^\circ \text{ A}}$, $I_{cC} = \underline{6.581 \angle 38.66^\circ \text{ A}}$



Chapter 12, Solution 66.

$$(a) \quad V_p = \frac{V_L}{\sqrt{3}} = \frac{208}{\sqrt{3}} = \underline{\underline{120 \text{ V}}}$$

- (b) Because the load is unbalanced, we have an unbalanced three-phase system. Assuming an abc sequence,

$$\mathbf{I}_1 = \frac{120 \angle 0^\circ}{48} = 2.5 \angle 0^\circ \text{ A}$$

$$\mathbf{I}_2 = \frac{120 \angle -120^\circ}{40} = 3 \angle -120^\circ \text{ A}$$

$$\mathbf{I}_3 = \frac{120 \angle 120^\circ}{60} = 2 \angle 120^\circ \text{ A}$$

$$-\mathbf{I}_N = \mathbf{I}_1 + \mathbf{I}_2 + \mathbf{I}_3 = 2.5 + (3) \left(-0.5 - j\frac{\sqrt{3}}{2} \right) + (2) \left(-0.5 + j\frac{\sqrt{3}}{2} \right)$$

$$\mathbf{I}_N = j \frac{\sqrt{3}}{2} = j0.866 = 0.866 \angle 90^\circ \text{ A}$$

Hence,

$$\mathbf{I}_1 = \underline{\underline{2.5 \text{ A}}}, \quad \mathbf{I}_2 = \underline{\underline{3 \text{ A}}}, \quad \mathbf{I}_3 = \underline{\underline{2 \text{ A}}}, \quad \mathbf{I}_N = \underline{\underline{0.866 \text{ A}}}$$

$$(c) \quad P_1 = I_1^2 R_1 = (2.5)^2 (48) = \underline{\underline{300 \text{ W}}}$$

$$P_2 = I_2^2 R_2 = (3)^2 (40) = \underline{\underline{360 \text{ W}}}$$

$$P_3 = I_3^2 R_3 = (2)^2 (60) = \underline{\underline{240 \text{ W}}}$$

$$(d) \quad P_T = P_1 + P_2 + P_3 = \underline{\underline{900 \text{ W}}}$$

Chapter 12, Solution 67.

(a) The power to the motor is

$$P_T = S \cos \theta = (260)(0.85) = 221 \text{ kW}$$

The motor power per phase is

$$P_p = \frac{1}{3} P_T = 73.67 \text{ kW}$$

Hence, the wattmeter readings are as follows:

$$W_a = 73.67 + 24 = \underline{\underline{97.67 \text{ kW}}}$$

$$W_b = 73.67 + 15 = \underline{\underline{88.67 \text{ kW}}}$$

$$W_c = 73.67 + 9 = \underline{\underline{83.67 \text{ kW}}}$$

(b) The motor load is balanced so that $I_N = 0$.

For the lighting loads,

$$I_a = \frac{24,000}{120} = 200 \text{ A}$$

$$I_b = \frac{15,000}{120} = 125 \text{ A}$$

$$I_c = \frac{9,000}{120} = 75 \text{ A}$$

If we let

$$\mathbf{I}_a = I_a \angle 0^\circ = 200 \angle 0^\circ \text{ A}$$

$$\mathbf{I}_b = 125 \angle -120^\circ \text{ A}$$

$$\mathbf{I}_c = 75 \angle 120^\circ \text{ A}$$

Then,

$$-\mathbf{I}_N = \mathbf{I}_a + \mathbf{I}_b + \mathbf{I}_c$$

$$-\mathbf{I}_N = 200 + (125) \left(-0.5 - j \frac{\sqrt{3}}{2} \right) + (75) \left(-0.5 + j \frac{\sqrt{3}}{2} \right)$$

$$-\mathbf{I}_N = 100 - 86.602 \text{ A}$$

$$|\mathbf{I}_N| = \underline{\underline{132.3 \text{ A}}}$$

Chapter 12, Solution 68.

$$(a) \quad S = \sqrt{3} V_L I_L = \sqrt{3} (330)(8.4) = \underline{\underline{4801 \text{ VA}}}$$

$$(b) \quad P = S \cos \theta \longrightarrow \text{pf} = \cos \theta = \frac{P}{S}$$

$$\text{pf} = \frac{4500}{4801.24} = \underline{\underline{0.9372}}$$

$$(c) \quad \text{For a wye-connected load,}$$

$$I_p = I_L = \underline{\underline{8.4 \text{ A}}}$$

$$(d) \quad V_p = \frac{V_L}{\sqrt{3}} = \frac{330}{\sqrt{3}} = \underline{\underline{190.53 \text{ V}}}$$

Chapter 12, Solution 69.

$$\bar{S}_1 = 1.2(0.8 + j0.6) = 0.96 + j0.72 \text{ MVA}, \quad \bar{S}_2 = 2(0.75 - j0.661) = 1.5 - 1.323 \text{ MVA}, \quad \bar{S}_3 = 0.8 \text{ MVA}$$

$$\bar{S} = \bar{S}_1 + \bar{S}_2 + \bar{S}_3 = 3.26 - j0.603 \text{ MVA}, \quad \text{pf} = \frac{P}{S} = \frac{3.26}{3.3153} = 0.9833$$

$$Q_c = P(\tan_{old} - \tan_{new}) = 3.26[\tan(\cos^{-1} 0.9833) - \tan(\cos^{-1} 0.99)] = 0.1379 \text{ MVA}$$

$$C = \frac{\frac{1}{3} \times 0.1379 \times 10^6}{2\pi \times 60 \times 6.6^2 \times 10^6} = \underline{\underline{28 \text{ mF}}}$$

Chapter 12, Solution 70.

$$P_T = P_1 + P_2 = 1200 - 400 = 800$$

$$Q_T = P_2 - P_1 = -400 - 1200 = -1600$$

$$\tan \theta = \frac{Q_T}{P_T} = \frac{-1600}{800} = -2 \longrightarrow \theta = -63.43^\circ$$

$$\text{pf} = \cos \theta = \underline{\underline{0.4472 \text{ (leading)}}}$$

$$Z_p = \frac{V_L}{I_L} = \frac{240}{6} = 40$$

$$\underline{\underline{Z_p = 40 \angle -63.43^\circ \Omega}}$$

Chapter 12, Solution 71.

(a) If $V_{ab} = 208 \angle 0^\circ$, $V_{bc} = 208 \angle -120^\circ$, $V_{ca} = 208 \angle 120^\circ$,

$$I_{AB} = \frac{V_{ab}}{Z_{Ab}} = \frac{208 \angle 0^\circ}{20} = 10.4 \angle 0^\circ$$

$$I_{BC} = \frac{V_{bc}}{Z_{BC}} = \frac{208 \angle -120^\circ}{10\sqrt{2} \angle -45^\circ} = 14.708 \angle -75^\circ$$

$$I_{CA} = \frac{V_{ca}}{Z_{CA}} = \frac{208 \angle 120^\circ}{13 \angle 22.62^\circ} = 16 \angle 97.38^\circ$$

$$I_{aA} = I_{AB} - I_{CA} = 10.4 \angle 0^\circ - 16 \angle 97.38^\circ$$

$$I_{aA} = 10.4 + 2.055 - j15.867$$

$$I_{aA} = 20.171 \angle -51.87^\circ$$

$$I_{cC} = I_{CA} - I_{BC} = 16 \angle 97.83^\circ - 14.708 \angle -75^\circ$$

$$I_{cC} = 30.64 \angle 101.03^\circ$$

$$P_1 = |V_{ab}| |I_{aA}| \cos(\theta_{V_{ab}} - \theta_{I_{aA}})$$

$$P_1 = (208)(20.171) \cos(0^\circ + 51.87^\circ) = \underline{\underline{2590 \text{ W}}}$$

$$P_2 = |\mathbf{V}_{cb}| |\mathbf{I}_{cC}| \cos(\theta_{V_{cb}} - \theta_{I_{cC}})$$

$$\text{But } \mathbf{V}_{cb} = -\mathbf{V}_{bc} = 208 \angle 60^\circ$$

$$P_2 = (208)(30.64) \cos(60^\circ - 101.03^\circ) = \underline{\underline{4808 \text{ W}}}$$

$$(b) \quad P_T = P_1 + P_2 = 7398.17 \text{ W}$$

$$Q_T = \sqrt{3} (P_2 - P_1) = 3840.25 \text{ VAR}$$

$$\mathbf{S}_T = P_T + jQ_T = 7398.17 + j3840.25 \text{ VA}$$

$$S_T = |\mathbf{S}_T| = \underline{\underline{8335 \text{ VA}}}$$

Chapter 12, Solution 72.

From Problem 12.11,

$$\mathbf{V}_{AB} = 220 \angle 130^\circ \text{ V} \quad \text{and} \quad \mathbf{I}_{aA} = 30 \angle 180^\circ \text{ A}$$

$$P_1 = (220)(30) \cos(130^\circ - 180^\circ) = \underline{\underline{4242 \text{ W}}}$$

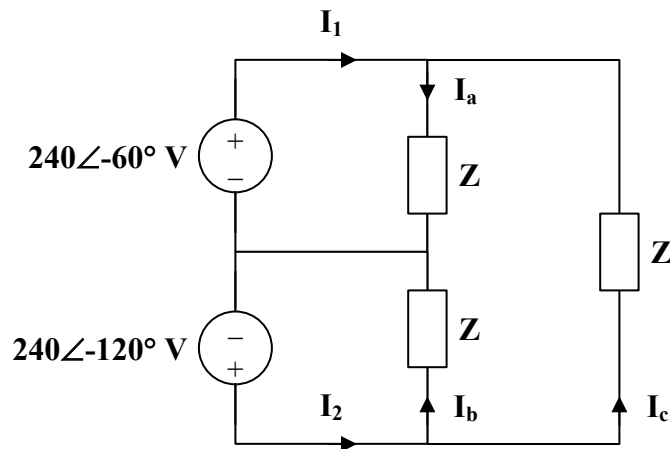
$$\mathbf{V}_{CB} = -\mathbf{V}_{BC} = 220 \angle 190^\circ$$

$$\mathbf{I}_{cC} = 30 \angle -60^\circ$$

$$P_2 = (220)(30) \cos(190^\circ + 60^\circ) = \underline{\underline{-2257 \text{ W}}}$$

Chapter 12, Solution 73.

Consider the circuit as shown below.



$$\mathbf{Z} = 10 + j30 = 31.62 \angle 71.57^\circ$$

$$\mathbf{I}_a = \frac{240 \angle -60^\circ}{31.62 \angle 71.57^\circ} = 7.59 \angle -131.57^\circ$$

$$\mathbf{I}_b = \frac{240 \angle -120^\circ}{31.62 \angle 71.57^\circ} = 7.59 \angle -191.57^\circ$$

$$\mathbf{I}_c \mathbf{Z} + 240 \angle -60^\circ - 240 \angle -120^\circ = 0$$

$$\mathbf{I}_c = \frac{-240}{31.62 \angle 71.57^\circ} = 7.59 \angle 108.43^\circ$$

$$\mathbf{I}_1 = \mathbf{I}_a - \mathbf{I}_c = 13.146 \angle -101.57^\circ$$

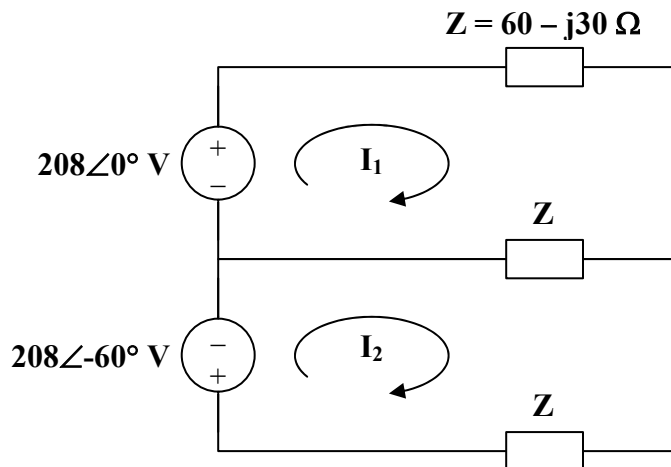
$$\mathbf{I}_2 = \mathbf{I}_b + \mathbf{I}_c = 13.146 \angle 138.43^\circ$$

$$P_1 = \operatorname{Re}[\mathbf{V}_1 \mathbf{I}_1^*] = \operatorname{Re}[(240 \angle -60^\circ)(13.146 \angle 101.57^\circ)] = \underline{\underline{2360 \text{ W}}}$$

$$P_2 = \operatorname{Re}[\mathbf{V}_2 \mathbf{I}_2^*] = \operatorname{Re}[(240 \angle -120^\circ)(13.146 \angle -138.43^\circ)] = \underline{\underline{-632.8 \text{ W}}}$$

Chapter 12, Solution 74.

Consider the circuit shown below.



For mesh 1,

$$208 = 2\mathbf{Z}\mathbf{I}_1 - \mathbf{Z}\mathbf{I}_2$$

For mesh 2,

$$-208 \angle -60^\circ = -\mathbf{Z}\mathbf{I}_1 + 2\mathbf{Z}\mathbf{I}_2$$

In matrix form,

$$\begin{bmatrix} 208 \\ -208 \angle -60^\circ \end{bmatrix} = \begin{bmatrix} 2\mathbf{Z} & -\mathbf{Z} \\ -\mathbf{Z} & 2\mathbf{Z} \end{bmatrix} \begin{bmatrix} \mathbf{I}_1 \\ \mathbf{I}_2 \end{bmatrix}$$

$$\Delta = 3\mathbf{Z}^2, \quad \Delta_1 = (208)(1.5 + j0.866)\mathbf{Z}, \quad \Delta_2 = (208)(j1.732)\mathbf{Z}$$

$$\mathbf{I}_1 = \frac{\Delta_1}{\Delta} = \frac{(208)(1.5 + j0.866)}{(3)(60 - j30)} = 1.789 \angle 56.56^\circ$$

$$\mathbf{I}_2 = \frac{\Delta_2}{\Delta} = \frac{(208)(j1.732)}{(3)(60 - j30)} = 1.79 \angle 116.56^\circ$$

$$P_1 = \operatorname{Re}[\mathbf{V}_1 \mathbf{I}_1^*] = \operatorname{Re}[(208)(1.789 \angle -56.56^\circ)] = \underline{\mathbf{208.98 \text{ W}}}$$

$$P_2 = \operatorname{Re}[\mathbf{V}_2 (-\mathbf{I}_2)^*] = \operatorname{Re}[(208 \angle -60^\circ)(1.79 \angle 63.44^\circ)] = \underline{\mathbf{371.65 \text{ W}}}$$

Chapter 12, Solution 75.

$$(a) \quad I = \frac{V}{R} = \frac{12}{600} = \underline{\mathbf{20 \text{ mA}}}$$

$$(b) \quad I = \frac{V}{R} = \frac{120}{600} = \underline{\mathbf{200 \text{ mA}}}$$

Chapter 12, Solution 76.

If both appliances have the same power rating, P ,

$$I = \frac{P}{V_s}$$

$$\text{For the 120-V appliance,} \quad I_1 = \frac{P}{120}.$$

$$\text{For the 240-V appliance,} \quad I_2 = \frac{P}{240}.$$

$$\text{Power loss} = I^2 R = \begin{cases} \frac{P^2 R}{120^2} & \text{for the 120-V appliance} \\ \frac{P^2 R}{240^2} & \text{for the 240-V appliance} \end{cases}$$

Since $\frac{1}{120^2} > \frac{1}{240^2}$, the losses in the 120-V appliance are higher.

Chapter 12, Solution 77.

$$P_g = P_T - P_{\text{load}} - P_{\text{line}}, \quad \text{pf} = 0.85$$

$$\text{But } P_T = 3600 \cos \theta = 3600 \times \text{pf} = 3060$$

$$P_g = 3060 - 2500 - (3)(80) = \underline{\underline{320 \text{ W}}}$$

Chapter 12, Solution 78.

$$\cos \theta_1 = \frac{51}{60} = 0.85 \longrightarrow \theta_1 = 31.79^\circ$$

$$Q_1 = S_1 \sin \theta_1 = (60)(0.5268) = 31.61 \text{ kVAR}$$

$$P_2 = P_1 = 51 \text{ kW}$$

$$\cos \theta_2 = 0.95 \longrightarrow \theta_2 = 18.19^\circ$$

$$S_2 = \frac{P_2}{\cos \theta_2} = 53.68 \text{ kVA}$$

$$Q_2 = S_2 \sin \theta_2 = 16.759 \text{ kVAR}$$

$$Q_c = Q_1 - Q_2 = 31.61 - 16.759 = 14.851 \text{ kVAR}$$

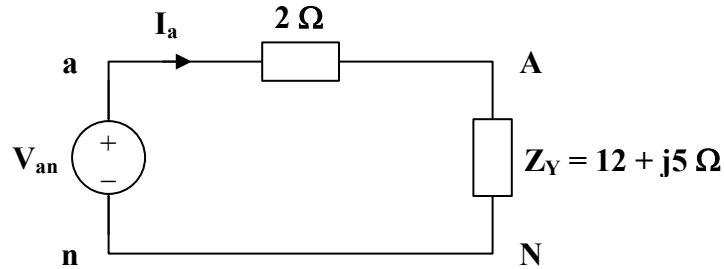
For each load,

$$Q_{c1} = \frac{Q_c}{3} = 4.95 \text{ kVAR}$$

$$C = \frac{Q_{c1}}{\omega V^2} = \frac{4950}{(2\pi)(60)(440)^2} = \underline{\underline{67.82 \mu\text{F}}}$$

Chapter 12, Solution 79.

Consider the per-phase equivalent circuit below.



$$I_a = \frac{V_{an}}{Z_Y + 2} = \frac{255\angle 0^\circ}{14 + j5} = \underline{17.15\angle -19.65^\circ\text{ A}}$$

Thus,

$$I_b = I_a \angle -120^\circ = \underline{17.15\angle -139.65^\circ\text{ A}}$$

$$I_c = I_a \angle 120^\circ = \underline{17.15\angle 100.35^\circ\text{ A}}$$

$$V_{AN} = I_a Z_Y = (17.15\angle -19.65^\circ)(13\angle 22.62^\circ) = \underline{223\angle 2.97^\circ\text{ V}}$$

Thus,

$$V_{BN} = V_{AN} \angle -120^\circ = \underline{223\angle -117.63^\circ\text{ V}}$$

$$V_{CN} = V_{AN} \angle 120^\circ = \underline{223\angle 122.97^\circ\text{ V}}$$

Chapter 12, Solution 80.

$$S = S_1 + S_2 + S_3 = 6[0.83 + j \sin(\cos^{-1} 0.83)] + S_2 + 8(0.7071 - j0.7071)$$

$$S = 10.6368 - j2.31 + S_2 \text{ kVA} \quad (1)$$

But

$$S = \sqrt{3}V_L I_L \angle \theta = \sqrt{3}(208)(84.6)(0.8 + j0.6) \text{ VA} = 24.383 + j18.287 \text{ kVA} \quad (2)$$

From (1) and (2),

$$S_2 = 13.746 + j20.6 = 24.76\angle 56.28^\circ \text{ kVA}$$

Thus, the unknown load is 24.76 kVA at 0.5551 pf lagging.

Chapter 12, Solution 81.

$$\text{pf} = 0.8 \text{ (leading)} \longrightarrow \theta_1 = -36.87^\circ$$

$$\mathbf{S}_1 = 150 \angle -36.87^\circ \text{ kVA}$$

$$\text{pf} = 1.0 \longrightarrow \theta_2 = 0^\circ$$

$$\mathbf{S}_2 = 100 \angle 0^\circ \text{ kVA}$$

$$\text{pf} = 0.6 \text{ (lagging)} \longrightarrow \theta_3 = 53.13^\circ$$

$$\mathbf{S}_3 = 200 \angle 53.13^\circ \text{ kVA}$$

$$\mathbf{S}_4 = 80 + j95 \text{ kVA}$$

$$\mathbf{S} = \mathbf{S}_1 + \mathbf{S}_2 + \mathbf{S}_3 + \mathbf{S}_4$$

$$\mathbf{S} = 420 + j165 = 451.2 \angle 21.45^\circ \text{ kVA}$$

$$S = \sqrt{3} V_L I_L$$

Chapter 12, Solution 82.

$$\bar{S}_1 = 400(0.8 + j0.6) = 320 + j240 \text{ kVA}, \quad \bar{S}_2 = 3 \frac{V_p^2}{Z_p^*}$$

For the delta-connected load, $V_L = V_p$

$$\bar{S}_2 = 3 \times \frac{(2400)^2}{10 - j8} = 1053.7 + j842.93 \text{ kVA}$$

$$\bar{S} = \bar{S}_1 + \bar{S}_2 = 1.3737 + j1.0829 \text{ MVA}$$

Let $I = I_1 + I_2$ be the total line current. For I_1 ,

$$S_1 = 3V_p I_1^*, \quad V_p = \frac{V_L}{\sqrt{3}}$$

$$I_1^* = \frac{S_1}{\sqrt{3}V_L} = \frac{(320 + j240) \times 10^3}{\sqrt{3}(2400)}, \quad I_1 = 76.98 - j57.735$$

For I_2 , convert the load to wye.

$$I_2 = I_p \sqrt{3} \angle -30^\circ = \frac{2400}{10 + j8} \sqrt{3} \angle -30^\circ = 273.1 - j289.76$$

$$I = I_1 + I_2 = 350 - j347.5$$

$$V_s = V_L + V_{line} = 2400 + I(3 + j6) = 5.185 + j1.405 \text{ kV} \longrightarrow |V_s| = \underline{5.372 \text{ kV}}$$

Chapter 12, Solution 83.

$$S_1 = 120 \times 746 \times 0.95(0.707 + j0.707) = 60.135 + j60.135 \text{ kVA}, \quad S_2 = 80 \text{ kVA}$$

$$S = S_1 + S_2 = 140.135 + j60.135 \text{ kVA}$$

$$\text{But } |S| = \sqrt{3}V_L I_L \longrightarrow I_L = \frac{|S|}{\sqrt{3}V_L} = \frac{152.49 \times 10^3}{\sqrt{3} \times 480} = \underline{183.42 \text{ A}}$$

Chapter 12, Solution 84.

We first find the magnitude of the various currents.

For the motor,

$$I_L = \frac{S}{\sqrt{3} V_L} = \frac{4000}{440\sqrt{3}} = 5.248 \text{ A}$$

For the capacitor,

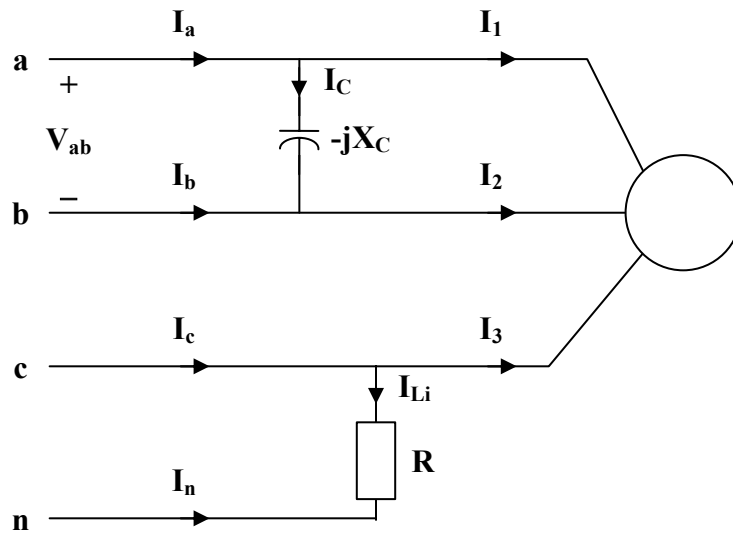
$$I_C = \frac{Q_c}{V_L} = \frac{1800}{440} = 4.091 \text{ A}$$

For the lighting,

$$V_p = \frac{440}{\sqrt{3}} = 254 \text{ V}$$

$$I_{Li} = \frac{P_{Li}}{V_p} = \frac{800}{254} = 3.15 \text{ A}$$

Consider the figure below.



$$\begin{aligned} \text{If } V_{an} &= V_p \angle 0^\circ, & V_{ab} &= \sqrt{3} V_p \angle 30^\circ \\ V_{cn} &= V_p \angle 120^\circ \end{aligned}$$

$$\mathbf{I}_C = \frac{\mathbf{V}_{ab}}{-jX_C} = 4.091 \angle 120^\circ$$

$$\mathbf{I}_1 = \frac{\mathbf{V}_{ab}}{\mathbf{Z}_\Delta} = 4.091 \angle (\theta + 30^\circ)$$

$$\text{where } \theta = \cos^{-1}(0.72) = 43.95^\circ$$

$$\mathbf{I}_1 = 5.249 \angle 73.95^\circ$$

$$\mathbf{I}_2 = 5.249 \angle -46.05^\circ$$

$$\mathbf{I}_3 = 5.249 \angle 193.95^\circ$$

$$\mathbf{I}_{Li} = \frac{\mathbf{V}_{cn}}{R} = 3.15 \angle 120^\circ$$

Thus,

$$\mathbf{I}_a = \mathbf{I}_1 + \mathbf{I}_C = 5.249 \angle 73.95^\circ + 4.091 \angle 120^\circ$$

$$\mathbf{I}_a = \underline{\underline{8.608 \angle 93.96^\circ \text{ A}}}$$

$$\mathbf{I}_b = \mathbf{I}_2 - \mathbf{I}_C = 5.249 \angle -46.05^\circ - 4.091 \angle 120^\circ$$

$$\mathbf{I}_b = \underline{\underline{9.271 \angle -52.16^\circ \text{ A}}}$$

$$\mathbf{I}_c = \mathbf{I}_3 + \mathbf{I}_{Li} = 5.249 \angle 193.95^\circ + 3.15 \angle 120^\circ$$

$$\mathbf{I}_c = \underline{\underline{6.827 \angle 167.6^\circ \text{ A}}}$$

$$\mathbf{I}_n = -\mathbf{I}_{Li} = \underline{\underline{3.15 \angle -60^\circ \text{ A}}}$$

Chapter 12, Solution 85.

$$\text{Let } Z_Y = R$$

$$V_p = \frac{V_L}{\sqrt{3}} = \frac{240}{\sqrt{3}} = 138.56 \text{ V}$$

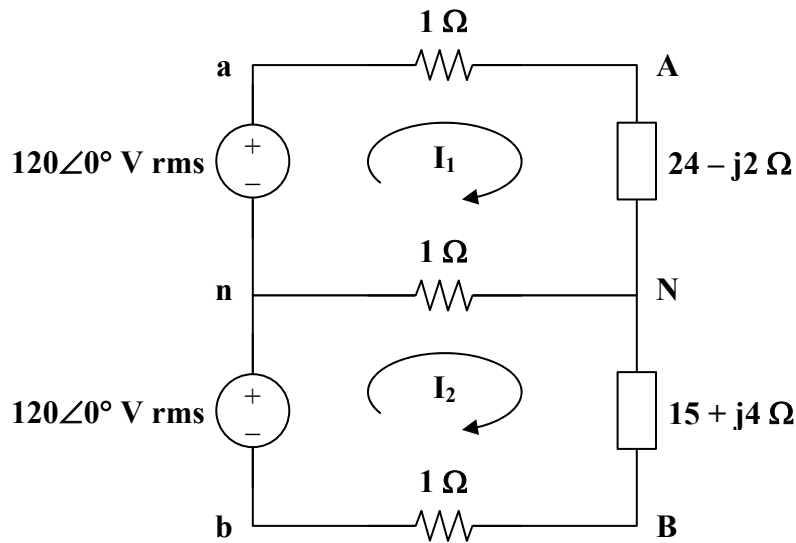
$$P = V_p I_p = \frac{27}{2} = 9 \text{ kW} = \frac{V_p^2}{R}$$

$$R = \frac{V_p^2}{P} = \frac{(138.56)^2}{9000} = 2.133 \, \Omega$$

Thus, $Z_Y = \underline{\underline{2.133 \, \Omega}}$

Chapter 12, Solution 86.

Consider the circuit shown below.



For the two meshes,

$$120 = (26 - j2)I_1 - I_2 \quad (1)$$

$$120 = (17 + j4)I_2 - I_1 \quad (2)$$

In matrix form,

$$\begin{bmatrix} 120 \\ 120 \end{bmatrix} = \begin{bmatrix} 26 - j2 & -1 \\ -1 & 17 + j4 \end{bmatrix} \begin{bmatrix} I_1 \\ I_2 \end{bmatrix}$$

$$\Delta = 449 + j70, \quad \Delta_1 = (120)(18 + j4), \quad \Delta_2 = (120)(27 - j2)$$

$$I_1 = \frac{\Delta_1}{\Delta} = \frac{120 \times 18.44 \angle 12.53^\circ}{454.42 \angle 8.86^\circ} = 4.87 \angle 3.67^\circ$$

$$I_2 = \frac{\Delta_2}{\Delta} = \frac{120 \times 27.07 \angle -4.24^\circ}{454.42 \angle 8.86^\circ} = 7.15 \angle -13.1^\circ$$

$$\mathbf{I_{aA} = I_1 = \underline{4.87 \angle 3.67^\circ \text{ A}}}$$

$$\mathbf{I_{bB} = -I_2 = \underline{7.15 \angle 166.9^\circ \text{ A}}}$$

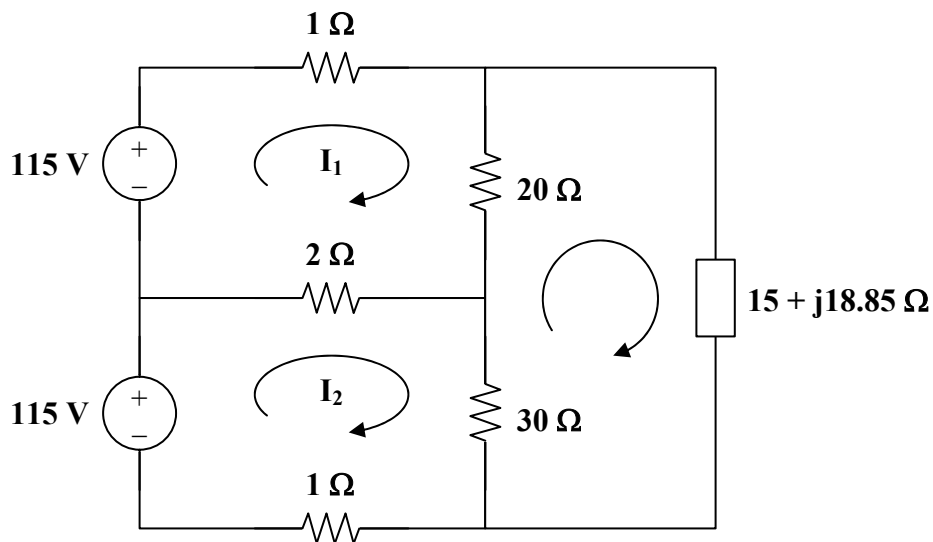
$$\mathbf{I_{nN} = I_2 - I_1 = \frac{\Delta_2 - \Delta_1}{\Delta}}$$

$$\mathbf{I_{nN} = \frac{(120)(9 - j6)}{449 + j70} = \underline{2.856 \angle -42.55^\circ \text{ A}}}$$

Chapter 12, Solution 87.

$$L = 50 \text{ mH} \longrightarrow j\omega L = j(2\pi)(60)(50 \cdot 10^{-3}) = j18.85$$

Consider the circuit below.



Applying KVL to the three meshes, we obtain

$$23\mathbf{I_1} - 2\mathbf{I_2} - 20\mathbf{I_3} = 115 \quad (1)$$

$$-2\mathbf{I_1} + 33\mathbf{I_2} - 30\mathbf{I_3} = 115 \quad (2)$$

$$-20\mathbf{I_1} - 30\mathbf{I_2} + (65 + j18.85)\mathbf{I_3} = 0 \quad (3)$$

In matrix form,

$$\begin{bmatrix} 23 & -2 & -20 \\ -2 & 33 & -30 \\ -20 & -30 & 65 + j18.85 \end{bmatrix} \begin{bmatrix} \mathbf{I_1} \\ \mathbf{I_2} \\ \mathbf{I_3} \end{bmatrix} = \begin{bmatrix} 115 \\ 115 \\ 0 \end{bmatrix}$$

$$\Delta = 12,775 + j14,232,$$

$$\Delta_2 = (115)(1825 + j471.3),$$

$$\Delta_1 = (115)(1975 + j659.8)$$

$$\Delta_3 = (115)(1450)$$

$$\mathbf{I}_1 = \frac{\Delta_1}{\Delta} = \frac{115 \times 2082 \angle 18.47^\circ}{19214 \angle 48.09^\circ} = 12.52 \angle -29.62^\circ$$

$$\mathbf{I}_2 = \frac{\Delta_2}{\Delta} = \frac{115 \times 1884.9 \angle 14.48^\circ}{19124 \angle 48.09^\circ} = 11.33 \angle -33.61^\circ$$

$$\mathbf{I}_n = \mathbf{I}_2 - \mathbf{I}_1 = \frac{\Delta_2 - \Delta_1}{\Delta} = \frac{(115)(-150 - j188.5)}{12,775 + j14,231.75} = \underline{\underline{\mathbf{1.448 \angle -176.6^\circ A}}}$$

$$\mathbf{S}_1 = \mathbf{V}_1 \mathbf{I}_1^* = (115)(12.52 \angle 29.62^\circ) = \underline{\underline{\mathbf{1252 + j711.6 VA}}}$$

$$\mathbf{S}_2 = \mathbf{V}_2 \mathbf{I}_2^* = (115)(11.33 \angle 33.61^\circ) = \underline{\underline{\mathbf{1085 + j721.2 VA}}}$$