

Chapter One:

Basic Concepts

1.1 If 60 C of charge pass through an electric conductor in 30 seconds, determine the current in the conductor. **CS**

SOLUTION:

$$1.1 \quad Q = 60 \text{ C} \quad \Delta t = 30 \text{ s} \quad I = \frac{Q}{\Delta t} = \frac{60}{30} \quad \boxed{I = 2 \text{ A}}$$

- 1.2** In an electric conductor, a charge of 300 C passes any point in a 5-s interval. Determine the current in the conductor.

SOLUTION:

$$1.2 \quad Q = 300 \text{ C} \quad \Delta t = 5 \text{ s} \quad I = \frac{Q}{\Delta t} \quad \boxed{I = 60 \text{ A}}$$

1.3 The current in a conductor is 1.5 A. How many coulombs of charge pass any point in a time interval of 1.5 min?

SOLUTION:

$$1.3 \quad I = 1.5 \text{ A} \quad \Delta t = 1.5 \text{ min} = 90 \text{ s} \quad \Phi = I(\Delta t) \quad \boxed{\Phi = 135 \text{ C}}$$

- 1.4** Determine the number of coulombs of charge produced by a 12-A battery charger in an hour.

SOLUTION:

$$1.4 \quad I = 12 \text{ A} \quad \Delta t = 1 \text{ hour} = 60 \text{ min} = 3600 \text{ s}$$

$$Q = I(\Delta t) = 12(3600) \quad \boxed{Q = 43.2 \text{ kC}}$$

- 1.5** A lightning bolt carrying 20,000 A lasts for 70 μs .
If the lightning strikes a tractor, determine the charge deposited on the tractor if the tires are assumed to be perfect insulators.

SOLUTION:

$$1.5 \quad I = 20,000 \text{ A} \quad \Delta t = 70 \mu\text{s} \quad Q = I(\Delta t) = (20k)(70\mu)$$

$$\boxed{Q = 1.4 \text{ C}}$$

1.6 If a 12-V battery supplies 10 A, find the amount of energy delivered in 1 hour.

SOLUTION:

$$1.6 \quad V = 12 \text{ V} \quad I = 10 \text{ A} \quad \Delta t = 1 \text{ hour} = 3600 \text{ s}$$

$$P = VI = 12(10) = 120 \text{ W} \quad W = P(\Delta t) = 120(3600)$$

$$W = 432 \text{ kJ}$$

1.7 Determine the energy required to move 240 C through 6 V. **CS**

SOLUTION:

$$1.7 \quad Q = 240 \text{ C} \quad V = 6 \text{ V} \quad W = QV = 240(6) \quad \boxed{W = 1440 \text{ J}}$$

- 1.8** Five coulombs of charge pass through the element in Fig. P1.8 from point A to point B . If the energy absorbed by the element is 120 J, determine the voltage across the element.

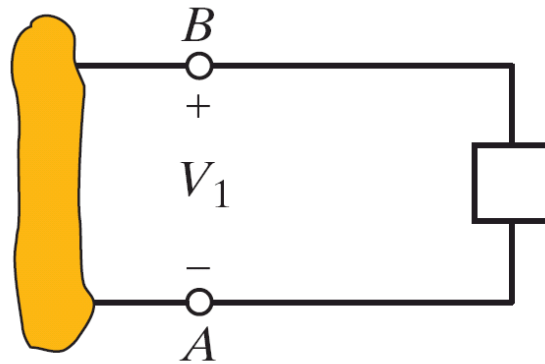
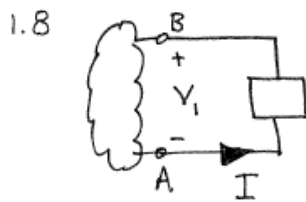


Figure P1.8

SOLUTION:



$$Q = 5\text{ C}$$

$$W = 120\text{ J}$$

For passive sign convention:

$$W = -V_1 Q \quad V_1 = -W/Q$$

$$V_1 = -24\text{ V}$$

1.9 The charge entering an element is shown in Fig. P1.9.

Find the current in the element in the time interval

$0 \leq t \leq 0.5$ s. [Hint: The equation for $q(t)$ is

$q(t) = 1 + (1/0.5)t, t \geq 0.$]

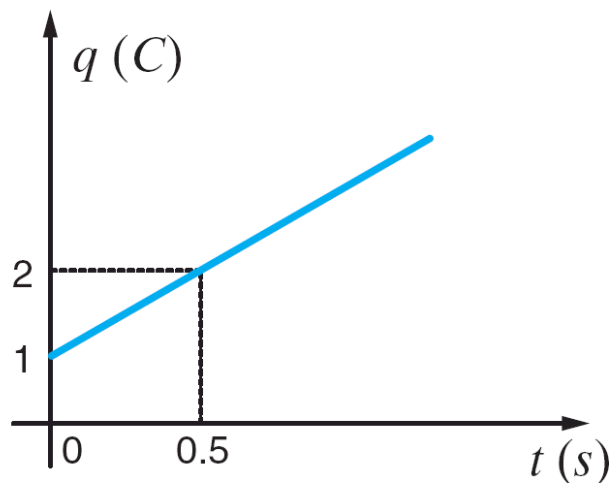


Figure P1.9

SOLUTION:

$$1.9 \quad 0 \leq t \leq 0.5 \text{ s} \quad q(t) = 1 + 2t \quad i(t) = \frac{dq}{dt} = 2 \text{ A}$$

$$\boxed{i(t) = 2 \text{ A}}$$

1.10 Determine the amount of power absorbed or supplied by the element in Fig. P1.10 if

- (a) $V_1 = 9 \text{ V}$ and $I = 2 \text{ A}$.
- (b) $V_1 = 9 \text{ V}$ and $I = -3 \text{ A}$.
- (c) $V_1 = -12 \text{ V}$ and $I = 2 \text{ A}$.
- (d) $V_1 = -12 \text{ V}$ and $I = -3 \text{ A}$.

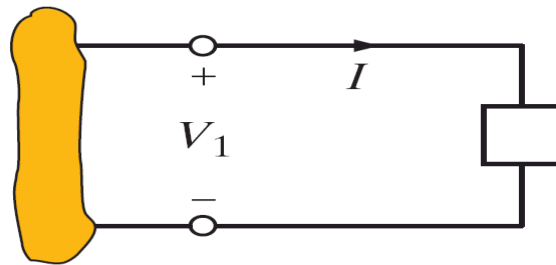


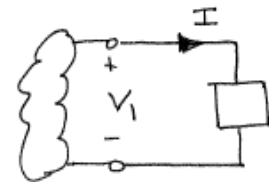
Figure P1.10

SOLUTION:

1.10 a) $V_1 = 9 \text{ V}$, $I = 2 \text{ A}$

For passive sign convention, $P = V_1 I$ is power absorbed.

$$P = V_1 I = 9(2) = 18 \text{ W absorbed}$$



$$P = 18 \text{ W absorbed}$$

b) $V_1 = 9 \text{ V}$, $I = -3 \text{ A}$

$$P = 9(-3) = -27 \text{ W}$$

$$P = 27 \text{ W supplied}$$

c) $V_1 = -12 \text{ V}$, $I = 2 \text{ A}$

$$P = -24 \text{ W}$$

$$P = 24 \text{ W supplied}$$

d) $V_1 = -12 \text{ V}$, $I = -3 \text{ A}$

$$P = +36 \text{ W}$$

$$P = 36 \text{ W absorbed}$$

1.11 Determine the magnitude and direction of the voltage across the elements in Fig. P1.11.

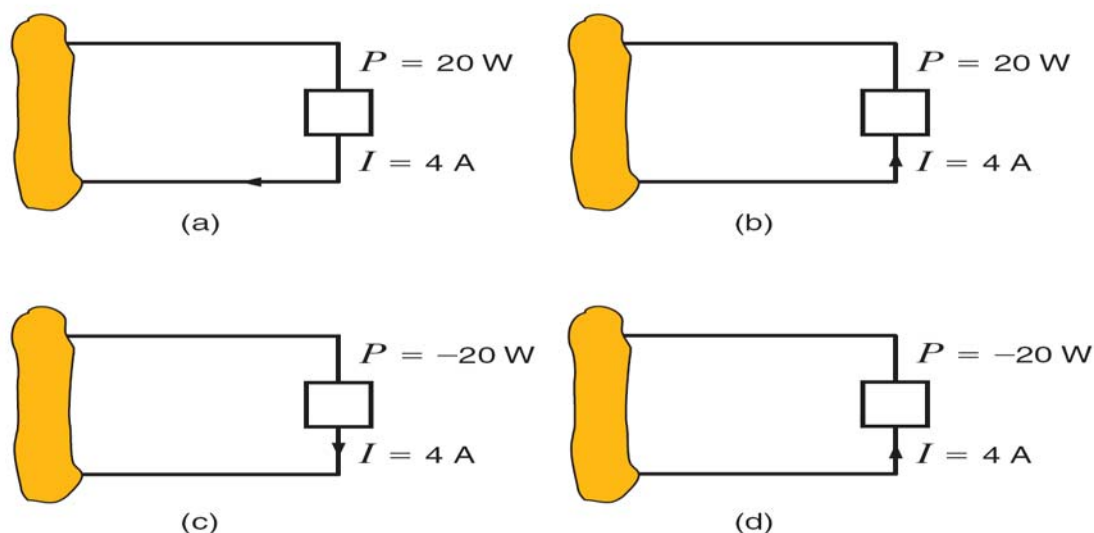
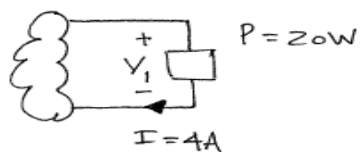


Figure P1.11

SOLUTION:

1.11 a)

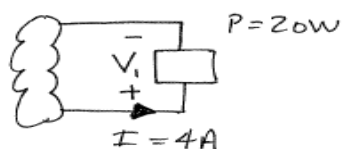


Passive sign convention

$$P = VI \quad V = \frac{P}{I} = \frac{20}{4} = 5V$$

$$\boxed{V_1 = 5V}$$

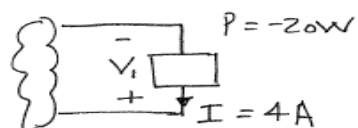
b)



$$P = VI \quad V = \frac{P}{I} = \frac{20}{4} = 5V$$

$$\boxed{V_1 = 5V}$$

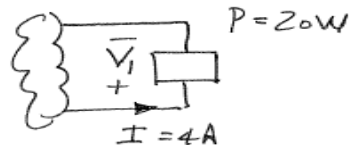
c)



$$V = \frac{P}{I} = -5V \quad \left\{ \begin{array}{l} \text{Element supplies} \\ \text{power!!} \end{array} \right.$$

$$\boxed{V_1 = 5V}$$

d)



same as part b).

$$\boxed{V_1 = 5V}$$

1.12 Determine the missing quantity in the circuits in Fig. P1.12.

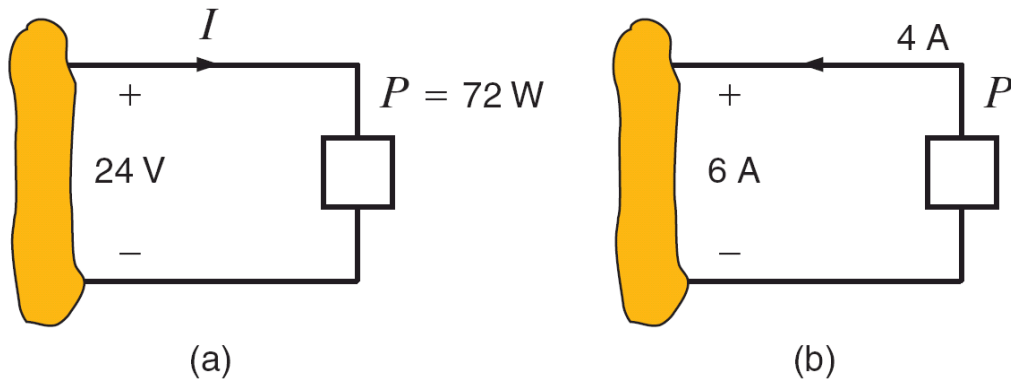
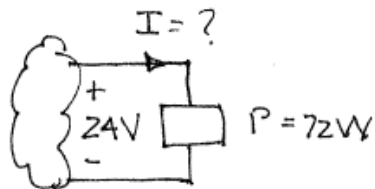


Figure P1.12

SOLUTION:

1.12 a)

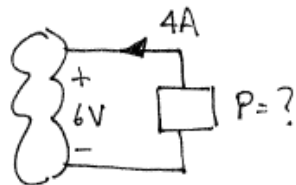


Passive sign convention

$$P = VI \quad I = P/V = 72/24 = 3A$$

$$\boxed{I = 3A}$$

b)



V & I are in the active sign convention

$$P = -VI = -(6)(4) = -24W$$

$$\boxed{P = -24W \text{ or } 24W \text{ supplied}}$$

1.13 Determine the missing quantity in the circuits in Fig. P1.13.

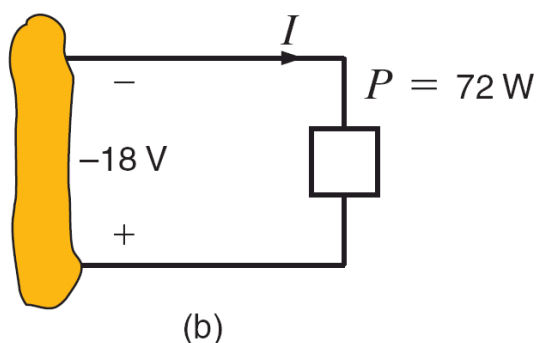
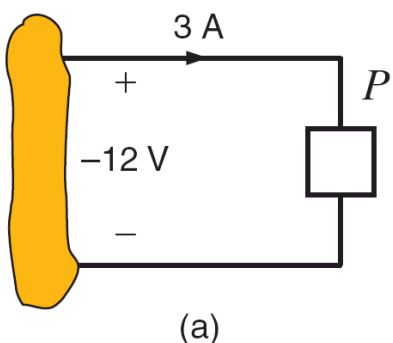
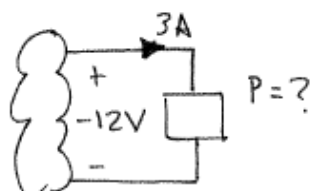


Figure P1.13

SOLUTION:

1.13 a)



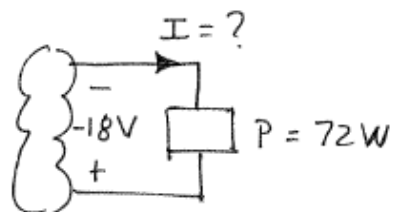
V & I are defined in passive sign convention

$$P = VI = -36W$$

Since P is negative, power is actually supplied

$$P = -36W \text{ or } 36W \text{ supplied}$$

b)



V & I defined in active sign convention

$$P = -VI \quad I = \frac{-P}{V} = \frac{-72}{-18}$$

$$I = 4A$$

1.14 Determine the missing quantity in the circuits in Fig. P1.14. **CS**

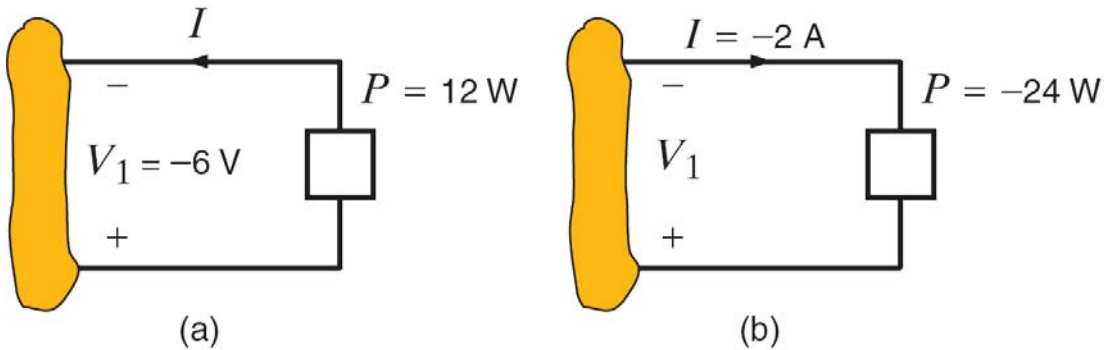
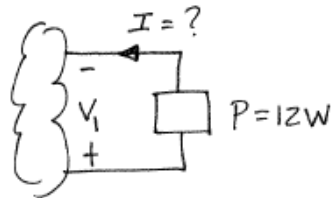


Figure P1.14

SOLUTION:

1.14 a)



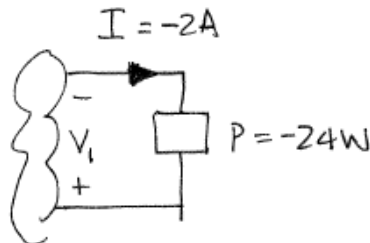
$$V_1 = -6\text{ V}$$

V_1 & I defined as passive sign convention.

$$P = V_1 I \quad I = P/V_1 = \frac{12}{-6} = -2\text{ A}$$

$$\boxed{I = -2\text{ A}}$$

b)



V_1 & I defined as active sign convention

$$P = -V_1 I \quad V_1 = -P/I = \left[\frac{-24}{-2} \right] = -12\text{ V}$$

$$\boxed{V_1 = -12\text{ V}}$$

1.15 Two elements are connected in series, as shown in Fig. P1.15. Element 1 supplies 24 W of power. Is element 2 absorbing or supplying power, and how much? **CS**

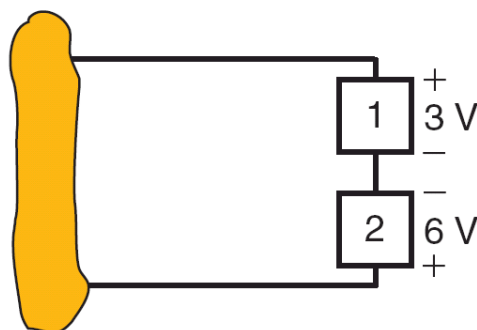
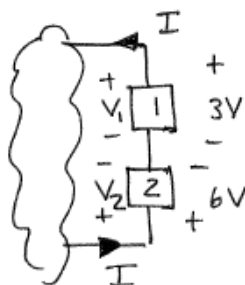


Figure P1.15

SOLUTION:

1.15



$P_1 = 24 \text{ W}$ supplied.

Using active sign convention for element 1

$$P = V_1 I \Rightarrow I = P/V_1 = 8 \text{ A}$$

(Note I is defined for active sign convention for element 1!)

In element 2, V & I are defined as passive sign convention.

$$P_2 = V_2 I = (6)(8) = 48 \text{ W}$$

$$P_2 = 48 \text{ W absorbed}$$

1.16 Determine the power supplied to the elements in Fig. P1.16.

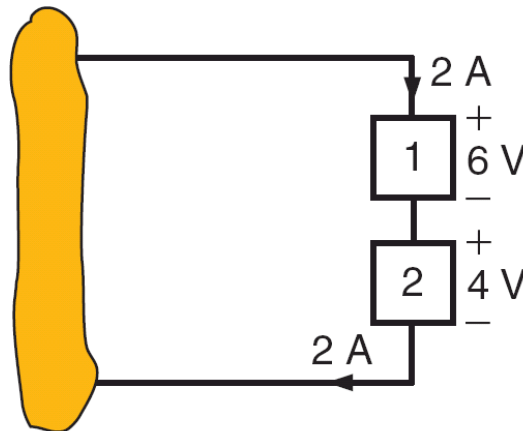
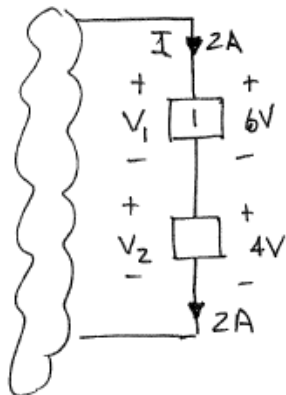


Figure P1.16

SOLUTION:

1.16



For element 1, V_1 and I are defined in passive sign convention. So, power supplied to the element is,

$$P_1 = +V_1 I = (2)(6) = 12 \text{ W}$$

$$\boxed{P_1 = 12 \text{ W}}$$

Element 2 has V_2 & I defined in the passive sign convention also.

$$P_2 = V_2 I = (2)(4) = 8 \text{ W}$$

$$\boxed{P_2 = 8 \text{ W}}$$

1.17 Determine the power supplied to the elements in Fig. P1.17.

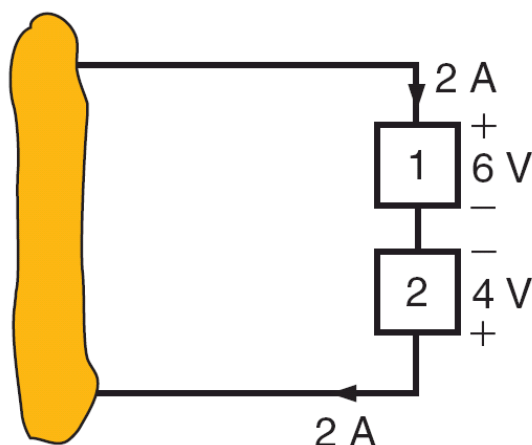
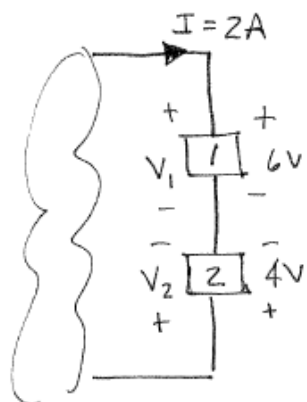


Figure P1.17

SOLUTION:

1.17



For element 1: V_1 & I are defined in the passive sign convention. So, power supplied to element 1 is,

$$P_1 = V_1 I = 6(2) = 12\text{W}$$

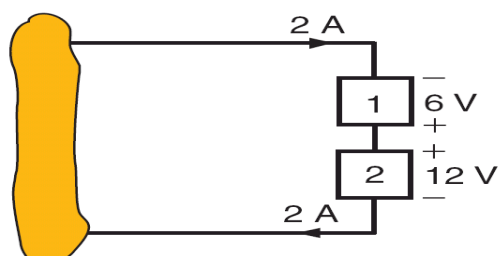
$$\boxed{P_1 = 12\text{W}}$$

For element 2: V_2 & I are defined in the active sign convention. Power supplied to element 2 is

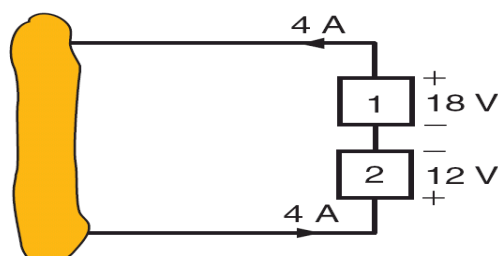
$$P_2 = -V_2 I = -4(2) = -8\text{W}$$

$$\boxed{P_2 = -8\text{W}}$$

1.18 Determine the power supplied to the elements in Fig. P1.18.



(a)

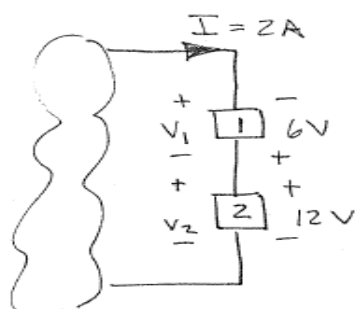


(b)

Figure P1.18

SOLUTION:

1.18 a)



In both elements, voltages and currents are defined in passive sign convention.

For element 1, power supplied is

$$P_1 = V_1 I = (-6)(2) = -12 \text{ W}$$

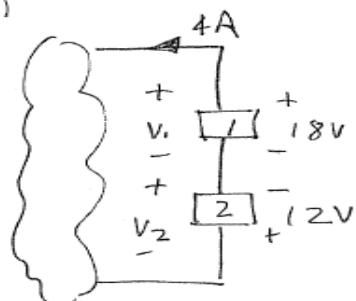
$$\boxed{P_1 = 12 \text{ W}}$$

For element 2,

$$P_2 = V_2 I = 12(2) = 24 \text{ W}$$

$$\boxed{P_2 = 24 \text{ W}} \text{ absorbed}$$

b)



In both elements, voltages and currents are defined in active sign convention.

For element 1: $V_1 = +18 \text{ V}$

$$P_1 = -V_1 I = -(18)(4) = -72 \text{ W}$$

$$\boxed{P_1 = -72 \text{ W}} \text{ absorbed}$$

For element 2: $V_2 = -12 \text{ V}$

$$P_2 = -V_2 I = -(-12)(4) = +48 \text{ W}$$

$$\boxed{P_2 = 48 \text{ W}} \text{ absorbed}$$

- 1.19** (a) In Fig. P1.19(a), $P_1 = 36$ W. Is element 2 absorbing or supplying power, and how much?
- (b) In Fig. P1.19(b), $P_2 = -48$ W. Is element 1 absorbing or supplying power, and how much?

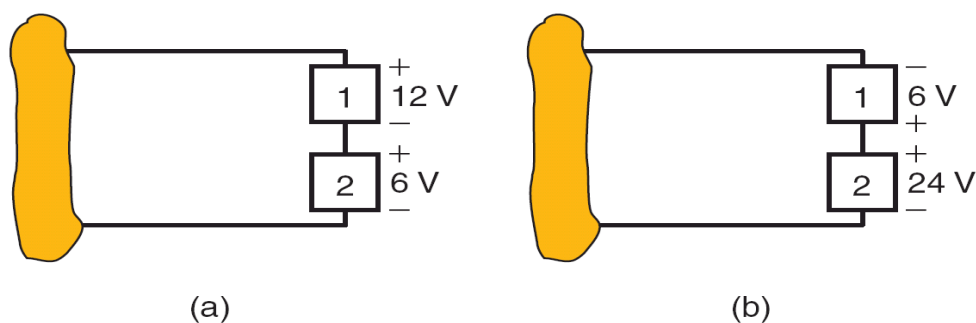
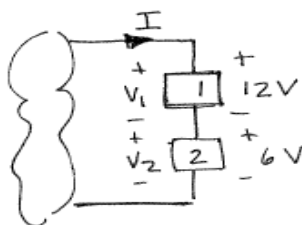


Figure P1.19

SOLUTION:

1.19a) $P_1 = 36$ W



By default, using passive sign convention. Since P_1 is positive, I flows as shown on circuit diagram.

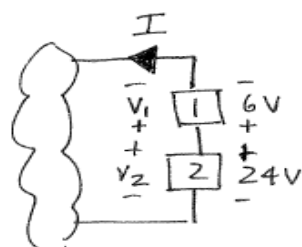
$$P_1 = V_1 I \quad I = P_1 / V_1 = 36 / 12 = 3 \text{ A} \quad I = 3 \text{ A}$$

For element 2, V_2 & I are defined in passive sign convention,

$$P_2 = V_2 I = 6(3) = 18 \text{ W}$$

$P_2 = 18 \text{ W}$
absorbed

b) $P_2 = -48$ W



Again, passive sign convention is the default. Since $P_2 < 0$, element 2 supplies power and I flows as shown.

$$P_2 = -V_2 I = -24 I \quad I = -48 / -24 = 2 \text{ A}$$

For element 1, V_1 & I are defined in passive sign convention. Power absorbed is

$$P_1 = V_1 I = 6(2) = 12 \text{ W}$$

$P_1 = 12 \text{ W}$
absorbed

- 1.20** Two elements are connected in series, as shown in Fig. P1.20. Element 1 supplies 24 W of power. Is element 2 absorbing or supplying power, and how much?

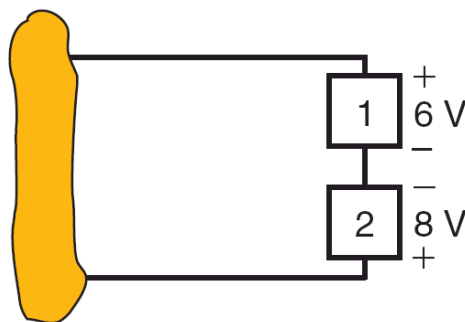
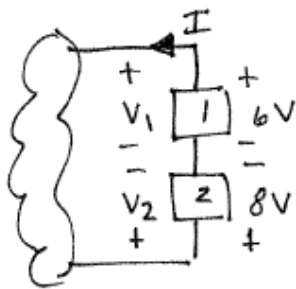


Figure P1.20

SOLUTION:

1.20 Element 1 supplies 24 W.



For element 1 supplying power, I must flow as shown.

$$I = P_1 / V_1 = \frac{24}{6} = 4 \text{ A}$$

In Element 2, V_2 & I are defined as the passive sign convention power absorbed is

$$P_2 = V_2 I = 8(4) = 32 \text{ W}$$

$P_2 = 32 \text{ W}$ absorbed

- 1.21** Two elements are connected in series, as shown in Fig. P1.21. Element 1 supplies 24 W of power. Is element 2 absorbing or supplying power, and how much? **CS**

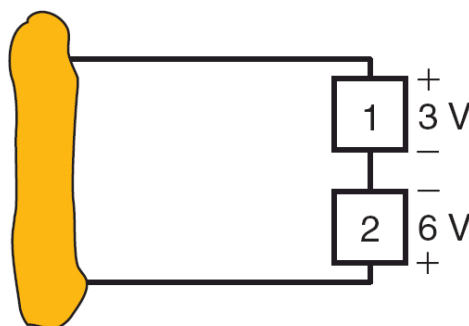
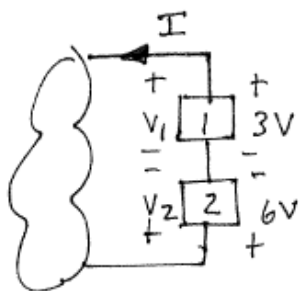


Figure P1.21

SOLUTION:

1.21 Element 1 supplies 24W. Since supplying power, I must flow as shown.



$$I = P_1 / V_1 = 24 / 3 = 8 \text{ A} \quad I = 8 \text{ A}$$

For element 2, V_2 & I obey passive sign convention. Power absorbed is

$$P_2 = V_2 I = 6(8) = 48 \text{ W}$$

$P_2 = 48 \text{ W}$
absorbed

- 1.22** Two elements are connected in series, as shown in Fig. P1.22. Element 1 absorbs 36 W of power. Is element 2 absorbing or supplying power, and how much?

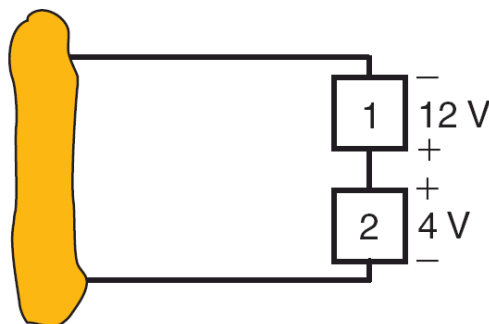
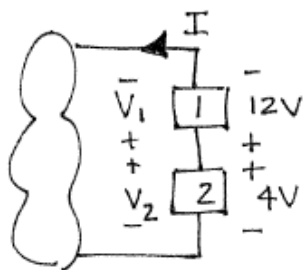


Figure P1.22

SOLUTION:

- 1.22 Element 1 absorbs 36 W. For absorbing power, I must flow as shown in the diagram.



$$P_1 = V_1 I \quad I = P/V_1 = 36/12 \quad I = 3 \text{ A}$$

For element 2, V_2 & I are defined in active sign convention. Power supplied is

$$P_2 = V_2 I = 4(3) = 12 \text{ W}$$

$P_2 = 12 \text{ W}$ supplied

1.23 Determine the power that is absorbed or supplied by the circuit elements in Fig. P1.23.

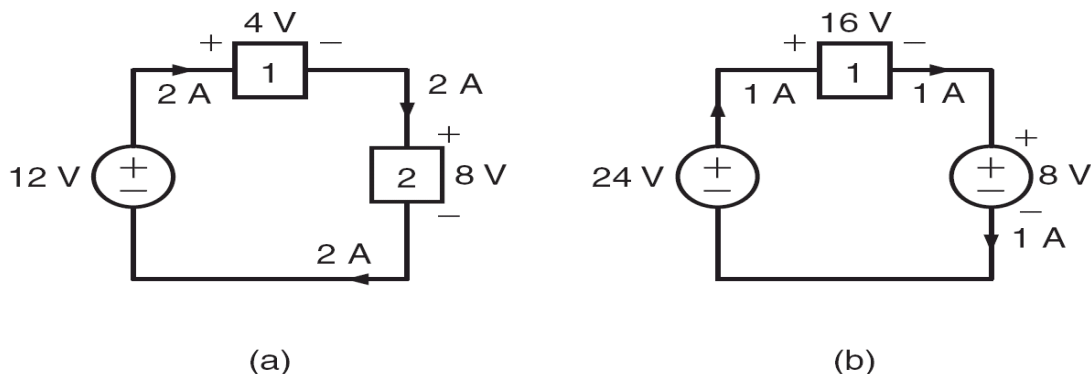
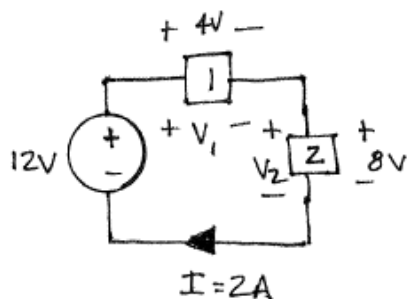


Figure P1.23

SOLUTION:

1.23 a)



Both element 1 and 2 voltages and currents are defined in passive sign convention.

$$P_1 = V_1 I = 4(2) = 8W$$

$$P_1 = 8W \text{ absorbed}$$

$$P_2 = V_2 I = 8(2) = 16W$$

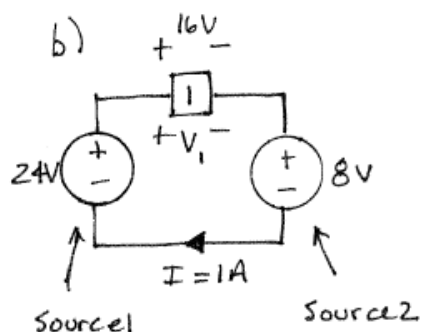
$$P_2 = 16W \text{ absorbed}$$

Voltage source must supply sum $P_1 + P_2$ for power balance

$$P_{12V} = P_1 + P_2 = 24W$$

$$P_{12V} = 24W \text{ supplied}$$

Continued on next page.



V_1 & I in passive sign convention

$$P_1 = V_1 I = 16(1) = 16W \quad \boxed{P_1 = 16W \text{ absorbed}}$$

For source 1, V & I in active sign convention.

$$P_{24V} = 24(1) = 24W \quad \boxed{P_{24V} = 24W \text{ supplied}}$$

For source 2, V & I are defined in passive sign convention.

$$P_{8V} = VI = 8(1) = 8W \quad \boxed{P_{8V} = 8W \text{ absorbed}}$$

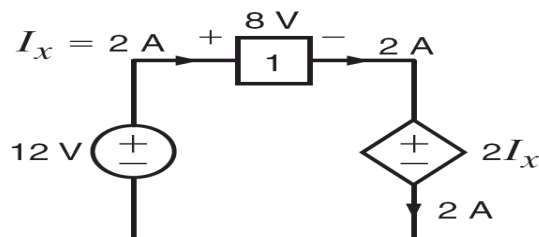
CHECK: for power balance, $P_{\text{supplied}} = P_{\text{absorbed}}$

$$24 = 8 + 16 = 24 \quad \checkmark$$

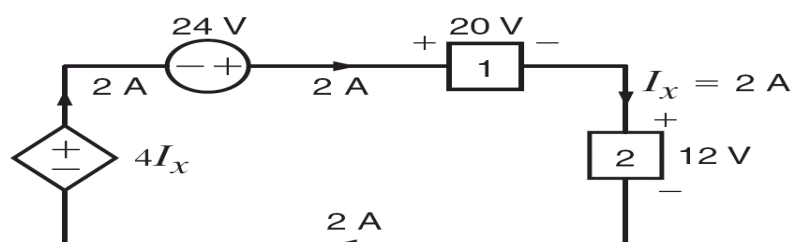
$$\uparrow$$

$$P_{24V} = P_{8V} + P_1$$

1.24 Find the power that is absorbed or supplied by the network elements in Fig. P1.24. **PSV**



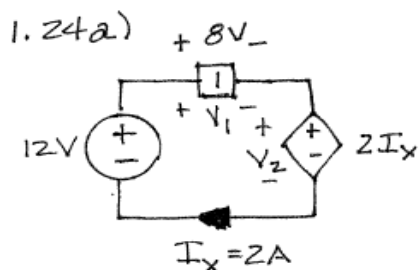
(a)



(b)

Figure P1.24

SOLUTION:



Voltages and currents for element 1 and for the dependent source are defined in the passive sign convention.

$$P_1 = V_1 I_x = 8(2) = 16 \text{ W}$$

$$P_1 = 16 \text{ W absorbed}$$

$$P_2 = V_2 I_x = (2I_x) I_x = 4(2) = 8 \text{ W}$$

$$P_2 = 8 \text{ W absorbed}$$

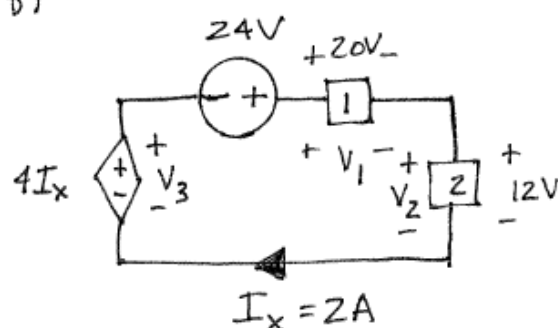
For the dependent source, V & I are defined in the active sign convention.

$$P_{12V} = 12 I_x = 12(2) = 24 \text{ W}$$

$$P_{12V} = 24 \text{ W supplied}$$

Continued on next page.

b)



V & I are defined in the passive sign convention for elements 1 and 2; and in the active sign convention in both the dependent and independent source.

$$P_1 = V_1 I_x = 20(2) = 40\text{W}$$

$$P_2 = V_2 I_x = 12(2) = 24\text{W}$$

$$P_3 = V_3 I_x = 4I_x^2 = 4(2)^2 = 16\text{W}$$

$$P_{24\text{V}} = 24(I_x) = 24(2) = 48\text{W}$$

$$P_1 = 40\text{W absorbed}$$

$$P_2 = 24\text{W absorbed}$$

$$P_3 = 16\text{W supplied}$$

$$P_{24\text{V}} = 48\text{W supplied}$$

1.25 Is the source V_S in the network in Fig. P1.25 absorbing or supplying power, and how much?

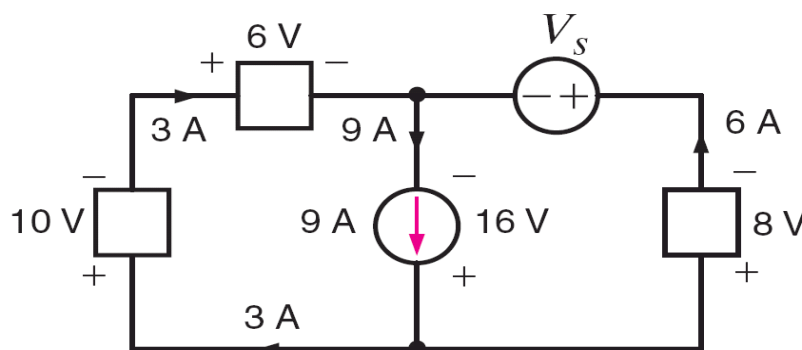
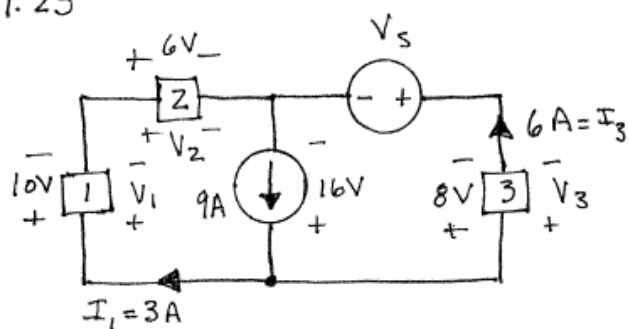


Figure P1.25

SOLUTION:

1.25



V & I for elements 1, 2, 3 defined in passive sign convention.

$$P_1 = V_1 I_1 = 10(3) = 30\text{W absorbed}$$

$$P_2 = V_2 I_2 = 6(3) = 18\text{W absorbed}$$

$$P_3 = V_3 I_3 = 8(6) = 48\text{W absorbed}$$

Current source V & I defined in active sign convention

$$P_{9A} = 9(16) = 144\text{W supplied.}$$

Power balance requires power supplied = power absorbed.
Assume V_S supplies power.

$$P_{9A} + P_{V_S} = P_1 + P_2 + P_3 \Rightarrow 144 + P_{V_S} = 30 + 18 + 48 = 96\text{W}$$

$$P_{V_S} = -48\text{W}$$

Since $P_{V_S} < 0$, V_S absorbs power

$$P_{V_S} = 48\text{W absorbed}$$

1.26 Find V_x in the network in Fig. P1.26.

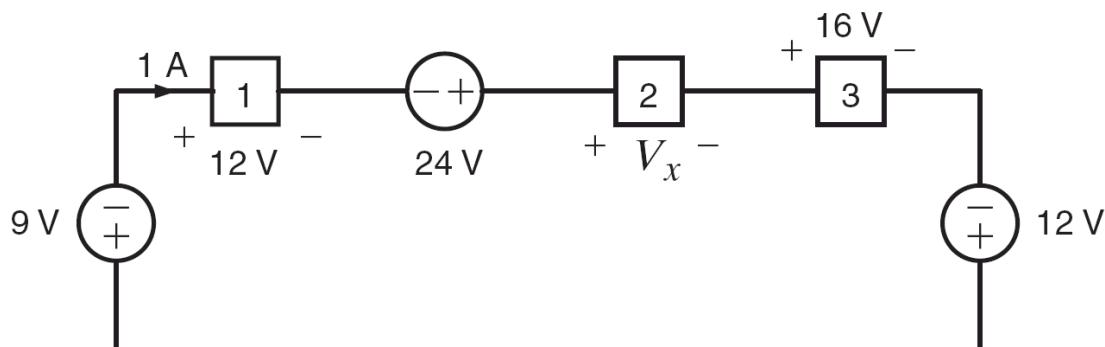
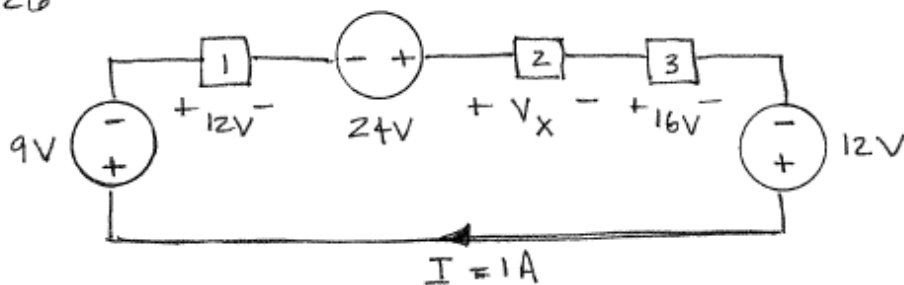


Figure P1.26

SOLUTION:

1.26



Passive sign convention: Elements 1, 2, 3 and 9-V source

Active sign convention: 24-V and 12-V source.

Power balance: $P_{24V} + P_{12V} = P_{9V} + P_1 + P_2 + P_3$

$$24I + 12I = 9I + 12I + V_x I + 16I$$

$$36 = 37 + V_x$$

$$\boxed{V_x = -1V}$$

1.27 Find V_x in the network in Fig. P1.27.

PSV

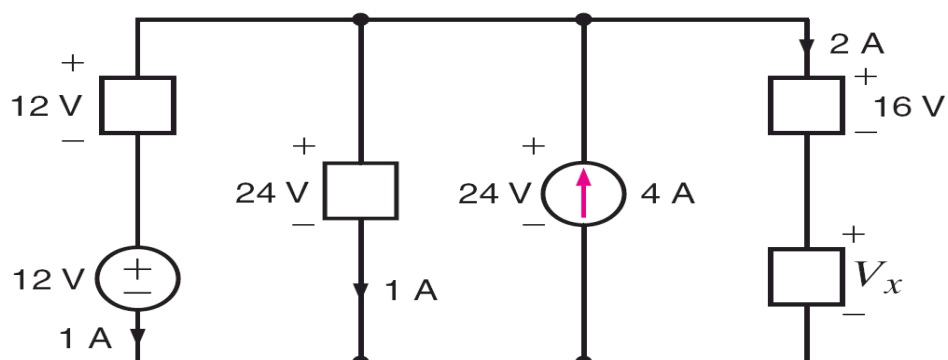
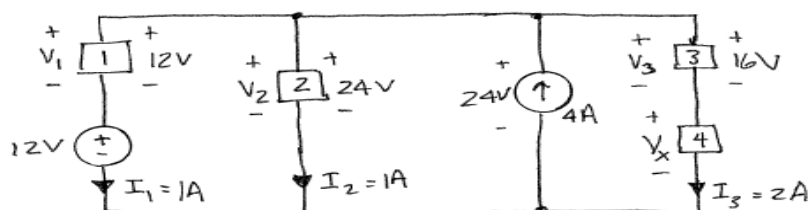


Figure P1.27

SOLUTION:

1.27



Passive sign convention: Elements 1, 2, 3, 4 and 12-V source.

$$P_1 = V_1 I_1 = 12(1) = 12 \text{ W}$$

$$P_1 = 12 \text{ W absorbed}$$

$$P_2 = V_2 I_2 = 24(1) = 24 \text{ W}$$

$$P_2 = 24 \text{ W absorbed}$$

$$P_3 = V_3 I_3 = 16(2) = 32 \text{ W}$$

$$P_3 = 32 \text{ W absorbed}$$

$$P_4 = V_4 I_3 = V_x I_3 = 2V_x$$

$$P_4 = 2V_x \text{ absorbed}$$

$$P_{12V} = 12(I_1) = 12(1) = 12 \text{ W}$$

$$P_{12V} = 12 \text{ W absorbed}$$

$$P_{4A} = 24(4) = 96 \text{ W}$$

$$P_{4A} = 96 \text{ W supplied}$$

Power balance requires $P_{\text{supplied}} = P_{\text{absorbed}}$.

$$P_{4A} = P_{12V} + P_1 + P_2 + P_3 + P_4$$

$$96 = 12 + 12 + 24 + 32 + 2V_x$$

$$\boxed{V_x = 8 \text{ V}}$$

1.28 Compute the power that is absorbed or supplied by the elements in the network in Fig. P1.28. **CS**

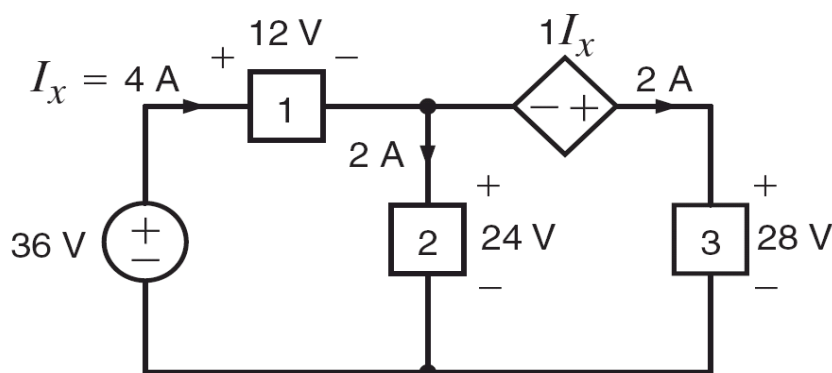
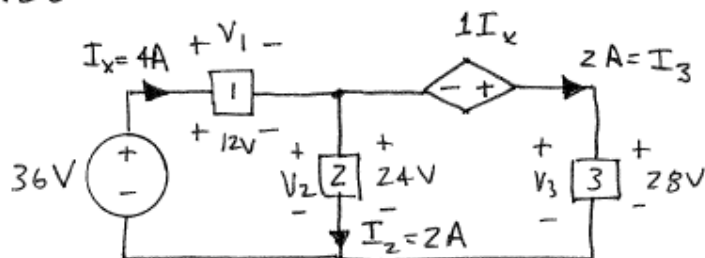


Figure P1.28

SOLUTION:

1.28



Passive sign convention?

Elements 1, 2, 3.

$$P_1 = V_1 I_x = 12(4) = 48 \text{ W}$$

$$P_1 = 48 \text{ W absorbed}$$

$$P_2 = V_2 I_2 = 24(2) = 48 \text{ W}$$

$$P_2 = 48 \text{ W absorbed}$$

$$P_3 = V_3 I_3 = 28(2) = 56 \text{ W}$$

$$P_3 = 56 \text{ W absorbed}$$

$$P_{36V} = 36 I_x = 36(4) = 144 \text{ W}$$

$$P_{36V} = 144 \text{ W supplied}$$

$$P_{D.S.} = (1 I_x) I_3 = 4(2) = 8 \text{ W}$$

$$P_{D.S.} = 8 \text{ W}$$

1.29 Find I_o in the network in Fig. P1.29.

CS

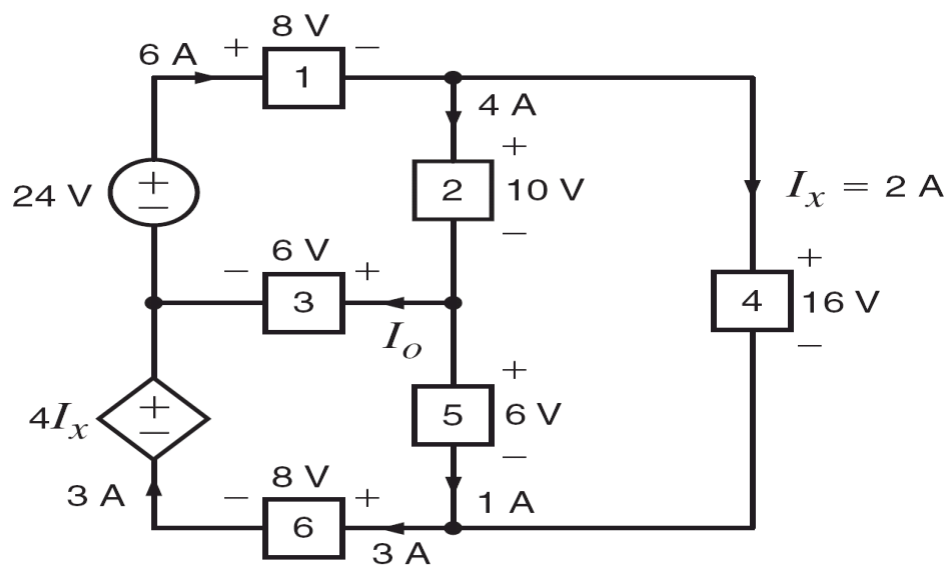
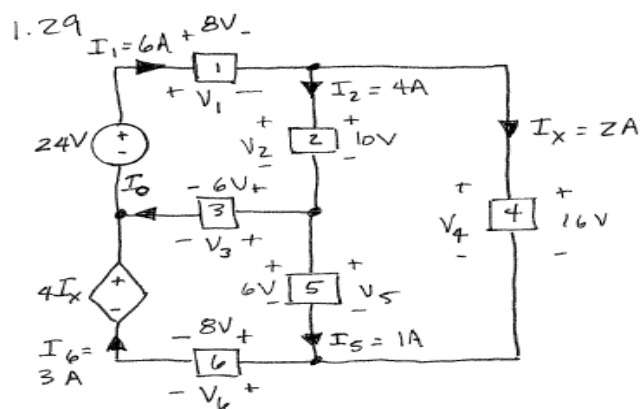


Figure P1.29

SOLUTION:



Passive sign convention:

Elements 1, 2, 3, 4, 5.

$$P_1 = V_1 I_1 = 48 \text{ W absorbed}$$

$$P_2 = V_2 I_2 = 40 \text{ W absorbed}$$

$$P_3 = V_3 I_0 = 6 I_0 \text{ absorbed}$$

$$P_4 = V_4 I_x = 32 \text{ W absorbed}$$

$$P_5 = V_5 I_5 = 6 \text{ W absorbed}$$

$$P_6 = V_6 I_6 = 24 \text{ W absorbed}$$

$$P_{24V} = 24 I_1 = 144 \text{ W supplied}$$

$$P_{4I_x} = 4 I_x I_6 = 24 \text{ W supplied}$$

$$P_{\text{supplied}} = P_{\text{absorbed}}$$

$$P_{24V} + P_{4I_x} = P_1 + P_2 + P_3 + P_4 + P_5 + P_6$$

$$168 = 48 + 40 + 6 I_0 + 32 + 6 + 24$$

$$\boxed{I_0 = 3A}$$

1.30 Find I_x in the circuit in Fig. P1.30.

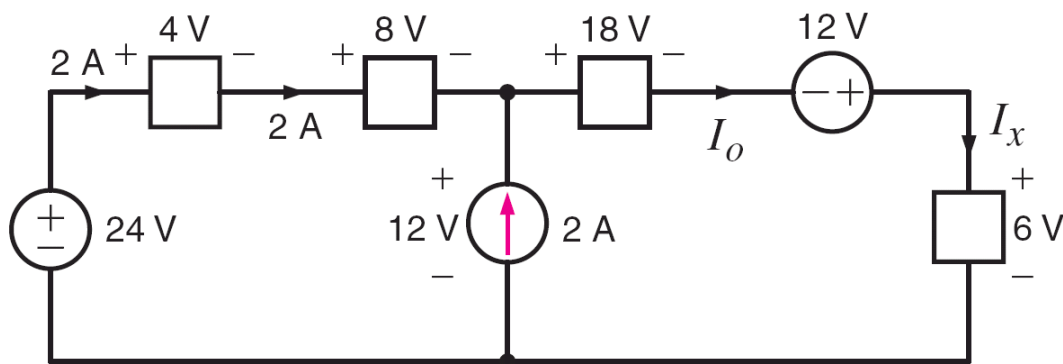
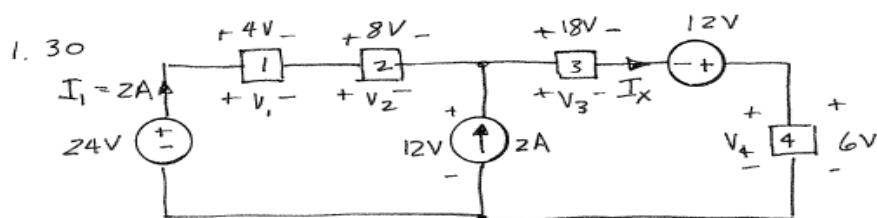


Figure P1.30

SOLUTION:



Passive Sign Convention: Elements 1, 2, 3, 4

$$P_1 = V_1 I_1 = 8 \text{ W absorbed}$$

$$P_2 = V_2 I_1 = 16 \text{ W absorbed}$$

$$P_3 = V_3 I_x = 18 I_x \text{ absorbed}$$

$$P_4 = V_4 I_x = 6 I_x \text{ absorbed}$$

$$P_{24V} = 24 I_1 = 48 \text{ W supplied}$$

$$P_{2A} = 12(2) = 24 \text{ W supplied}$$

$$P_{12V} = 12 I_x \text{ supplied}$$

$$P_{\text{supplied}} = P_{\text{absorbed}}$$

$$P_{12V} + P_{24V} + P_{2A} = P_1 + P_2 + P_3 + P_4$$

$$12 I_x + 48 + 24 = 8 + 16 + 18 I_x + 6 I_x$$

$$48 = 12 I_x$$

$$\boxed{I_x = 4 \text{ A}}$$

1.31 Find V_x in the network in Fig. P1.31.

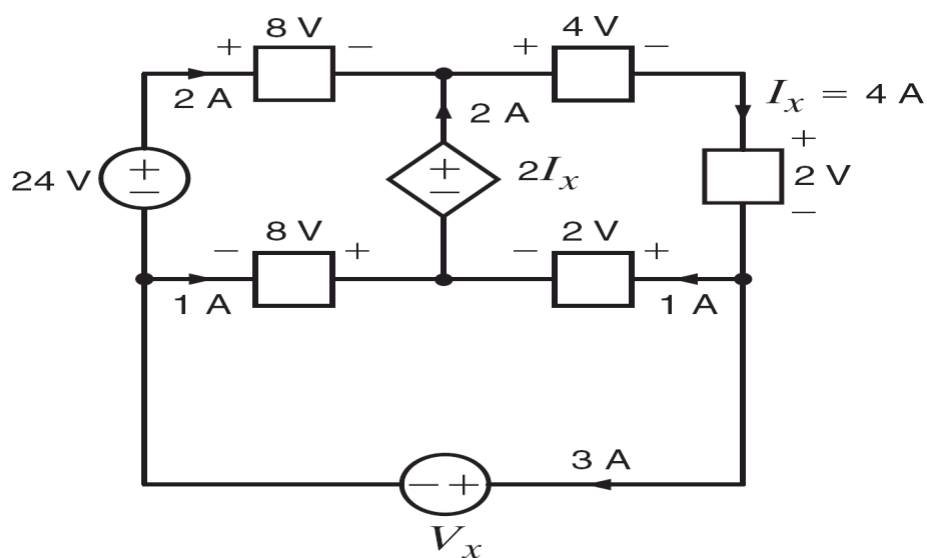
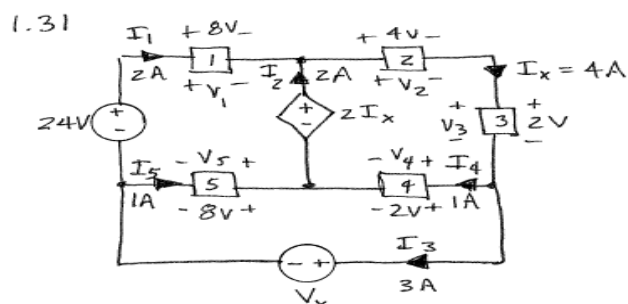


Figure P1.31

SOLUTION:



Passive sign convention:

Elements 1, 2, 3, 4, V_x

$$P_1 = V_1 I_1 = 16 \text{ W absorbed}$$

$$P_2 = V_2 I_2 = 16 \text{ W absorbed}$$

$$P_3 = V_3 I_x = 8 \text{ W absorbed}$$

$$P_4 = V_4 I_4 = 2 \text{ W absorbed}$$

$$P_{V_x} = V_x I_3 = 3V_x \text{ absorbed}$$

$$P_{2+V} = 24 I_1 = 48 \text{ W supplied} \quad P_5 = V_5 I_5 = 8 \text{ W supplied}$$

$$P_{2I_x} = 2 I_x I_2 = 16 \text{ W supplied}$$

$$P_{\text{supplied}} = P_{\text{absorbed}}$$

$$P_{2+V} + P_5 + P_{2I_x} = P_1 + P_2 + P_3 + P_4 + P_{V_x}$$

$$48 + 8 + 16 = 16 + 16 + 8 + 2 + 3V_x$$

$$\boxed{V_x = 10 \text{ V}}$$

1.32 Find I_s such that the power absorbed by the two elements in Fig. P1.32 is 24 W.

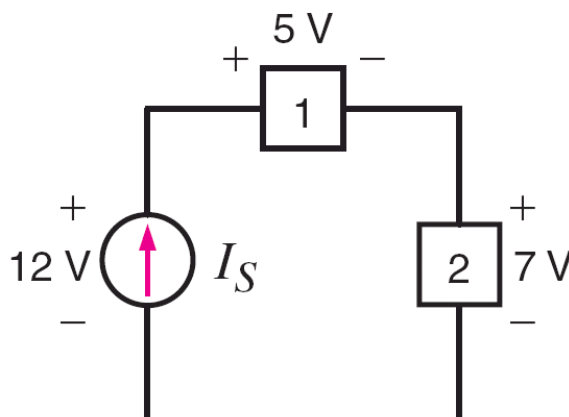
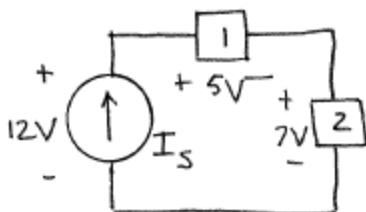


Figure P1.32

SOLUTION:

1.32



$$P_1 + P_2 = P_{I_s} = 24 \text{ W}$$

$$P_{I_s} = 12(I_s) = 24$$

$$I_s = 2 \text{ A}$$