

CHAPTER 16

Quick Quizzes

1. (b). The field exerts a force on the electron, causing it to accelerate in the direction opposite to that of the field. In this process, electrical potential energy is converted into kinetic energy of the electron. Note that the electron moves to a region of higher potential, but because the electron has negative charge this corresponds to a decrease in the potential energy of the electron.
2. Either (a) or (b), but not both. The absence of any electrical charges within a finite distance from the point would produce an electric potential of zero at the point. Thus, (a) could be a true statement. If electrical charges exist at finite distances from the point, then (b) must be true. Both positive and negative charges must be present in the vicinity so their contributions to the electrical potential at the observation point may cancel each other.
3. (a) and (b). Both the electric potential and the magnitude of the electric field decrease as the distance from the charged particle increases.
4. (c). The battery moves negative charge from one plate and puts it on the other. The first plate is left with excess positive charge whose magnitude equals that of the negative charge moved to the other plate.
5. (a) C decreases. (b) Q stays the same. (c) E stays the same
(d) ΔV increases. (e) The energy stored increases.

Because the capacitor is removed from the battery, charges on the plates have nowhere to go. Thus, the charge on the capacitor plates remains the same as the plates are pulled

apart. Because $E = \frac{\sigma}{\epsilon_0} = \frac{Q/A}{\epsilon_0}$, the electric field is constant as the plates are separated.

Because $\Delta V = Ed$ and E does not change, ΔV increases as d increases. Because the same charge is stored at a higher potential difference, the capacitance has decreased. Because $\text{Energy stored} = Q^2/2C$ and Q stays the same while C decreases, the energy stored increases. The extra energy must have been transferred from somewhere, so work was done. This is consistent with the fact that the plates attract one another, so work must be done to pull them apart.

6. (a) C increases. (b) Q increases. (c) E stays the same.
(d) ΔV remains the same. (e) The energy stored increases.

Problem Solutions

- 16.1 (a) The work done is $W = F \cdot s \cos \theta = (qE) \cdot s \cos \theta$, or

$$W = (1.60 \times 10^{-19} \text{ C})(200 \text{ N/C})(2.00 \times 10^{-2} \text{ m}) \cos 0^\circ = \boxed{6.40 \times 10^{-19} \text{ J}}$$

- (b) The change in the electrical potential energy is

$$\Delta PE_e = -W = \boxed{-6.40 \times 10^{-19} \text{ J}}$$

- (c) The change in the electrical potential is

$$\Delta V = \frac{\Delta PE_e}{q} = \frac{-6.40 \times 10^{-19} \text{ J}}{1.60 \times 10^{-19} \text{ C}} = \boxed{-4.00 \text{ V}}$$

- 16.2 (a) We follow the path from (0,0) to (20 cm,0) to (20 cm,50 cm). The work done on the charge by the field is

$$\begin{aligned} W &= W_1 + W_2 = (qE) \cdot s_1 \cos \theta_1 + (qE) \cdot s_2 \cos \theta_2 \\ &= (qE)[(0.20 \text{ m}) \cos 0^\circ + (0.50 \text{ m}) \cos 90^\circ] \\ &= (12 \times 10^{-6} \text{ C})(250 \text{ V/m})[(0.20 \text{ m}) + 0] = 6.0 \times 10^{-4} \text{ J} \end{aligned}$$

$$\text{Thus, } \Delta PE_e = -W = \boxed{-6.0 \times 10^{-4} \text{ J}}$$

$$(b) \Delta V = \frac{\Delta PE_e}{q} = \frac{-6.0 \times 10^{-4} \text{ J}}{12 \times 10^{-6} \text{ C}} = -50 \text{ J/C} = \boxed{-50 \text{ V}}$$

- 16.3 The work done by the agent moving the charge out of the cell is

$$\begin{aligned} W_{\text{input}} &= -W_{\text{field}} = -(-\Delta PE_e) = +q(\Delta V) \\ &= (1.60 \times 10^{-19} \text{ C})\left(+90 \times 10^{-3} \frac{\text{J}}{\text{C}}\right) = \boxed{1.4 \times 10^{-20} \text{ J}} \end{aligned}$$

$$16.4 \quad \Delta KE = W = -\Delta PE_e = q|\Delta V|, \text{ so } q = \frac{\Delta KE}{|\Delta V|} = \frac{7.37 \times 10^{-17} \text{ J}}{115 \text{ J/C}} = \boxed{6.41 \times 10^{-19} \text{ C}}$$

$$16.5 \quad E = \frac{|\Delta V|}{d} = \frac{25\,000 \text{ J/C}}{1.5 \times 10^{-2} \text{ m}} = \boxed{1.7 \times 10^6 \text{ N/C}}$$

16.6 Since potential difference is work per unit charge $\Delta V = \frac{W}{q}$, the work done is

$$W = q(\Delta V) = (3.6 \times 10^5 \text{ C})(+12 \text{ J/C}) = \boxed{4.3 \times 10^6 \text{ J}}$$

16.7 (a) $E = \frac{|\Delta V|}{d} = \frac{600 \text{ J/C}}{5.33 \times 10^{-3} \text{ m}} = \boxed{1.13 \times 10^5 \text{ N/C}}$

(b) $F = |q|E = (1.60 \times 10^{-19} \text{ C})(1.13 \times 10^5 \text{ N/C}) = \boxed{1.80 \times 10^{-14} \text{ N}}$

(c) $W = F \cdot s \cos \theta$

$$= (1.80 \times 10^{-14} \text{ N})[(5.33 - 2.90) \times 10^{-3} \text{ m}] \cos 0^\circ = \boxed{4.38 \times 10^{-17} \text{ J}}$$

16.8 (a) $|\Delta V| = Ed = (5.90 \times 10^3 \text{ V/m})(1.00 \times 10^{-2} \text{ m}) = \boxed{59.0 \text{ V}}$

(b) $\frac{1}{2}m_e v^2 - 0 = \Delta KE = W = -\Delta PE_e = |q(\Delta V)|$,

$$\text{so } v = \sqrt{\frac{2|q(\Delta V)|}{m_e}} = \sqrt{\frac{2(1.60 \times 10^{-19} \text{ C})(59.0 \text{ J/C})}{9.11 \times 10^{-31} \text{ kg}}} = \boxed{4.55 \times 10^6 \text{ m/s}}$$

16.9 (a) Use conservation of energy

$$(KE + PE_s + PE_e)_f = (KE + PE_s + PE_e)_i$$

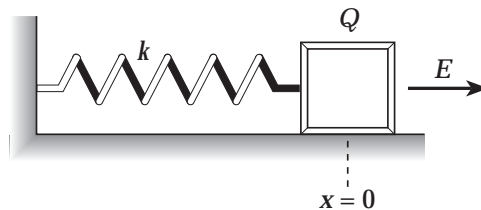
$$\text{or } \Delta(KE) + \Delta(PE_s) + \Delta(PE_e) = 0$$

$\Delta(KE) = 0$ since the block is at rest at both beginning and end.

$$\Delta(PE_s) = \frac{1}{2}kx_{\max}^2 - 0,$$

where x_{\max} is the maximum stretch of the spring.

$$\Delta(PE_e) = -W = -(QE)x_{\max}$$



Thus, $0 + \frac{1}{2}kx_{max}^2 - (QE)x_{max} = 0$, giving

$$x_{max} = \frac{2QE}{k} = \frac{2(50.0 \times 10^{-6} \text{ C})(5.00 \times 10^5 \text{ V/m})}{100 \text{ N/m}} = \boxed{0.500 \text{ m}}$$

(b) At equilibrium, $\Sigma F = -F_s + F_e = 0$, or $-kx_{eq} + QE = 0$.

Therefore,
$$x_{eq} = \frac{QE}{k} = \frac{1}{2}x_{max} = \boxed{0.250 \text{ m}}$$

Note that when the block is released from rest, it overshoots the equilibrium position and oscillates with simple harmonic motion in the electric field.

16.10 Using $\Delta y = v_{yi}t + \frac{1}{2}a_y t^2$ for the full flight gives

$$0 = v_{yi}t + \frac{1}{2}a_y t^2, \text{ or } a_y = \frac{-2v_{yi}}{t}.$$

Then, using $v_{yf}^2 = v_{yi}^2 + 2a_y(\Delta y)$ for the upward part of the flight gives

$$(\Delta y)_{max} = \frac{0 - v_{yi}^2}{2a_y} = \frac{-v_{yi}^2}{2(-2v_{yi}/t)} = \frac{v_{yi}t}{4} = \frac{(20.1 \text{ m/s})(4.10 \text{ s})}{4} = 20.6 \text{ m}$$

From Newton's second law, $a_y = \frac{\Sigma F_y}{m} = \frac{-mg - QE}{m} = -\left(g + \frac{QE}{m}\right)$. Comparing

this to the earlier result shows $a_y = -\left(g + \frac{QE}{m}\right) = \frac{-2v_{yi}}{t}$, so the electric field strength is

$$E = \left(\frac{m}{q}\right)\left[\frac{2v_{yi}}{t} - g\right] = \left(\frac{2.00 \text{ kg}}{5.00 \times 10^{-6} \text{ C}}\right)\left[\frac{2(20.1 \text{ m/s})}{4.10 \text{ s}} - 9.80 \text{ m/s}^2\right] = 1.95 \times 10^3 \text{ N/C}$$

Thus, $(\Delta V)_{max} = (\Delta y_{max})E = (20.6 \text{ m})(1.95 \times 10^3 \text{ N/C}) = 4.02 \times 10^4 \text{ V} = \boxed{40.2 \text{ kV}}$

16.11 (a)
$$V = \frac{k_e Q}{r} = \frac{(8.99 \times 10^9 \text{ N} \cdot \text{m}^2/\text{C}^2)(1.60 \times 10^{-19} \text{ C})}{1.00 \times 10^{-2} \text{ m}} = \boxed{1.44 \times 10^{-7} \text{ V}}$$

$$\begin{aligned}
 \text{(b)} \quad \Delta V = V_2 - V_1 &= \frac{k_e q}{r_2} - \frac{k_e q}{r_1} = (k_e q) \left(\frac{1}{r_2} - \frac{1}{r_1} \right) \\
 &= (8.99 \times 10^9 \text{ N} \cdot \text{m}^2 / \text{C}^2) (1.60 \times 10^{-19} \text{ C}) \left(\frac{1}{0.0200 \text{ m}} - \frac{1}{0.0100 \text{ m}} \right) \\
 &= \boxed{-7.19 \times 10^{-8} \text{ V}}
 \end{aligned}$$

16.12 Calling q_3 the charge at the corner opposite P ,

$$\begin{aligned}
 V = V_1 + V_2 + V_3 &= k_e \left(\frac{q_1}{r_1} + \frac{q_2}{r_2} + \frac{q_3}{\sqrt{r_1^2 + r_2^2}} \right) \\
 &= \left(8.99 \times 10^9 \frac{\text{N} \cdot \text{m}^2}{\text{C}^2} \right) \left(\frac{8.00 \times 10^{-6} \text{ C}}{0.200 \text{ m}} - \frac{8.00 \times 10^{-6} \text{ C}}{0.350 \text{ m}} + \frac{12.0 \times 10^{-6} \text{ C}}{\sqrt{(0.200)^2 + (0.350)^2} \text{ m}} \right) \\
 &= \boxed{4.22 \times 10^5 \text{ V}}
 \end{aligned}$$

16.13 (a) Calling the $2.00 \mu\text{C}$ charge q_3 ,

$$\begin{aligned}
 V = \sum_i \frac{k_e q_i}{r_i} &= k_e \left(\frac{q_1}{r_1} + \frac{q_2}{r_2} + \frac{q_3}{\sqrt{r_1^2 + r_2^2}} \right) \\
 &= \left(8.99 \times 10^9 \frac{\text{N} \cdot \text{m}^2}{\text{C}^2} \right) \left(\frac{8.00 \times 10^{-6} \text{ C}}{0.0600 \text{ m}} + \frac{4.00 \times 10^{-6} \text{ C}}{0.0300 \text{ m}} + \frac{2.00 \times 10^{-6} \text{ C}}{\sqrt{(0.0600)^2 + (0.0300)^2} \text{ m}} \right) \\
 V &= \boxed{2.67 \times 10^6 \text{ V}}
 \end{aligned}$$

(b) Replacing $2.00 \times 10^{-6} \text{ C}$ by $-2.00 \times 10^{-6} \text{ C}$ in part (a) yields

$$V = 2.13 \times 10^6 \text{ V}$$

16.14 $W = q(\Delta V) = q(V_f - V_i)$, and

$V_f = 0$ since the $8.00 \mu\text{C}$ is infinite distance from other charges.

$$V_i = k_e \left(\frac{q_1}{r_1} + \frac{q_2}{r_2} \right) = \left(8.99 \times 10^9 \frac{\text{N} \cdot \text{m}^2}{\text{C}^2} \right) \left(\frac{2.00 \times 10^{-6} \text{ C}}{0.0300 \text{ m}} + \frac{4.00 \times 10^{-6} \text{ C}}{\sqrt{(0.0300)^2 + (0.0600)^2} \text{ m}} \right)$$

$$= 1.135 \times 10^6 \text{ V}$$

Thus, $W = (8.00 \times 10^{-6} \text{ C})(0 - 1.135 \times 10^6 \text{ V}) = \boxed{-9.08 \text{ J}}$

16.15 (a) $V = \sum_i \frac{k_e q_i}{r_i}$

$$= \left(8.99 \times 10^9 \frac{\text{N} \cdot \text{m}^2}{\text{C}^2} \right) \left(\frac{5.00 \times 10^{-9} \text{ C}}{0.175 \text{ m}} - \frac{3.00 \times 10^{-9} \text{ C}}{0.175 \text{ m}} \right) = \boxed{103 \text{ V}}$$

(b) $PE = \frac{k_e q_1 q_2}{r_{12}}$

$$= \left(8.99 \times 10^9 \frac{\text{N} \cdot \text{m}^2}{\text{C}^2} \right) \frac{(5.00 \times 10^{-9} \text{ C})(-3.00 \times 10^{-9} \text{ C})}{0.350 \text{ m}} = \boxed{-3.85 \times 10^{-7} \text{ J}}$$

The negative sign means that positive work must be done to separate the charges (i.e., bring them up to a state of zero potential energy).

16.16 (a) $KE = \frac{1}{2} m_e v^2 = 1.00 \text{ eV}$, so $v = \sqrt{\frac{2(1.00 \text{ eV})}{m_e}}$

$$v = \sqrt{\frac{2(1.00 \text{ eV})}{9.11 \times 10^{-31} \text{ kg}} \left(\frac{1.602 \times 10^{-19} \text{ J}}{1 \text{ eV}} \right)} = \boxed{5.93 \times 10^5 \text{ m/s}}$$

(b) For a proton,

$$v = \sqrt{\frac{2(1.00 \text{ eV})}{m_p}} = \sqrt{\frac{2(1.00 \text{ eV})}{1.67 \times 10^{-27} \text{ kg}} \left(\frac{1.602 \times 10^{-19} \text{ J}}{1 \text{ eV}} \right)} = \boxed{1.38 \times 10^4 \text{ m/s}}$$

- 16.17** The Pythagorean theorem gives the distance from the midpoint of the base to the charge at the apex of the triangle as

$$r_3 = \sqrt{(4.00 \text{ cm})^2 - (1.00 \text{ cm})^2} = \sqrt{15} \text{ cm} = \sqrt{15} \times 10^{-2} \text{ m}.$$

Then, the potential at the midpoint of the base is $V = \sum_i k_e q_i / r_i$, or

$$\begin{aligned} V &= \left(8.99 \times 10^9 \frac{\text{N} \cdot \text{m}^2}{\text{C}^2} \right) \left(\frac{(-7.00 \times 10^{-9} \text{ C})}{0.0100 \text{ m}} + \frac{(-7.00 \times 10^{-9} \text{ C})}{0.0100 \text{ m}} + \frac{(+7.00 \times 10^{-9} \text{ C})}{\sqrt{15} \times 10^{-2} \text{ m}} \right) \\ &= -1.10 \times 10^4 \text{ V} = \boxed{-11.0 \text{ kV}} \end{aligned}$$

- 16.18** Outside the spherical charge distribution, the potential is the same as for a point charge at the center of the sphere,

$$V = k_e Q / r, \text{ where } Q = 1.00 \times 10^{-9} \text{ C}$$

$$\text{Thus, } \Delta(P E_e) = q(\Delta V) = -e k_e Q \left(\frac{1}{r_f} - \frac{1}{r_i} \right),$$

and from conservation of energy $\Delta(K E) = -\Delta(P E_e)$,

$$\text{or } \frac{1}{2} m_e v^2 - 0 = - \left[-e k_e Q \left(\frac{1}{r_f} - \frac{1}{r_i} \right) \right] \text{ This gives } v = \sqrt{\frac{2 k_e Q e \left(\frac{1}{r_f} - \frac{1}{r_i} \right)}{m_e}}, \text{ or}$$

$$v = \sqrt{\frac{2 \left(8.99 \times 10^9 \frac{\text{N} \cdot \text{m}^2}{\text{C}^2} \right) (1.00 \times 10^{-9} \text{ C}) (1.60 \times 10^{-19} \text{ C})}{9.11 \times 10^{-31} \text{ kg}} \left(\frac{1}{0.0200 \text{ m}} - \frac{1}{0.0300 \text{ m}} \right)}$$

$$v = \boxed{7.25 \times 10^6 \text{ m/s}}$$

16.19 From conservation of energy, $(KE + PE_e)_f = (KE + PE_e)_i$, which gives

$$0 + \frac{k_e Q q}{r_f} = \frac{1}{2} m_\alpha v_i^2 + 0 \quad \text{or} \quad r_f = \frac{2k_e Q q}{m_\alpha v_i^2} = \frac{2k_e (79e)(2e)}{m_\alpha v_i^2}$$

$$r_f = \frac{2 \left(8.99 \times 10^9 \frac{\text{N} \cdot \text{m}^2}{\text{C}^2} \right) (158) (1.60 \times 10^{-19} \text{ C})^2}{(6.64 \times 10^{-27} \text{ kg}) (2.00 \times 10^7 \text{ m/s})^2} = \boxed{2.74 \times 10^{-14} \text{ m}}$$

16.20 By definition, the work required to move a charge from one point to any other point on an equipotential surface is zero. From the definition of work, $W = (F \cos \theta) \cdot s$, the work is zero only if $s = 0$ or $F \cos \theta = 0$. The displacement s cannot be assumed to be zero in all cases. Thus, one must require that $F \cos \theta = 0$. The force F is given by $F = qE$ and neither the charge q nor the field strength E can be assumed to be zero in all cases. Therefore, the only way the work can be zero in all cases is if $\cos \theta = 0$. But if $\cos \theta = 0$, then $\theta = 90^\circ$ or the force (and hence the electric field) must be perpendicular to the displacement s (which is tangent to the surface). That is, the field must be perpendicular to the equipotential surface at all points on that surface.

16.21 $V = \frac{k_e Q}{r}$ so

$$r = \frac{k_e Q}{V} = \frac{(8.99 \times 10^9 \text{ N} \cdot \text{m}^2/\text{C}^2)(8.00 \times 10^{-9} \text{ C})}{V} = \frac{71.9 \text{ V} \cdot \text{m}}{V}$$

For $V = 100 \text{ V}$, 50.0 V , and 25.0 V , $\boxed{r = 0.719 \text{ m}, 1.44 \text{ m}, \text{ and } 2.88 \text{ m}}$

The radii are inversely proportional to the potential.

16.22 (a) $Q = C(\Delta V) = (4.00 \times 10^{-6} \text{ F})(12.0 \text{ V}) = 48.0 \times 10^{-6} \text{ C} = \boxed{48.0 \mu\text{C}}$

(b) $Q = C(\Delta V) = (4.00 \times 10^{-6} \text{ F})(1.50 \text{ V}) = 6.00 \times 10^{-6} \text{ C} = \boxed{6.00 \mu\text{C}}$

16.23 (a) $C = \epsilon_0 \frac{A}{d} = \left(8.85 \times 10^{-12} \frac{\text{C}^2}{\text{N} \cdot \text{m}^2} \right) \frac{(1.0 \times 10^6 \text{ m}^2)}{(800 \text{ m})} = \boxed{1.1 \times 10^{-8} \text{ F}}$

$$\begin{aligned}
 \text{(b)} \quad Q_{\max} &= C(\Delta V)_{\max} = C(E_{\max}d) \\
 &= (1.11 \times 10^{-8} \text{ F})(3.0 \times 10^6 \text{ N/C})(800 \text{ m}) = \boxed{27 \text{ C}}
 \end{aligned}$$

16.24 For a parallel plate capacitor, $\Delta V = \frac{Q}{C} = \frac{Q}{\epsilon_0 (A/d)} = \frac{Qd}{\epsilon_0 A}$.

(a) Doubling d while holding Q and A constant doubles ΔV to $\boxed{800 \text{ V}}$.

(b) $Q = \frac{(\epsilon_0 A)\Delta V}{d}$ Thus, doubling d while holding ΔV and A constant will cut the charge in half, or $\boxed{Q_f = Q_i/2}$

16.25 (a) $E = \frac{\Delta V}{d} = \frac{20.0 \text{ V}}{1.80 \times 10^{-3} \text{ m}} = 1.11 \times 10^4 \text{ V/m} = \boxed{11.1 \text{ kV/m}}$ directed toward the negative plate

$$\begin{aligned}
 \text{(b)} \quad C &= \frac{\epsilon_0 A}{d} = \frac{(8.85 \times 10^{-12} \text{ C}^2/\text{N} \cdot \text{m}^2)(7.60 \times 10^{-4} \text{ m}^2)}{1.80 \times 10^{-3} \text{ m}} \\
 &= 3.74 \times 10^{-12} \text{ F} = \boxed{3.74 \text{ pF}}
 \end{aligned}$$

(c) $Q = C(\Delta V) = (3.74 \times 10^{-12} \text{ F})(20.0 \text{ V}) = 7.47 \times 10^{-11} \text{ C} = \boxed{74.7 \text{ pC}}$ on one plate and $\boxed{-74.7 \text{ pC}}$ on the other plate.

16.26 $C = \frac{\epsilon_0 A}{d}$, so $d = \frac{\epsilon_0 A}{C} = \frac{(8.85 \times 10^{-12} \text{ C}^2/\text{N} \cdot \text{m}^2)(21.0 \times 10^{-12} \text{ m}^2)}{60.0 \times 10^{-15} \text{ F}} = 3.10 \times 10^{-9} \text{ m}$

$$d = (3.10 \times 10^{-9} \text{ m}) \left(\frac{1 \text{ \AA}}{10^{-10} \text{ m}} \right) = \boxed{31.0 \text{ \AA}}$$

16.27 $C = \frac{\epsilon_0 A}{d}$, so $A = \frac{C \cdot d}{\epsilon_0} = \frac{(2.00 \times 10^{-12} \text{ F})(0.100 \times 10^{-3} \text{ m})}{8.85 \times 10^{-12} \text{ C}^2/\text{N} \cdot \text{m}^2} = \boxed{2.26 \times 10^{-5} \text{ m}^2}$

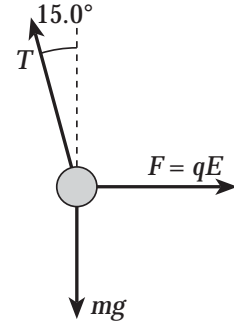
$$16.28 \quad \Sigma F_y = 0 \Rightarrow T \cos 15.0^\circ = mg \quad \text{or} \quad T = \frac{mg}{\cos 15.0^\circ}$$

$$\Sigma F_x = 0 \Rightarrow qE = T \sin 15.0^\circ = mg \tan 15.0^\circ$$

$$\text{or} \quad E = \frac{mg \tan 15.0^\circ}{q}$$

$$\Delta V = Ed = \frac{mgd \tan 15.0^\circ}{q}$$

$$\Delta V = \frac{(350 \times 10^{-6} \text{ kg})(9.80 \text{ m/s}^2)(0.0400 \text{ m}) \tan 15.0^\circ}{30.0 \times 10^{-9} \text{ C}} = 1.23 \times 10^3 \text{ V} = \boxed{1.23 \text{ kV}}$$



$$16.29 \quad (a) \quad \text{For series connection, } \frac{1}{C_{eq}} = \frac{1}{C_1} + \frac{1}{C_2} \Rightarrow C_{eq} = \frac{C_1 C_2}{C_1 + C_2}$$

$$Q = C_{eq}(\Delta V) = \left(\frac{C_1 C_2}{C_1 + C_2} \right) \Delta V$$

$$= \left[\frac{(0.050 \mu\text{F})(0.100 \mu\text{F})}{0.050 \mu\text{F} + 0.100 \mu\text{F}} \right] (400 \text{ V}) = \boxed{13.3 \mu\text{C on each}}$$

$$(b) \quad Q_1 = C_1(\Delta V) = (0.050 \mu\text{F})(400 \text{ V}) = \boxed{20.0 \mu\text{C}}$$

$$Q_2 = C_2(\Delta V) = (0.100 \mu\text{F})(400 \text{ V}) = \boxed{40.0 \mu\text{C}}$$

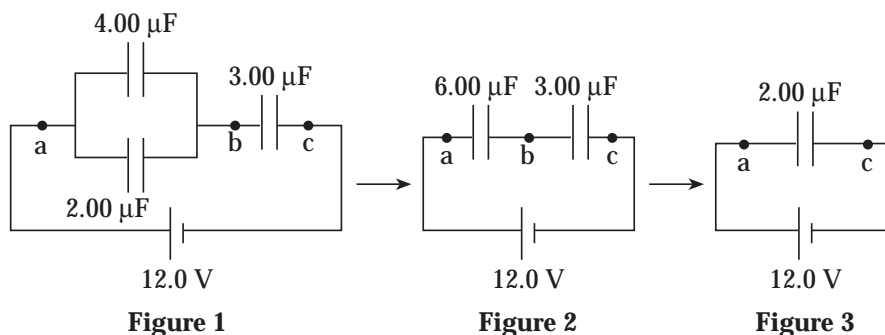
$$16.30 \quad (a) \quad \text{For parallel connection,}$$

$$C_{eq} = C_1 + C_2 + C_3 = (5.00 + 4.00 + 9.00) \mu\text{F} = \boxed{18.0 \mu\text{F}}$$

$$(b) \quad \text{For series connection, } \frac{1}{C_{eq}} = \frac{1}{C_1} + \frac{1}{C_2} + \frac{1}{C_3}$$

$$\frac{1}{C_{eq}} = \frac{1}{5.00 \mu\text{F}} + \frac{1}{4.00 \mu\text{F}} + \frac{1}{9.00 \mu\text{F}}, \text{ giving } C_{eq} = \boxed{1.78 \mu\text{F}}$$

- 16.31 (a) Using the rules for combining capacitors in series and in parallel, the circuit is reduced in steps as shown below. The equivalent capacitor is shown to be a $2.00 \mu\text{F}$ capacitor.



(b) From Figure 3: $Q_{ac} = C_{ac}(\Delta V)_{ac} = (2.00 \mu\text{F})(12.0 \text{ V}) = 24.0 \mu\text{C}$

From Figure 2: $Q_{ab} = Q_{bc} = Q_{ac} = 24.0 \mu\text{C}$

Thus, the charge on the $3.00 \mu\text{F}$ capacitor is $Q_3 = 24.0 \mu\text{C}$

Continuing to use Figure 2, $(\Delta V)_{ab} = \frac{Q_{ab}}{C_{ab}} = \frac{24.0 \mu\text{C}}{6.00 \mu\text{F}} = 4.00 \text{ V}$,

and $(\Delta V)_3 = (\Delta V)_{bc} = \frac{Q_{bc}}{C_{bc}} = \frac{24.0 \mu\text{C}}{3.00 \mu\text{F}} = 8.00 \text{ V}$

From Figure 1, $(\Delta V)_4 = (\Delta V)_2 = (\Delta V)_{ab} = 4.00 \text{ V}$

and $Q_4 = C_4(\Delta V)_4 = (4.00 \mu\text{F})(4.00 \text{ V}) = 16.0 \mu\text{C}$

$Q_2 = C_2(\Delta V)_2 = (2.00 \mu\text{F})(4.00 \text{ V}) = 8.00 \mu\text{C}$

16.32 $C_{\text{parallel}} = C_1 + C_2 = 9.00 \text{ pF} \Rightarrow C_1 = 9.00 \text{ pF} - C_2$ (1)

$$\frac{1}{C_{\text{series}}} = \frac{1}{C_1} + \frac{1}{C_2} \Rightarrow C_{\text{series}} = \frac{C_1 C_2}{C_1 + C_2} = 2.00 \text{ pF}$$

Thus, using equation (1), $C_{\text{series}} = \frac{(9.00 \text{ pF} - C_2)C_2}{(9.00 \text{ pF} - C_2) + C_2} = 2.00 \text{ pF}$ which reduces to

$$C_2^2 - (9.00 \text{ pF})C_2 + 18.0 (\text{pF})^2 = 0, \text{ or } (C_2 - 6.00 \text{ pF})(C_2 - 3.00 \text{ pF}) = 0$$

Therefore, either $C_2 = 6.00 \text{ pF}$ and, from equation (1), $C_1 = 3.00 \text{ pF}$

or $C_2 = 3.00 \text{ pF}$ and $C_1 = 6.00 \text{ pF}$.

We conclude that the two capacitances are 3.00 pF and 6.00 pF .

16.33

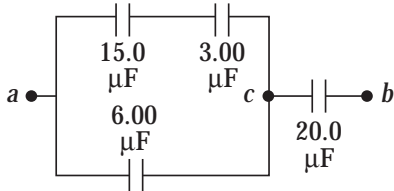


Figure 1

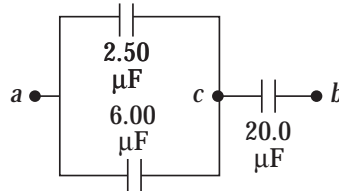


Figure 2

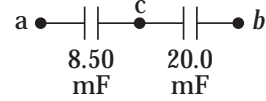


Figure 3

(a) The equivalent capacitance of the upper branch between points a and c in Figure 1 is

$$C_s = \frac{(15.0 \mu\text{F})(3.00 \mu\text{F})}{15.0 \mu\text{F} + 3.00 \mu\text{F}} = 2.50 \mu\text{F}$$

Then, using Figure 2, the total capacitance between points a and c is

$$C_{ac} = 2.50 \mu\text{F} + 6.00 \mu\text{F} = 8.50 \mu\text{F}.$$

From Figure 3, the total capacitance is

$$C_{eq} = \left(\frac{1}{8.50 \mu\text{F}} + \frac{1}{20.0 \mu\text{F}} \right)^{-1} = \boxed{5.96 \mu\text{F}}$$

(b) $Q_{ab} = Q_{ac} = Q_{cb} = (\Delta V)_{ab} C_{eq}$

$$= (15.0 \text{ V})(5.96 \mu\text{F}) = 89.5 \mu\text{C}$$

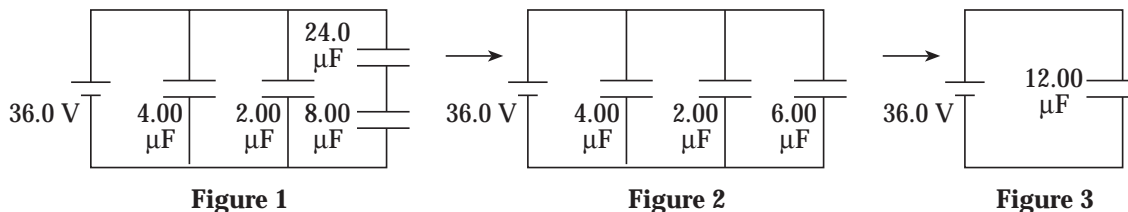
Thus, the charge on the $20.0 \mu\text{F}$ is $Q_{20} = Q_{cb} = \boxed{89.5 \mu\text{C}}$.

$$(\Delta V)_{ac} = (\Delta V)_{ab} - (\Delta V)_{bc} = 15.0 \text{ V} - \left(\frac{89.5 \mu\text{C}}{20.0 \mu\text{F}} \right) = 10.53 \text{ V}$$

Then, $Q_6 = (\Delta V)_{ac} (6.00 \mu\text{F}) = \boxed{63.2 \mu\text{C}}$ and

$$Q_{15} = Q_3 = (\Delta V)_{ac} (2.50 \mu\text{F}) = \boxed{26.3 \mu\text{C}}$$

- 16.34 (a) The combination reduces to an equivalent capacitance of $12.0 \mu\text{F}$ in stages as shown below.



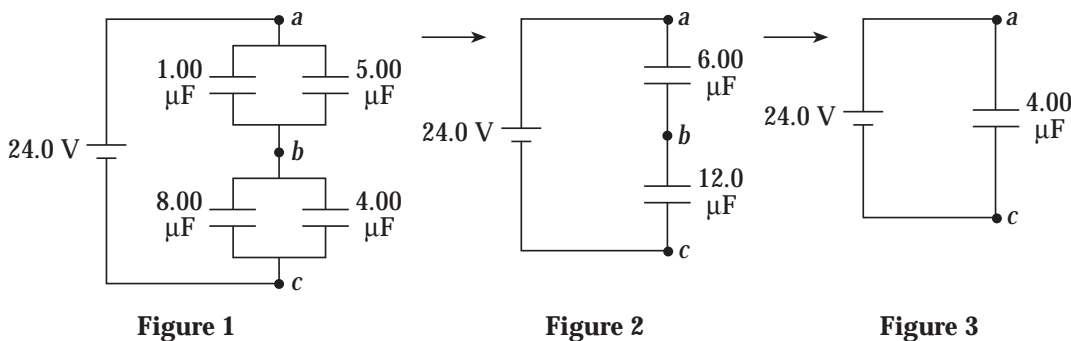
(b) From Figure 2, $Q_4 = (4.00 \mu\text{F})(36.0 \text{ V}) = 144 \mu\text{C}$,

$$Q_2 = (2.00 \mu\text{F})(36.0 \text{ V}) = 72.0 \mu\text{C},$$

and $Q_6 = (6.00 \mu\text{F})(36.0 \text{ V}) = 216 \mu\text{C}$

Then, from Figure 1, $Q_{24} = Q_8 = Q_6 = 216 \mu\text{C}$

16.35



The circuit may be reduced in steps as shown above.

Using the Figure 3, $Q_{ac} = (4.00 \mu\text{F})(24.0 \text{ V}) = 96.0 \mu\text{C}$.

Then, in Figure 2, $(\Delta V)_{ab} = \frac{Q_{ac}}{C_{ab}} = \frac{96.0 \mu\text{C}}{6.00 \mu\text{F}} = 16.0 \text{ V}$,

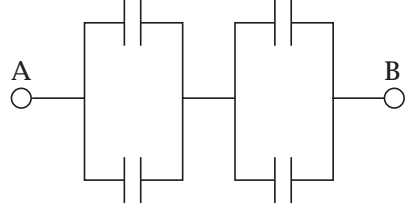
and $(\Delta V)_{bc} = (\Delta V)_{ac} - (\Delta V)_{ab} = 24.0 \text{ V} - 16.0 \text{ V} = 8.00 \text{ V}$.

Finally, using Figure 1, $Q_1 = C_1(\Delta V)_{ab} = (1.00 \mu\text{F})(16.0 \text{ V}) = 16.0 \mu\text{C}$,

$$Q_5 = (5.00 \mu\text{F})(\Delta V)_{ab} = 80.0 \mu\text{C}, \quad Q_8 = (8.00 \mu\text{F})(\Delta V)_{bc} = 64.0 \mu\text{C},$$

and $Q_4 = (4.00 \mu\text{F})(\Delta V)_{bc} = 32.0 \mu\text{C}$

- 16.36** The technician combines two of the capacitors in parallel making a capacitor of capacitance $200\ \mu\text{F}$. Then she does it again with two more of the capacitors. Then the two resulting $200\ \mu\text{F}$ capacitors are connected in series to yield an equivalent capacitance of $100\ \mu\text{F}$. Because of the symmetry of the solution, every capacitor in the combination has the same voltage across it,



$$\Delta V = (\Delta V)_{ab} / 2 = (90.0\ \text{V}) / 2 = \boxed{45.0\ \text{V}}$$

- 16.37** (a) From $Q = C(\Delta V)$, $Q_{25} = (25.0\ \mu\text{F})(50.0\ \text{V}) = \boxed{1.25 \times 10^3\ \mu\text{C}}$,

and $Q_{40} = (40.0\ \mu\text{F})(50.0\ \text{V}) = \boxed{2.00 \times 10^3\ \mu\text{C}}$

- (b) When the two capacitors are connected in parallel, the equivalent capacitance is $C_{eq} = C_1 + C_2 = 25.0\ \mu\text{F} + 40.0\ \mu\text{F} = 65.0\ \mu\text{F}$.

Since the negative plate of one was connected to the positive plate of the other, the total charge stored in the parallel combination is

$$Q = Q_{40} - Q_{25} = 2.00 \times 10^3\ \mu\text{C} - 1.25 \times 10^3\ \mu\text{C} = 750\ \mu\text{C}.$$

The potential difference across each capacitor of the parallel combination is

$$\Delta V = \frac{Q}{C_{eq}} = \frac{750\ \mu\text{C}}{65.0\ \mu\text{F}} = \boxed{11.5\ \text{V}}$$

and the final charge stored in each capacitor is

$$Q'_{25} = C_1(\Delta V) = (25.0\ \mu\text{F})(11.5\ \text{V}) = \boxed{288\ \mu\text{C}}$$

and $Q'_{40} = Q - Q'_{25} = 750\ \mu\text{C} - 288\ \mu\text{C} = \boxed{462\ \mu\text{C}}.$

16.38 From $Q = C(\Delta V)$, the initial charge of each capacitor is

$$Q_{10} = (10.0 \mu\text{F})(12.0 \text{ V}) = 120 \mu\text{C} \text{ and } Q_x = C_x(0) = 0$$

After the capacitors are connected in parallel, the potential difference across each is $\Delta V' = 3.00 \text{ V}$, and the total charge of $Q = Q_{10} + Q_x = 120 \mu\text{C}$ is divided between the two capacitors as

$$Q'_{10} = (10.0 \mu\text{F})(3.00 \text{ V}) = 30.0 \mu\text{C} \text{ and}$$

$$Q'_x = Q - Q'_{10} = 120 \mu\text{C} - 30.0 \mu\text{C} = 90.0 \mu\text{C}$$

$$\text{Thus, } C_x = \frac{Q'_x}{\Delta V'} = \frac{90.0 \mu\text{C}}{3.00 \text{ V}} = \boxed{30.0 \mu\text{F}}$$

16.39 From $Q = C(\Delta V)$, the initial charge of each capacitor is

$$Q_1 = (1.00 \mu\text{F})(10.0 \text{ V}) = 10.0 \mu\text{C} \text{ and } Q_2 = (2.00 \mu\text{F})(0) = 0$$

After the capacitors are connected in parallel, the potential difference across one is the same as that across the other. This gives

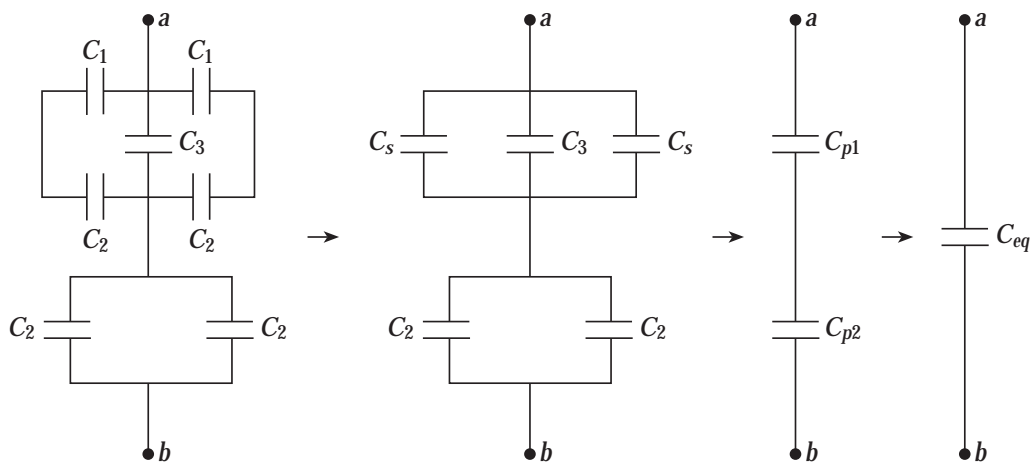
$$\Delta V = \frac{Q'_1}{1.00 \mu\text{F}} = \frac{Q'_2}{2.00 \mu\text{F}} \text{ or } Q'_2 = 2Q'_1. \quad (1)$$

From conservation of charge, $Q'_1 + Q'_2 = Q_1 + Q_2 = 10.0 \mu\text{C}$. Then, substituting from equation (1), this becomes

$$Q'_1 + 2Q'_1 = 10.0 \mu\text{C}, \text{ giving } Q'_1 = \boxed{\frac{10}{3} \mu\text{C}}$$

$$\text{Finally, from equation (1), } Q'_2 = \boxed{\frac{20}{3} \mu\text{C}}$$

16.40 The original circuit reduces to a single equivalent capacitor in the steps shown below.



$$C_s = \left(\frac{1}{C_1} + \frac{1}{C_2} \right)^{-1} = \left(\frac{1}{5.00 \mu\text{F}} + \frac{1}{10.0 \mu\text{F}} \right)^{-1} = 3.33 \mu\text{F}$$

$$C_{p1} = C_s + C_3 + C_s = 2(3.33 \mu\text{F}) + 2.00 \mu\text{F} = 8.66 \mu\text{F}$$

$$C_{p2} = C_2 + C_2 = 2(10.0 \mu\text{F}) = 20.0 \mu\text{F}$$

$$C_{eq} = \left(\frac{1}{C_{p1}} + \frac{1}{C_{p2}} \right)^{-1} = \left(\frac{1}{8.66 \mu\text{F}} + \frac{1}{20.0 \mu\text{F}} \right)^{-1} = \boxed{6.04 \mu\text{F}}$$

16.41 Refer to the solution of Problem 16.40 given above. The total charge stored between points a and b is

$$Q_{eq} = C_{eq}(\Delta V)_{ab} = (6.04 \mu\text{F})(60.0 \text{ V}) = 362 \mu\text{C}$$

Then, looking at the third figure, observe that the charges of the series capacitors of that figure are $Q_{p1} = Q_{p2} = Q_{eq} = 362 \mu\text{C}$. Thus, the potential difference across the upper parallel combination shown in the second figure is

$$(\Delta V)_{p1} = \frac{Q_{p1}}{C_{p1}} = \frac{362 \mu\text{C}}{8.66 \mu\text{F}} = 41.8 \text{ V}$$

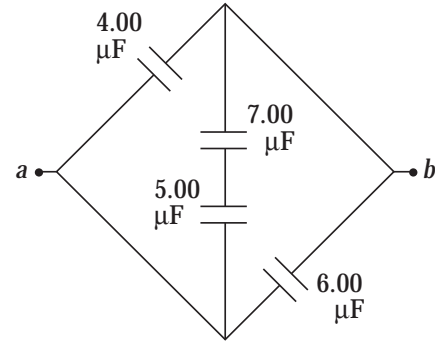
Finally, the charge on C_3 is

$$Q_3 = C_3(\Delta V)_{p1} = (2.00 \mu\text{F})(41.8 \text{ V}) = \boxed{83.6 \mu\text{C}}$$

- 16.42** Recognize that the $7.00\ \mu\text{F}$ and the $5.00\ \mu\text{F}$ of the center branch are connected in series. The total capacitance of that branch is

$$C_s = \left(\frac{1}{5.00} + \frac{1}{7.00} \right)^{-1} = 2.92\ \mu\text{F}$$

Then recognize that this capacitor, the $4.00\ \mu\text{F}$ capacitor, and the $6.00\ \mu\text{F}$ capacitor are all connected in parallel between points a and b . Thus, the equivalent capacitance between points a and b is



$$C_{eq} = 4.00\ \mu\text{F} + 2.92\ \mu\text{F} + 6.00\ \mu\text{F} = \boxed{12.9\ \mu\text{F}}$$

- 16.43** The capacitance is

$$C = \frac{\epsilon_0 A}{d} = \frac{(8.85 \times 10^{-12}\ \text{C}^2/\text{N} \cdot \text{m}^2)(2.00 \times 10^{-4}\ \text{m}^2)}{5.00 \times 10^{-3}\ \text{m}} = 3.54 \times 10^{-13}\ \text{F},$$

and the stored energy is

$$W = \frac{1}{2}C(\Delta V)^2 = \frac{1}{2}(3.54 \times 10^{-13}\ \text{F})(12.0\ \text{V})^2 = \boxed{2.55 \times 10^{-11}\ \text{J}}$$

- 16.44** (a) When connected in parallel, the energy stored is

$$\begin{aligned} W &= \frac{1}{2}C_1(\Delta V)^2 + \frac{1}{2}C_2(\Delta V)^2 = \frac{1}{2}(C_1 + C_2)(\Delta V)^2 \\ &= \frac{1}{2}[(25.0 + 5.00) \times 10^{-6}\ \text{F}](100\ \text{V})^2 = \boxed{0.150\ \text{J}} \end{aligned}$$

- (b) When connected in series, the equivalent capacitance is

$$C_{eq} = \left(\frac{1}{25.0} + \frac{1}{5.00} \right)^{-1}\ \mu\text{F} = 4.17\ \mu\text{F}$$

From $W = \frac{1}{2}C_{eq}(\Delta V)^2$, the potential difference required to store the same energy as in part (a) above is

$$\Delta V = \sqrt{\frac{2W}{C_{eq}}} = \sqrt{\frac{2(0.150\ \text{J})}{4.17 \times 10^{-6}\ \text{F}}} = \boxed{268\ \text{V}}$$

16.45 The capacitance of this parallel plate capacitor is

$$C = \epsilon_0 \frac{A}{d} = \left(8.85 \times 10^{-12} \frac{\text{C}^2}{\text{N} \cdot \text{m}^2} \right) \frac{(1.0 \times 10^6 \text{ m}^2)}{(800 \text{ m})} = 1.1 \times 10^{-8} \text{ F}$$

With an electric field strength of $E = 3.0 \times 10^6 \text{ N/C}$ and a plate separation of $d = 800 \text{ m}$, the potential difference between plates is

$$\Delta V = Ed = (3.0 \times 10^6 \text{ V/m})(800 \text{ m}) = 2.4 \times 10^9 \text{ V}$$

Thus, the energy available for release in a lightning strike is

$$W = \frac{1}{2} C (\Delta V)^2 = \frac{1}{2} (1.1 \times 10^{-8} \text{ F}) (2.4 \times 10^9 \text{ V})^2 = \boxed{3.2 \times 10^{10} \text{ J}}$$

16.46 The energy transferred to the water is

$$W = \frac{1}{100} \left[\frac{1}{2} Q (\Delta V) \right] = \frac{(50.0 \text{ C})(1.00 \times 10^8 \text{ V})}{200} = 2.50 \times 10^7 \text{ J}$$

Thus, if m is the mass of water boiled away,

$$W = m [c(\Delta T) + L_v] \text{ becomes}$$

$$2.50 \times 10^7 \text{ J} = m \left[\left(4186 \frac{\text{J}}{\text{kg} \cdot ^\circ\text{C}} \right) (100^\circ\text{C} - 30.0^\circ\text{C}) + 2.26 \times 10^6 \text{ J/kg} \right]$$

$$\text{giving } m = \frac{2.50 \times 10^7 \text{ J}}{2.55 \text{ J/kg}} = \boxed{9.79 \text{ kg}}$$

16.47 The initial capacitance (with air between the plates) is $C_i = Q/(\Delta V)_i$, and the final capacitance (with the dielectric inserted) is $C_f = Q/(\Delta V)_f$ where Q is the constant quantity of charge stored on the plates.

$$\text{Thus, the dielectric constant is } \kappa = \frac{C_f}{C_i} = \frac{(\Delta V)_i}{(\Delta V)_f} = \frac{100 \text{ V}}{25 \text{ V}} = \boxed{4.0}$$

$$\textbf{16.48 (a) } E = \frac{\Delta V}{d} = \frac{6.00 \text{ V}}{2.00 \times 10^{-3} \text{ m}} = \boxed{3.00 \times 10^3 \text{ V/m}}$$

(b) With air between the plates, the capacitance is

$$C_{\text{air}} = \epsilon_0 \frac{A}{d} = \left(8.85 \times 10^{-12} \frac{\text{C}^2}{\text{N} \cdot \text{m}^2} \right) \frac{(2.00 \times 10^{-4} \text{ m}^2)}{(2.00 \times 10^{-3} \text{ m})} = 8.85 \times 10^{-13} \text{ F},$$

and with water ($\kappa = 80$) between the plates, the capacitance is

$$C = \kappa C_{\text{air}} = (80)(8.85 \times 10^{-13} \text{ F}) = 7.08 \times 10^{-11} \text{ F}$$

The stored charge when water is between the plates is

$$Q = C(\Delta V) = (7.08 \times 10^{-11} \text{ F})(6.00 \text{ V}) = 4.25 \times 10^{-10} \text{ C} = \boxed{42.5 \text{ nC}}$$

(c) When air is the dielectric between the plates, the stored charge is

$$Q_{\text{air}} = C_{\text{air}}(\Delta V) = (8.85 \times 10^{-13} \text{ F})(6.00 \text{ V}) = 5.31 \times 10^{-12} \text{ C} = \boxed{5.31 \text{ pC}}$$

16.49 (a) The dielectric constant for Teflon is $\kappa = 2.1$, so the capacitance is

$$C = \frac{\kappa \epsilon_0 A}{d} = \frac{(2.1)(8.85 \times 10^{-12} \text{ C}^2/\text{N} \cdot \text{m}^2)(175 \times 10^{-4} \text{ m}^2)}{0.0400 \times 10^{-3} \text{ m}}$$

$$C = 8.1 \times 10^{-9} \text{ F} = \boxed{8.1 \text{ nF}}$$

(b) For Teflon, the dielectric strength is $E_{\text{max}} = 60.0 \times 10^6 \text{ V/m}$, so the maximum voltage is

$$V_{\text{max}} = E_{\text{max}} d = (60 \times 10^6 \text{ V/m})(0.0400 \times 10^{-3} \text{ m})$$

$$V_{\text{max}} = 2.4 \times 10^3 \text{ V} = \boxed{2.4 \text{ kV}}$$

16.50 Before the capacitor is rolled, the capacitance of this parallel plate capacitor is

$$C = \frac{\kappa \epsilon_0 A}{d} = \frac{\kappa \epsilon_0 (w \times L)}{d},$$

where A is the surface area of one side of a foil strip. Thus, the required length is

$$L = \frac{C \cdot d}{\kappa \epsilon_0 w} = \frac{(9.50 \times 10^{-8} \text{ F})(0.0250 \times 10^{-3} \text{ m})}{(3.70)(8.85 \times 10^{-12} \text{ C}^2/\text{N} \cdot \text{m}^2)(7.00 \times 10^{-2} \text{ m})} = \boxed{1.04 \text{ m}}$$

$$16.51 \quad (a) \quad V = \frac{m}{\rho} = \frac{1.00 \times 10^{-12} \text{ kg}}{1100 \text{ kg/m}^3} = \boxed{9.09 \times 10^{-16} \text{ m}^3}$$

Since $V = \frac{4\pi r^3}{3}$, the radius is $r = \left[\frac{3V}{4\pi} \right]^{1/3}$, and the surface area is

$$A = 4\pi r^2 = 4\pi \left[\frac{3V}{4\pi} \right]^{2/3} = 4\pi \left[\frac{3(9.09 \times 10^{-16} \text{ m}^3)}{4\pi} \right]^{2/3} = \boxed{4.54 \times 10^{-10} \text{ m}^2}$$

$$(b) \quad C = \frac{\kappa \epsilon_0 A}{d}$$

$$= \frac{(5.00)(8.85 \times 10^{-12} \text{ C}^2/\text{N} \cdot \text{m}^2)(4.54 \times 10^{-10} \text{ m}^2)}{100 \times 10^{-9} \text{ m}} = \boxed{2.01 \times 10^{-13} \text{ F}}$$

$$(c) \quad Q = C(\Delta V) = (2.01 \times 10^{-13} \text{ F})(100 \times 10^{-3} \text{ V}) = \boxed{2.01 \times 10^{-14} \text{ C}}$$

and the number of electronic charges is

$$n = \frac{Q}{e} = \frac{2.01 \times 10^{-14} \text{ C}}{1.60 \times 10^{-19} \text{ C}} = \boxed{1.26 \times 10^5}$$

16.52 Since the capacitors are in parallel, the equivalent capacitance is

$$C_{eq} = C_1 + C_2 + C_3 = \frac{\epsilon_0 A_1}{d} + \frac{\epsilon_0 A_2}{d} + \frac{\epsilon_0 A_3}{d} = \frac{\epsilon_0 (A_1 + A_2 + A_3)}{d},$$

or $C_{eq} = \boxed{\frac{\epsilon_0 A}{d} \text{ where } A = A_1 + A_2 + A_3}$

16.53 Since the capacitors are in series, the equivalent capacitance is given by

$$\frac{1}{C_{eq}} = \frac{1}{C_1} + \frac{1}{C_2} + \frac{1}{C_3} = \frac{d_1}{\epsilon_0 A} + \frac{d_2}{\epsilon_0 A} + \frac{d_3}{\epsilon_0 A} = \frac{d_1 + d_2 + d_3}{\epsilon_0 A},$$

or $C_{eq} = \boxed{\frac{\epsilon_0 A}{d} \text{ where } d = d_1 + d_2 + d_3}$

16.54 (a) At $r = 2.70 \mu\text{m}$ from the cell center, the ion is located inside the spherically symmetric charge distributions on the surfaces of the cell wall. From Gauss's law, the field is zero at such a location, so $F = qE = q(0) = \boxed{0}$.

(b) With spherically symmetric charge distributions, consider a spherical gaussian surface of radius $r = 2.92 \mu\text{m}$ centered on the cell center. From Gauss's law, the electric field at points on the gaussian surface is the same as if the total charge inside the surface, $Q = -1.00 \times 10^{-15} \text{ C}$, was located at the center. Thus,

$$F = qE = q \left(\frac{k_e Q}{r^2} \right) \\ = (+1.60 \times 10^{-19} \text{ C}) \left[\left(8.99 \times 10^9 \frac{\text{N} \cdot \text{m}^2}{\text{C}^2} \right) \frac{(-1.00 \times 10^{-15} \text{ C})}{(2.92 \times 10^{-6} \text{ m})^2} \right]$$

$$F = -1.69 \times 10^{-13} \text{ N}$$

or $\mathbf{F} = \boxed{1.69 \times 10^{-13} \text{ N directed radially inward}}$

(c) At $r = 4.00 \mu\text{m}$ from the cell center, the ion is located outside a spherically symmetric charge distribution having zero net charge. From Gauss's law, the field is zero at such a location, so $F = qE = q(0) = \boxed{0}$.

16.55 The electric field is directed vertically downward with $E_y = -2.00 \times 10^5 \text{ N/C}$. Thus,

$$a_y = \frac{\Sigma F_y}{m} = \frac{qE_y - mg}{m} = \frac{(-1.60 \times 10^{-19} \text{ C})(-2.00 \times 10^5 \text{ N/C})}{1.00 \times 10^{-15} \text{ kg}} - 9.80 \text{ m/s}^2,$$

or $a_y = +22.2 \text{ m/s}^2$

At $t = 75.0 \text{ ms} = 0.0750 \text{ s}$,

$$v_y = v_{yi} + a_y t = 0 + (22.2 \text{ m/s}^2)(0.0750 \text{ s}) = \boxed{1.67 \text{ m/s upward}}, \text{ and}$$

$$y = v_{yi} t + \frac{1}{2} a_y t^2 = 0 + \frac{1}{2} (22.2 \text{ m/s}^2)(0.0750 \text{ s})^2$$

$$= 0.0624 \text{ m} = \boxed{6.24 \text{ cm above bottom plate}}$$

16.56 The electric field is directed vertically downward with $E_y = -9.20 \times 10^4 \text{ N/C}$. Thus,

$$a_y = \frac{\Sigma F_y}{m} = \frac{qE_y - mg}{m} = \frac{(2.00 \times 10^{-9} \text{ C})(-9.20 \times 10^4 \text{ N/C})}{7.50 \times 10^{-10} \text{ kg}} - 9.80 \text{ m/s}^2,$$

or $a_y = -2.45 \times 10^5 \text{ m/s}^2$.

The time for the particle to travel 2.00 cm horizontally between the plates is

$$t = \frac{\Delta x}{v_x} = \frac{2.00 \times 10^{-2} \text{ m}}{150 \text{ m/s}} = 1.33 \times 10^{-4} \text{ s}.$$

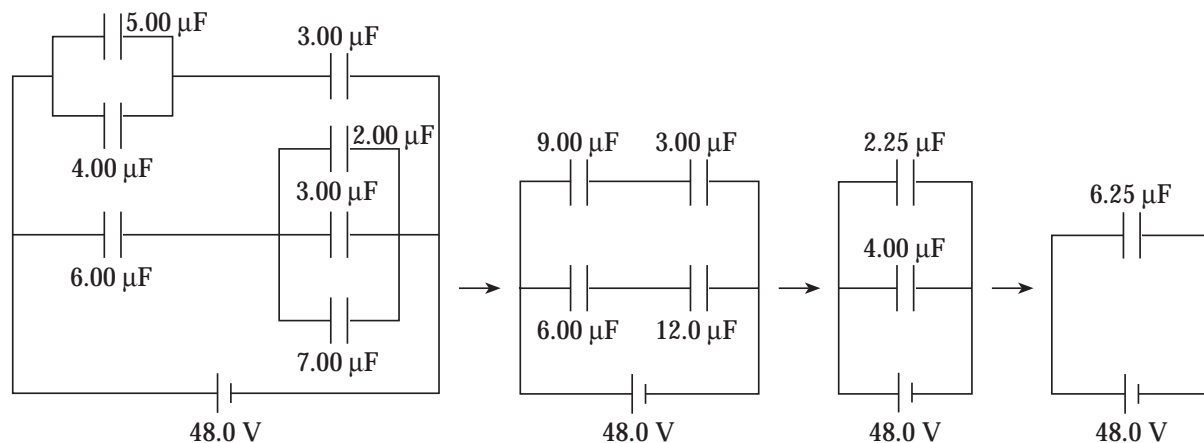
At this time,

$$v_y = v_{yi} + a_y t = 0 + (-2.45 \times 10^5 \text{ m/s}^2)(1.33 \times 10^{-4} \text{ s}) = -32.7 \text{ m/s}$$

Therefore, the direction of motion as the particle emerges from the plates is

$$\theta = \tan^{-1}\left(\frac{v_y}{v_x}\right) = \tan^{-1}\left(\frac{-32.7 \text{ m/s}}{150 \text{ m/s}}\right) = -12.3^\circ, \text{ or } \delta = \boxed{12.3^\circ}$$

16.57 The stages for the reduction of this circuit are shown below.



Thus, $C_{eq} = \boxed{6.25 \mu\text{F}}$

- 16.58** (a) Due to spherical symmetry, the charge on each of the concentric spherical shells will be uniformly distributed over that shell. Inside a spherical surface having a uniform charge distribution, the electric field due to the charge on that surface is zero. Thus, in this region, the potential due to the charge on that surface is constant and equal to the potential at the surface. Outside a spherical surface having a uniform charge distribution, the potential due to the charge on that surface is given by $V = \frac{k_e q}{r}$ where r is the distance from the center of that surface and q is the charge on that surface.

In the region between a pair of concentric spherical shells, with the inner shell having charge $+Q$ and the outer shell having radius b and charge $-Q$, the total electric potential is given by

$$V = V_{\text{due to inner shell}} + V_{\text{due to outer shell}} = \frac{k_e Q}{r} + \frac{k_e (-Q)}{b} = k_e Q \left(\frac{1}{r} - \frac{1}{b} \right)$$

The potential difference between the two shells is therefore,

$$\Delta V = V|_{r=a} - V|_{r=b} = k_e Q \left(\frac{1}{a} - \frac{1}{b} \right) - k_e Q \left(\frac{1}{b} - \frac{1}{b} \right) = k_e Q \left(\frac{b-a}{ab} \right).$$

The capacitance of this device is given by

$$C = \frac{Q}{\Delta V} = \boxed{\frac{ab}{k_e(b-a)}}$$

- (b) When $b \gg a$, then $b-a \approx b$. Thus, in the limit as $b \rightarrow \infty$, the capacitance found above becomes

$$C \rightarrow \frac{ab}{k_e(b)} = \frac{a}{k_e} = \boxed{4\pi \epsilon_0 a}$$

- 16.59** The energy stored in a charged capacitor is $W = \frac{1}{2} C (\Delta V)^2$. Hence,

$$\Delta V = \sqrt{\frac{2W}{C}} = \sqrt{\frac{2(300 \text{ J})}{30.0 \times 10^{-6} \text{ F}}} = 4.47 \times 10^3 \text{ V} = \boxed{4.47 \text{ kV}}$$

16.60 From $Q = C(\Delta V)$, the capacitance of the capacitor with air between the plates is

$$C_0 = \frac{Q_0}{\Delta V} = \frac{150 \mu\text{C}}{\Delta V}$$

After the dielectric is inserted, the potential difference is held to the original value, but the charge changes to $Q = Q_0 + 200 \mu\text{C} = 350 \mu\text{C}$. Thus, the capacitance with the dielectric slab in place is

$$C = \frac{Q}{\Delta V} = \frac{350 \mu\text{C}}{\Delta V}.$$

The dielectric constant of the dielectric slab is therefore

$$\kappa = \frac{C}{C_0} = \left(\frac{350 \mu\text{C}}{\Delta V} \right) \left(\frac{\Delta V}{150 \mu\text{C}} \right) = \frac{350}{150} = \boxed{2.33}$$

16.61 The charges initially stored on the capacitors are

$$Q_1 = C_1(\Delta V)_i = (6.0 \mu\text{F})(250 \text{ V}) = 1.5 \times 10^3 \mu\text{C},$$

and $Q_2 = C_2(\Delta V)_i = (2.0 \mu\text{F})(250 \text{ V}) = 5.0 \times 10^2 \mu\text{C}$

When the capacitors are connected in parallel, with the negative plate of one connected to the positive plate of the other, the net stored charge is

$$Q = Q_1 - Q_2 = 1.5 \times 10^3 \mu\text{C} - 5.0 \times 10^2 \mu\text{C} = 1.0 \times 10^3 \mu\text{C}$$

The equivalent capacitance of the parallel combination is $C_{eq} = C_1 + C_2 = 8.0 \mu\text{F}$. Thus, the final potential difference across each of the capacitors is

$$(\Delta V)' = \frac{Q}{C_{eq}} = \frac{1.0 \times 10^3 \mu\text{C}}{8.0 \mu\text{F}} = 125 \text{ V},$$

and the final charge on each capacitor is

$$Q'_1 = C_1(\Delta V)' = (6.0 \mu\text{F})(125 \text{ V}) = \boxed{7.5 \times 10^2 \mu\text{C}},$$

and $Q'_2 = C_2(\Delta V)' = (2.0 \mu\text{F})(125 \text{ V}) = \boxed{2.5 \times 10^2 \mu\text{C}}$

16.62 When connected in series, the equivalent capacitance is

$$C_{eq} = \left(\frac{1}{C_1} + \frac{1}{C_2} \right)^{-1} = \left(\frac{1}{4.0 \mu\text{F}} + \frac{1}{2.0 \mu\text{F}} \right)^{-1} = \frac{4}{3} \mu\text{F},$$

and the charge stored on each capacitor is

$$Q_1 = Q_2 = Q_{eq} = C_{eq}(\Delta V)_i = \left(\frac{4}{3} \mu\text{F} \right) (100 \text{ V}) = \frac{400}{3} \mu\text{C}.$$

When the capacitors are reconnected in parallel, with the positive plate of one connected to the positive plate of the other, the new equivalent capacitance is $C'_{eq} = C_1 + C_2 = 6.0 \mu\text{F}$ and the net stored charge is $Q' = Q_1 + Q_2 = 800/3 \mu\text{C}$. Therefore, the final potential difference across each of the capacitors is

$$(\Delta V)' = \frac{Q'}{C'_{eq}} = \frac{800/3 \mu\text{C}}{6.0 \mu\text{F}} = 44.4 \text{ V}$$

The final charge on each of the capacitors is

$$Q'_1 = C_1(\Delta V)' = (4.0 \mu\text{F})(44.4 \text{ V}) = \boxed{1.8 \times 10^2 \mu\text{C}},$$

$$\text{and } Q'_2 = C_2(\Delta V)' = (2.0 \mu\text{F})(44.4 \text{ V}) = \boxed{89 \mu\text{C}}$$

16.63 (a) $V = V_1 + V_2 + V_3 = \frac{k_e Q}{x+d} - \frac{2k_e Q}{x} + \frac{k_e Q}{x-d}$

$$= k_e Q \left[\frac{x(x-d) - 2(x^2 - d^2) + x(x+d)}{x(x^2 - d^2)} \right],$$

$$\text{which simplifies to } V = \frac{2k_e Q d}{x(x^2 - d^2)} = \boxed{\frac{2k_e Q d}{x^3 - xd^2}}$$

(b) When $x \gg d$, then $x^2 - d^2 \approx x^2$

$$\text{and } V = \frac{2k_e Q d}{x(x^2 - d^2)} \text{ becomes } V \approx \boxed{\frac{2k_e Q d}{x^3}}$$

16.64 The energy required to melt the lead sample is

$$\begin{aligned} W &= m \left[c_{pb} (\Delta T) + L_f \right] \\ &= (6.00 \times 10^{-6} \text{ kg}) \left[(128 \text{ J/kg} \cdot ^\circ\text{C}) (327.3^\circ\text{C} - 20.0^\circ\text{C}) + 24.5 \times 10^3 \text{ J/kg} \right] \\ &= 0.383 \text{ J} \end{aligned}$$

The energy stored in a capacitor is $W = \frac{1}{2} C (\Delta V)^2$, so the required potential difference is

$$\Delta V = \sqrt{\frac{2W}{C}} = \sqrt{\frac{2(0.383 \text{ J})}{52.0 \times 10^{-6} \text{ F}}} = \boxed{121 \text{ V}}$$

16.65 The capacitance of a parallel plate capacitor is $C = \frac{\kappa \epsilon_0 A}{d}$

Thus, $\kappa \epsilon_0 A = C \cdot d$, and the given force equation may be rewritten as

$$F = \frac{Q^2}{2\kappa \epsilon_0 A} = \frac{Q^2}{2C \cdot d} = \frac{(Q/C)^2 C}{2d} = \frac{C (\Delta V)^2}{2d}$$

With the given data values, the force is

$$F = \frac{C (\Delta V)^2}{2d} = \frac{(20 \times 10^{-6} \text{ F}) (100 \text{ V})^2}{2(2.0 \times 10^{-3} \text{ m})} = \boxed{50 \text{ N}}$$

16.66 The electric field between the plates is directed downward with magnitude

$$|E_y| = \frac{\Delta V}{d} = \frac{100 \text{ V}}{2.00 \times 10^{-3} \text{ m}} = 5.00 \times 10^4 \text{ N/m}$$

Since the gravitational force experienced by the electron is negligible in comparison to the electrical force acting on it, the vertical acceleration is

$$a_y = \frac{F_y}{m_e} = \frac{qE_y}{m_e} = \frac{(-1.60 \times 10^{-19} \text{ C})(-5.00 \times 10^4 \text{ N/m})}{9.11 \times 10^{-31} \text{ kg}} = +8.78 \times 10^{15} \text{ m/s}^2$$

- (a) At the closest approach to the bottom plate, $v_y = 0$. Thus, the vertical displacement from point O is found from $v_y^2 = v_{yi}^2 + 2a_y(\Delta y)$ as

$$\Delta y = \frac{0 - (v_{yi} \sin \theta_0)^2}{2a_y} = \frac{-\left[-(5.6 \times 10^6 \text{ m/s}) \sin 45^\circ\right]^2}{2(8.78 \times 10^{15} \text{ m/s}^2)} = -0.89 \text{ m m} .$$

The minimum distance above the bottom plate is then

$$d = \frac{D}{2} + \Delta y = 1.00 \text{ m m} - 0.89 \text{ m m} = \boxed{0.11 \text{ m m}}$$

- (b) The time for the electron to go from point O to the upper plate is found from

$$\Delta y = v_{yi}t + \frac{1}{2}a_y t^2 \text{ as}$$

$$+1.00 \times 10^{-3} \text{ m} = \left[-\left(5.6 \times 10^6 \frac{\text{m}}{\text{s}}\right) \sin 45^\circ \right] t + \frac{1}{2} \left(8.78 \times 10^{15} \frac{\text{m}}{\text{s}^2}\right) t^2$$

Solving for t gives a positive solution of $t = 1.11 \times 10^{-9} \text{ s}$. The horizontal displacement from point O at this time is

$$\Delta x = v_{xi}t = \left[(5.6 \times 10^6 \text{ m/s}) \cos 45^\circ \right] (1.11 \times 10^{-9} \text{ s}) = \boxed{4.4 \text{ m m}}$$

Answers to Even Numbered Conceptual Questions

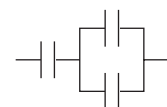
2. The statement is true. The electric field and potential at points outside a spherically symmetric charge distribution is the same as would exist if all the charge was concentrated as a point charge at the center of the distribution. Thus, the potential is $V = k_e Q / r$, and a surface for which all points have a fixed value of r (i.e., a sphere) will have a constant potential at all points on it, or will be an equipotential surface.
4. Electric potential V is a measure of the potential energy per unit charge. Electrical potential energy, $PE = QV$, gives the energy of the total charge Q .
6. A sharp point on a charged conductor would produce a large electric field in the region near the point. An electric discharge could most easily take place at the point.
8. There are eight different combinations that use all three capacitors in the circuit. These combinations and their equivalent capacitances are:

All three capacitors in series - $C_{eq} = \left(\frac{1}{C_1} + \frac{1}{C_2} + \frac{1}{C_3} \right)^{-1}$

All three capacitors in parallel - $C_{eq} = C_1 + C_2 + C_3$

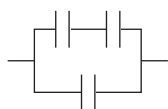
One capacitor in series with a parallel combination of the other two:

$$C_{eq} = \left(\frac{1}{C_1 + C_2} + \frac{1}{C_3} \right)^{-1}, \quad C_{eq} = \left(\frac{1}{C_3 + C_1} + \frac{1}{C_2} \right)^{-1}, \quad C_{eq} = \left(\frac{1}{C_2 + C_3} + \frac{1}{C_1} \right)^{-1}$$



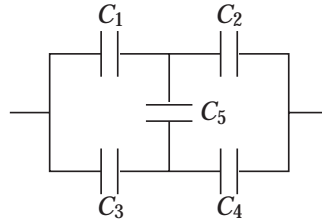
One capacitor in parallel with a series combination of the other two:

$$C_{eq} = \left(\frac{1}{C_1 + C_2} \right)^{-1} + C_3, \quad C_{eq} = \left(\frac{1}{C_3 + C_1} \right)^{-1} + C_2, \quad C_{eq} = \left(\frac{1}{C_2 + C_3} \right)^{-1} + C_1$$



10. Nothing happens to the charge if the wires are disconnected. If the wires are connected to each other, the charge rapidly recombines, leaving the capacitor uncharged.
12. The energy stored in a capacitor is $W = \frac{1}{2} C (\Delta V)^2$.
 - (a) If the potential difference is doubled while all other factors remain constant, the stored energy is quadrupled.
 - (b) Assuming a parallel plate capacitor, the capacitance is $C = \kappa \epsilon_0 A / d$ and the energy stored becomes $W = \frac{\kappa \epsilon_0 A (\Delta V)^2}{2d}$. Thus, if the plate separation is doubled while the potential difference is held constant, the stored energy will be cut in half.

- 14.** All connections of capacitors are not simple combinations of series and parallel circuits. As an example of such a complex circuit, consider the network of five capacitors C_1 , C_2 , C_3 , C_4 , and C_5 shown below.



This combination cannot be reduced to a simple equivalent by the techniques of combining series and parallel capacitors.

- 16.** The material of the dielectric may be able to withstand a larger electric field than air can withstand before breaking down to pass a spark between the capacitor plates.

Answers to Even Numbered Problems

2. (a) $-6.0 \times 10^{-4} \text{ J}$ (b) -50 V
4. $6.41 \times 10^{-19} \text{ C}$
6. $4.3 \times 10^6 \text{ J}$
8. (a) 59.0 V (b) $4.55 \times 10^6 \text{ m/s}$
10. 40.2 kV
12. $4.22 \times 10^5 \text{ V}$
14. -9.08 J
16. (a) $5.93 \times 10^5 \text{ m/s}$ (b) $1.38 \times 10^4 \text{ m/s}$
18. $7.25 \times 10^6 \text{ m/s}$
22. (a) $48.0 \text{ } \mu\text{C}$ (b) $6.00 \text{ } \mu\text{C}$
24. (a) 800 V (b) $Q_f = Q_i/2$
26. $31.0 \text{ } \text{\AA}$
28. 1.23 kV
30. (a) $18.0 \text{ } \mu\text{F}$ (b) $1.78 \text{ } \mu\text{F}$
32. 3.00 pF and 6.00 pF
34. (a) $12.0 \text{ } \mu\text{F}$ (b) $Q_4 = 144 \text{ } \mu\text{C}$, $Q_2 = 72.0 \text{ } \mu\text{C}$, $Q_{24} = Q_8 = 216 \text{ } \mu\text{C}$
36. Yes. Connect a parallel combination of two capacitors in series with another parallel combination of two capacitors. $\Delta V = 45.0 \text{ V}$.
38. $30.0 \text{ } \mu\text{F}$
40. $6.04 \text{ } \mu\text{F}$
42. $12.9 \text{ } \mu\text{F}$
44. (a) 0.150 J (b) 268 V
46. 9.79 kg

48. (a) $3.00 \times 10^3 \text{ V/m}$ (b) 42.5 nC (c) 5.31 pC
50. 1.04 m
54. (a) 0 (b) $1.69 \times 10^{-13} \text{ N}$ radially inward (c) 0
56. 12.3°
60. $\kappa = 2.33$
62. $1.8 \times 10^2 \mu\text{C}$ on C_1 , $89 \mu\text{C}$ on C_2
64. 121 V
66. (a) 0.11 m (b) at $x = 4.4 \text{ mm}$

